

AD-A125 036


HAND-HELD COMPUTER PROGRAMS FOR PRELIMINARY HELICOPTER
DESIGN(U) NAVAL POSTGRADUATE SCHOOL MONTEREY CA
P J FARDINK OCT 82


1/2

UNCLASSIFIED

F/G 9/2-

NL





MICROCOPY RESOLUTION TEST CHART
NATIONAL BUREAU OF STANDARDS 1963-A

AD A1 25036

NAVAL POSTGRADUATE SCHOOL Monterey, California



THESIS

HAND-HELD COMPUTER PROGRAMS FOR
PRELIMINARY HELICOPTER DESIGN

by

Paul John Fardink

October 1982

Thesis Advisor:

Donald M. Layton

Approved for public release; distribution unlimited

DTIC FILE COPY

33 22 220 086

DTIC
SEARCHED
INDEXED
OCT 1 1983
E

UNCLASSIFIED

SECURITY CLASSIFICATION OF THIS PAGE (When Data Entered)

REPORT DOCUMENTATION PAGE		READ INSTRUCTIONS BEFORE COMPLETING FORM
1. REPORT NUMBER	2. GOVT ACCESSION NO.	3. RECIPIENT'S CATALOG NUMBER
	AD-A125036	
4. TITLE (and Subtitle) Hand-Held Computer Programs for Preliminary Helicopter Design		5. TYPE OF REPORT & PERIOD COVERED Master's Thesis October 1982
		6. PERFORMING ORG. REPORT NUMBER
7. AUTHOR(s) Paul John Fardink		8. CONTRACT OR GRANT NUMBER(s)
9. PERFORMING ORGANIZATION NAME AND ADDRESS Naval Postgraduate School Monterey, California 93940		10. PROGRAM ELEMENT, PROJECT, TASK AREA & WORK UNIT NUMBERS
11. CONTROLLING OFFICE NAME AND ADDRESS Naval Postgraduate School Monterey, California 93940		12. REPORT DATE October 1982
		13. NUMBER OF PAGES 179
14. MONITORING AGENCY NAME & ADDRESS (if different from Controlling Office)		15. SECURITY CLASS. (of this report) Unclassified
		15a. DECLASSIFICATION/DOWNGRADING SCHEDULE
16. DISTRIBUTION STATEMENT (of this Report) Approved for public release; distribution unlimited		
17. DISTRIBUTION STATEMENT (of the abstract entered in Block 20, if different from Report)		
18. SUPPLEMENTARY NOTES		
19. KEY WORDS (Continue on reverse side if necessary and identify by block number) HP-41 Helicopter Preliminary Design		
20. ABSTRACT (Continue on reverse side if necessary and identify by block number) This project gives the user of the HP-41 handheld programmable calculator a series of programs that give acceptable results during the preliminary phases of the helicopter design process. The project consists of three parts. The first part consists of several short programs and their subroutine form. These programs and subroutines compute density		

DD FORM 1473
1 JAN 73

EDITION OF 1 NOV 65 IS OBSOLETE
S/N 0102-014-6001

UNCLASSIFIED

SECURITY CLASSIFICATION OF THIS PAGE (When Data Entered)

UNCLASSIFIED

SECURITY CLASSIFICATION OF THIS PAGE/When Data Entered

altitude, density, disc area, solidity, tip velocity, induced velocity, coefficient of thrust, tip loss factor, equivalent chord, and ground effect.

The second part consists of major subroutines. These subroutines compute profile power, induced power, climb power, parasite power, and total power; equivalent area and induced power for a tandem rotor; and data input and change.

The third part consists of the main programs. These programs compute the various power requirements for hovering flight, forward (straight and level) flight, vertical flight, and forward climbing flight; also tailrotor power, autorotative flight, and tandem rotor flight.

Accession For	
NTIS GRA&I	<input checked="" type="checkbox"/>
DTIC TAB	<input type="checkbox"/>
Unannounced	<input type="checkbox"/>
Justification	
By _____	
Distribution/	
Availability Codes	
Dist _____	
A	

0210 1
COPY
REC'D 2

Approved for public release; distribution unlimited

Hand-Held Computer Programs for
Preliminary Helicopter Design

by

Paul John Fardink
Major, United States Army
B.S., United States Military Academy, 1970

Submitted in partial fulfillment of the
requirements for the degree of

MASTER OF SCIENCE IN AERONAUTICAL ENGINEERING

from the

NAVAL POSTGRADUATE SCHOOL
October 1982

Author:

Paul J. Fardink

Approved by:

Donald M. Layton

Thesis Advisor

W. F. Pluta

Chairman, Department of Aeronautics

William M. Tolles

Dean of Science and Engineering

ABSTRACT

This project gives the user of the HP-41 handheld programmable calculator a series of programs that give acceptable results during the preliminary phases of the helicopter design process. The project consists of three parts.

The first part consists of several short programs and their subroutine form. These programs and subroutines compute density altitude, density, disc area, solidity, tip velocity, induced velocity, coefficient of thrust, tip loss factor, equivalent chord, and ground effect.

The second part consists of major subroutines. These subroutines compute profile power, induced power, climb power, parasite power, and total power; equivalent area and induced power for a tandem rotor; and data input and change.

The third part consists of the main programs. These programs compute the various power requirements for hovering flight, forward (straight and level) flight, vertical flight, and forward climbing flight; also tailrotor power, autorotative flight, and tandem rotor flight.

TABLE OF CONTENTS

I. INTRODUCTION 9

II. APPROACH TO THE PROBLEM 10

III. THE SOLUTION 12

IV. RESULTS 16

V. CONCLUSIONS AND RECOMMENDATIONS 18

APPENDIX A. QUICK REFERENCE TABLES 19

APPENDIX B. MINOR PROGRAMS AND SUBROUTINES 29

 DENSITY ALTITUDE 30

 DENSITY 33

 DISC AREA 36

 SOLIDITY 38

 TIP VELOCITY 41

 INDUCED VELOCITY 44

 COEFFICIENT OF THRUST 48

 TIP LOSS FACTOR 52

 EQUIVALENT CHORD 56

 GROUND EFFECT 60

APPENDIX C. MAJOR SUBROUTINES 64

 COEFFICIENTS 65

 VERTICAL COMPONENT OF INDUCED VELOCITY 68

 DATA 71

 CHANGE 75

 PROFILE POWER 79

INDUCED POWER	82
CLIMB POWER	86
PARASITE POWER	89
TOTAL POWER	92
EQUIVALENT AREA	95
TANDEM ROTOR INDUCED POWER	99
APPENDIX D. MAIN PROGRAMS	103
HOVER	104
FORWARD FLIGHT	110
VERTICAL FLIGHT	118
FLIGHT	126
TAILROTOR	139
AUTOROTATION	153
TANDEM	163
CHECKS	172
LIST OF REFERENCES	178
INITIAL DISTRIBUTION LIST	179

LIST OF TABLES

I.	AN ALPHABETICAL LISTING OF ALL CALCULATOR DISPLAYS AND THEIR INTENDED MEANINGS	20
II.	PROGRAM AND SUBROUTINE STORAGE REQUIREMENTS	25
III.	STORAGE REGISTER UTILIZATION	27

LIST OF FIGURES

1. Tapered Rotor Blade	56
2. Ground Effect Curve	60
3. Planform View of Overlapped Rotors	95

I. INTRODUCTION

A. BACKGROUND

This project was undertaken to give the user of the HP-41 Programmable Calculator a series of programs that would give acceptable results during the preliminary phases of the helicopter design process. The HP-41 is a handheld programmable calculator designed and manufactured by the Hewlett-Packard Company of Corvallis, Oregon. This personal computing system easily fits into a coat pocket, thus being able to go anywhere. This, in turn, gives the preliminary design engineer a computational versatility and flexibility not previously experienced. To date, no known project of this magnitude has been attempted with a handheld calculator.

B. GOALS

The single goal of this project was to construct a series of self-prompting, alpha-numeric programs that could be used with acceptable results during the preliminary helicopter design process. In doing this, this project supplements the theory and computational processes as outlined by Professor Donald M. Layton in Aircraft Performance [Ref. 1]. An additional projected end use was for utilization by the Aeronautical Engineering students of the Naval Postgraduate School enrolled in the Helicopter Performance and Helicopter Design courses.

II. APPROACH TO THE PROBLEM

The basic line of approach used in this project was to construct calculator programs consisting mainly of subroutines. The subroutine is the key ingredient of this effort for the following reasons:

1. The use of subroutines greatly reduces the amount of required calculator program memory. Numerous main programs utilize the same basic equations and computational techniques even though the end results will be different. When these processes are organized into subroutine format, the numerous main programs can call and execute these common subroutines repeatedly, until the desired outputs are calculated for the particular flight conditions. For example, program "FORFLT" and program "VERFLT" are different in that program "FORFLT" will calculate the power requirements for forward (straight and level) flight while program "VERFLT" will calculate the power requirements for vertical flight. The results will be different, yet both main programs will call and execute fifteen identical subroutines where computational techniques are the same for both programs. The end result being that program memory, i.e. the number of calculator registers required, is optimized.

2. The use of subroutines greatly enhances the ease of program editing. Each individual subroutine calculates a

single specific function or variable, i.e. rotor disc area, rotor solidity, ground effect, density of the air, etc. Perhaps the user of these programs does not agree with the theory used for calculating ground effect or perhaps the user knows of a shorter technique that will greatly reduce the required amount of program memory for storage of the subroutine. The user need only edit that particular subroutine and no more. Confusion has been minimized, and there is no need for massive amounts of program editing.

These subroutines and this project utilize the basic aerodynamic theories of the helicopter, and it is not the intention of this project to teach this theory, nor is it the intention of this project to teach calculator programming operations. The user of these programs is assumed to have a basic knowledge of helicopter aerodynamics and it is further assumed that the user is proficient with the HP-41 programmable calculator.

III. THE SOLUTION

A. PROGRAM AND SUBROUTINE ORGANIZATION

The program and subroutine documentation used throughout this project exists in six sections. The nature of each of these sections is as follows:

1. Purpose

This section gives a brief description of the intended purpose of the program or subroutine. This section will often show a listing of the various program displays and outputs.


2. Equations

This section lists the various equations used within the program or subroutine. If the program or subroutine should call and execute another subroutine, this section will not list nor discuss the equations used by the "called" subroutine. This section will also list and describe the notation used in the equations listed. Whenever applicable, units are also listed as part of the notation description. The vast majority of the equations used in these programs come from Aircraft Performance [Ref. 1], NACA Report [1235] [Ref. 2], and Aerodynamics of V/STOL Flight [Ref. 3].

3. Flowchart

This section contains a flowchart which is an outline of the computational process utilized in the program or

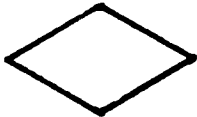
subroutine. The standard HP-41 flowcharting symbols as outlined in the Hewlett-Packard Owner's Handbook and Programming Guide [Ref. 4] have been used:



circles for beginning and ending a program or subroutine



rectangles to represent the functional operations



diamonds to represent the decision processes.

The rectangle was modified somewhat from the standard HP notation in order to visually represent a subroutine:



modified rectangle to represent subroutine operation

4. Example Problems and User Instructions

This section represents a series of example problems that when executed by the user, will serve to familiarize the user with program operation, program displays, required calculator key strokes, program notation, program inputs, and program outputs. The example problems contain the design data of actual operational military helicopters which in turn serves to familiarize the user with these aircraft. A word of warning must be emphasized. The results or outputs

of these programs when compared with actual operational data are sometimes amazingly accurate, but at other times, they are not. Again, the theory used in computation uses numerous assumptions that do not take into account actual flight and operational conditions. Therefore, when executing power requirements, these programs should never be used in lieu of the appropriate manufacturer's performance charts or operator's manuals. Again, the purpose of these programs is to give the preliminary design engineer acceptable figures in the preliminary helicopter design process and not to supercede performance charts or operator's manuals.

5. Programs and Subroutines Used

This section lists all of the programs and subroutines used during the execution of the main program or subroutine. The user must insure that the listed programs and subroutines are in program memory before execution of the program is attempted otherwise the word "NONEXISTENT" will appear in the calculator display as the calculator searches for a subroutine or program that cannot be found in the calculator's program memory. As expected, the program cannot and obviously will not be executed.

6. Program Listings

This section contains a listing of the program lines of the program or subroutine. In some cases, as in Appendix B, both the program and its subroutine version are listed. The main programs listed in Appendix D will call and execute

many of the major subroutines listed in Appendix C as well as the minor subroutines listed in Appendix B.

IV. RESULTS

The results of this programming project are presented in Appendices B, C, and D. Appendix B contains many short programs and their subroutine form. These programs execute simple calculations such as solidity of the rotor system, rotor disc area, density of the air, etc. Appendix C contains major subroutines. These subroutines execute major calculations such as induced power, profile power, data input, tandem rotor equivalent area, etc. Appendix D contains the major programs for power required calculations. These main programs call and execute many of the minor subroutines found in Appendix B and many of the major subroutines found in Appendix C.

The validity of the output of these programs is excellent for the intended purpose of preliminary helicopter design calculations and estimations. As mentioned previously, the idealized theory used does make several assumptions and thus certain limitations are imposed upon the results. Some of the limitations are listed here:

1. Symmetric airfoils with zero twist are used throughout these programs. All actual helicopters have main rotor blades which utilize some degree of twist. This in turn will affect the overall lift generation and distribution.

2. The streamlining effects of the vertical fin on tail rotor power requirements in forward flight were not modeled and thus taken into account.

3. Compressibility effects on the advancing main rotor blade and stall effects on the retreating main rotor blade were not modeled and thus taken into account. Both of these effects will add to the overall horsepower requirements in forward flight computations.

4. The theory used did not take into account accessory losses such as hydraulic pumps, electrical generators, fuel pumps, heaters and air conditioners. Nor did the theory take into account drive train losses such as gear and transmission friction. All helicopter manufacturers will in some form incorporate these losses into their performance charts.

5. These programs do not take into account the main rotor downwash effects on the helicopter fuselage. This is a small horsepower requirement and was neglected here.

6. These programs do not take into account those real world operating conditions that have an overall effect on the performance of the helicopter. These conditions include, but are not limited to, engine erosion, dirty engine compressor blades, dirty and/or dented rotor blades. Again, these programs should not be substituted for performance charts and operator's manuals.

V. CONCLUSIONS AND RECOMMENDATIONS

The user of these programs should work through the example problems given in the various program and subroutine listings. In doing so, Table I, Appendix A, An Alphabetical Listing of All Calculator Displays and Their Intended Meaning, will become a valuable aid. Table II, Appendix A, Program and Subroutine Storage Requirements, will also become useful in that it readily assists the user in keeping track of the calculator memory required and remaining. And, if it becomes necessary, Table III, Appendix A, Storage Register Utilization, will assist the user in the program editing process in that it lists the program registers used and their contents; 32 program registers have been used. The user should insure that the calculator has been sized for 031 before attempting execution of the programs.

APPENDIX A

QUICK REFERENCE TABLES

The tables in this appendix will serve the user of this project as a source of quick reference. Table I is an alphabetical listing of all the possible calculator displays and their intended meanings. Table II lists all of the programs and subroutines and their respective storage requirements both in terms of registers required and bytes required. This table readily assists the user in keeping track of the calculator memory required and remaining. Table III lists the storage registers and their utilization. This table will assist the user in the program editing process.

TABLE I

AN ALPHABETICAL LISTING OF ALL CALCULATOR
DISPLAYS AND THEIR INTENDED MEANINGS

Display	Explanation	Formula Notation
AREA=	Answer: rotor disc area in ft ²	A _D
a=?	Prompt: fraction of the radius where the taper starts on a tapered rotor blade (decimal value)	a
B=	Answer: tip loss factor (decimal value)	B
b=?	Prompt: number of blades in the rotor system	b
BOTH	indicates calculator is about to execute combination of vertical flight and horizontal flight (forward climbing flight)	-
C=?	Prompt: chord length of the rotor blade in ft	C
Cd0=?	Prompt: average profile drag coefficient	\bar{C}_{d0}
CE=	Answer: equivalent chord in ft	C _e
CHANGE?	Prompt: asks if the original input data now needs to be changed. 1 is Yes, 0 is No	-
C RV b R W	chord-rotational velocity-number of blades-radius-weight, press key on calculator keyboard directly beneath the variable in need of change	C Ω b R W
CT=	Answer: coefficient of thrust	C _T
C0=?	Prompt: root chord in ft	C ₁

TABLE I
(continued)

Cl=?	Prompt: tip chord in ft	C_1
d=?	Prompt: distance between the rotor shafts of a tandem rotor helicopter in ft	d
DA=	Answer: density altitude in ft	h_ρ
DA=?	Prompt: density altitude in ft	h_ρ
d(HOR.GLIDE)=	Answer: horizontal distance travelled on the ground at the forward autorotative flight velocity for minimum rate of descent in ft	d
D.L.=	Answer: disc loading of the rotor system in lbs/ft^2	D.L.
D.N.=	Answer: density of the air $\frac{\text{lb-sec}^2}{\text{ft}^4}$ or $\frac{\text{slug}}{\text{ft}^3}$	ρ
F=	Answer: a non-dimensional coefficient used in autorotation calculations	\bar{F}
FOR ONLY?	Prompt: execute forward flight portion of program only? 1 is Yes, 0 is No	-
FOR V=?	Prompt: forward flight velocity in kts	V_f
F.P.A.(FF)=?	Prompt: equivalent flat plate area for forward flight calculations in ft^2	f_f
F.P.A.(VF)=?	Prompt: equivalent flat plate area for vertical flight calculations in ft^2	f_v
GE=0	Answer: ground effect on the induced power is equal to zero	-

TABLE I
(continued)

GE=0, RATIO=1	Answer: ground effect on the induced power is equal to zero, therefore the ground effect ratio is equal to 1	-
H=?	Prompt: height of the rotor system above the ground in ft	h
HOVER?	Prompt: execute hovering flight portion of program only? 1 is Yes, 0 is No	-
LCM=?	Prompt: lift coefficient multiplier in drag coefficient terms	K_1
L(TAIL)=?	Prompt: tail length; distance from center of main rotor shaft to center of tailrotor shaft in ft	l_t
M(TIP)=	Answer: Mach Number at the tip of the advancing rotor blade	M_T
PA=?	Prompt: pressure altitude in ft	h_p
PC=	Answer: climb power in horsepower	P_c
PI=	Answer: induced power in horsepower	P_i
PI(TL)=	Answer: induced power with tip losses in horsepower	$P_i(TL)$
PI(TL+GE)=	Answer: induced power with tip losses plus ground effect in horsepower	$P_i(TL+GE)$
PO=	Answer: profile power in horsepower	P_o
PO(TDM)=	Answer: profile power for a tandem rotor helicopter in horsepower	P_o

TABLE I
(continued)

PP=	Answer: parasite power in horsepower	P_P
PT(ACFT)=	Answer: total power for the aircraft in horsepower	P_T
PT(MR)=	Answer: total power for the main rotor in horsepower	P_T
PT(TDM)=	Answer: total power for a tandem rotor helicopter in horsepower	P_T
PT(TR)=	Answer: total power for the tailrotor in horsepower	P_T
R=?	Prompt: radius of the rotor system in ft	R
RATIO=	Answer: ground effect ratio	-
REC=?	Prompt: is the rotor blade of rectangular planform? 1 is Yes, 0 is No	-
RV=?	Prompt: rotational velocity of the rotor system in radians/second	Ω
SOLID=	Answer: the solidity of the rotor system	σ_r
T=?	Prompt: ambient temperature in degrees celsius	T(°C)
TR DATA	the calculator is now ready to prompt for the tailrotor data input	-
U=	Answer: the advance ratio	μ
VERT ONLY?	Prompt: execute vertical flight portion of program only? 1 is Yes, 0 is No	-
VERT V=?	Prompt: vertical velocity in ft/min	V_v

TABLE I
(continued)

VF(MIN.R.O.D.)=	Answer: forward autorotative flight velocity for minimum autorotative rate of descent in kts	V_f
VI=	Answer: induced velocity in ft/sec	V_i
VT=	Answer: velocity at the rotor tip in ft/sec	V_T
VV=	Answer: vertical autorotative velocity in a vertical auto-rotation in ft/min	V_v
VV(MIN.R.O.D.)=	Answer: vertical autorotative velocity (ft/min) at the forward autorotative flight velocity for minimum autorotative rate of descent	V_v
W=	Prompt: weight of the helicopter in lbs	W

TABLE II
PROGRAM AND SUBROUTINE
STORAGE REQUIREMENTS

Subject Area	Subroutine			Program		
	Name	Reg	Byte	Name	Reg	Byte
Appendix B:						
Density Altitude	-	-	-	"DA"	12	84
Density	"DN"	7	48	"DENSITY"	4	27
Disc Area	"AD"	2	14	"AREA"	4	32
Solidity	"SD"	3	18	"SOLID"	6	46
Tip Velocity	"VT"	2	13	"VTIP"	6	37
Induced Velocity	"VI"	3	19	"VIND"	6	44
Coefficient of Thrust	"CT"	3	18	"CTHRUST"	8	58
Tip Loss Factor	"TL"	3	19	"TIPLOSS"	10	67
Equivalent Chord	-	-	-	"ECHORD"	10	70
Ground Effect	"GE"	8	59	"GEFFECT"	10	71
Appendix C						
Coefficients	"CF"	7	54	-	-	-
Vertical Com- ponent of Induced Velocity	"VC"	24	168	-	-	-
Data Input	"DATA"	11	81	-	-	-
Change of Data	"CG"	17	121	-	-	-

TABLE II (continued)

Subject Area	Name	Reg	Byte	Name	Reg	Byte
Profile Power	"PO"	9	62	-	-	-
Induced Power	"PI"	16	112	-	-	-
Climb Power	"PC"	5	31	-	-	-
Parasite Power	"PP"	6	41	-	-	-
Total Power	"PT"	5	34	-	-	-
Equivalent Area Tandem Rotor	"AE"	7	47	-	-	-
Induced Power Tandem Rotor	"PIT"	15	108	-	-	-
Appendix D						
Hover	-	-	-	"HOVER"	10	66
Forward Flight	-	-	-	"FORFLT"	19	140
Vertical Flight	-	-	-	"VERFLT"	19	133
All Flight Regimes	-	-	-	"FLIGHT"	30	205
Tailrotor	-	-	-	"TR"	40	281
Autorotation	-	-	-	"AUTO"	32	221
Tandem Rotor	-	-	-	"TANDEM"	24	168
Checks	-	-	-	"CHECKS"	14	96

TABLE III
STORAGE REGISTER UTILIZATION

Storage Register	Stored Quantity
00	blank - used for computations
01	C_0 - the root chord of the rotor blade (ft)
02	C_1 - the tip chord of the rotor blade (ft)
03	a - fraction of radius where the taper starts on a tapered rotor blade (decimal value)
04	C or C_e - the chord or equivalent chord length of the rotor blade (ft)
05	R - the radius of the rotor system (ft)
06	b - the number of blades in the rotor system
07	\bar{C}_{d_0} - the average profile drag coefficient
08	Ω - the rotational velocity of the rotor system (radians/sec)
09	h - rotor system height above the ground (ft)
10	W - weight of the helicopter (lbs)
11	ρ - density of the air $\frac{\text{lb-sec}^2}{\text{ft}^4}$ or $\frac{\text{slug}}{\text{ft}^3}$
12	A_D - rotor disc area (ft ²)
13	V_T - velocity of the rotor tip (ft/sec)
14	C_T - coefficient of thrust
15	B - tip loss factor
16	$P_{i(TL)}$ - induced power with tip losses (horsepower)
17	h/D - height ÷ diameter of rotor system used for ground effect calculations

TABLE III
(continued)

18	$P_i(TL+GE)$ - induced power with tip losses plus ground effect (horsepower)
19	σ_r - the solidity of the rotor system
20	v_i - induced velocity (ft/sec)
21	P_o - profile power (horsepower)
22	blank - used for computations
23	V_v - vertical velocity (ft/sec)
24	f_v - equivalent flat plate area for vertical flight calculations (ft ²)
25	V_f - forward velocity (ft/sec)
26	f_f - equivalent flat plate area for forward flight calculations (ft ²)
27	v_{iT} - vertical component of the induced velocity through the rotor system for forward climbing flight (ft/sec)
28	P_p - parasite power (horsepower)
29	P_c - climb power (horsepower)
30	P_T - total power (horsepower)
31	indirect storage register - used by all the main programs in conjunction with Subroutine "CG"

note - Subroutine "CF", Subroutine "VC", and Program "TR" contain the only deviations from the above table in storage register utilization. This is done to optimize calculator storage requirements. The appropriate program or subroutine listing gives a complete explanation for the appropriate deviation. The calculator should be sized for 032.

APPENDIX B

MINOR PROGRAMS AND SUBROUTINES

This appendix consists of several short programs and their subroutine form. These programs compute density altitude, density, disc area, solidity, tip velocity, induced velocity, coefficient of thrust, tip loss factor, equivalent chord, and ground effect. The subroutines will be called and executed by the main programs in appendix D.

DENSITY ALTITUDE

1. PURPOSE

This program computes the density altitude, h_ρ , in feet when given the pressure altitude, h_p , in feet and the temperature in degrees celsius. The equation used for this program is based upon the standard atmosphere and described in NACA Report (1955) No. 1235 [Ref. 2]. This equation and thus this program is accurate to an altitude of 36,089 feet (isothermal level).

2. EQUATIONS

$$\frac{(1 - K_1 h_p)^{5.2561}}{(1 - K_1 h_\rho)^{4.2561}} = \frac{T}{T_{ssl}} \quad (1)$$

where:

T is the ambient temperature (absolute)

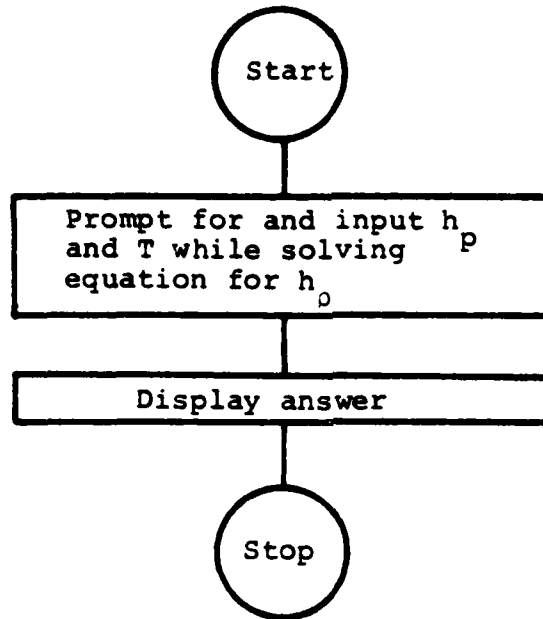
T_{ssl} is the standard sealevel temperature (absolute)

h_p is the pressure altitude (feet)

h_ρ is the density altitude (feet)

K_1 is a constant equal to 6.875×10^{-6}

3. FLOWCHART



4. EXAMPLE PROBLEMS AND USER INSTRUCTIONS

The altimeter of a UH-60A currently indicates a pressure altitude of 1600 feet and the O.A.T. (Outside Air Temperature) gauge indicates 24° Celsius. What is the density altitude?

Keystrokes:

[XEQ] [ALPHA] DA [ALPHA]

1600 [R/S]

24 [R/S]

Display:

PA=?

T=?

DA=3,006.48

note - do not touch the calculator and proceed immediately to the next problem

The same UH-60A is now sitting on the deck of a ship. The altimeter indicates 0 feet and the O.A.T. gauge indicates 15°.

What is the density altitude?

Keystrokes:

[R/S] [R/S]

0 [R/S]

15 [R/S]

Display:

PA=?

T=?

DA=0.00

(standard day sea
level conditions)

note - pushing the run stop [R/S] button twice will reposition the calculator to the top of the program

5. PROGRAMS & SUBROUTINES USED

"DA"

6. PROGRAM LISTINGS

01	LBL "DA"	16	288.16
02	"PA=?"	17	*
03	PROMPT	18	.23496
04	6.875 E-	19	Y↑X
06		20	CHS
05	*	21	1
06	CHS	22	+
07	1	23	6.875 E-
08	+	06	
09	5.2561	24	/
10	Y↑X	25	FIX 2
11	"T=?"	26	"DA="
12	PROMPT	27	ARCL X
13	273.16	28	AVIEW
14	+	29	END
15	/		

DENSITY

1. PURPOSE

This program/subroutine computes the density of the air at a given altitude. The equation used for this calculation is based upon the standard atmosphere and described in NACA Report No. 1235 [Ref. 2]. This equation and thus this program is accurate to an altitude of 36,089 feet (isothermal level). This program is therefore considered sufficient for all computations using density, ρ , here and in succeeding programs.

2. EQUATIONS

$$\rho = \rho_{ss1} \left[1 - (K_1)(h) \right]^{4.2561} \quad (2)$$

where:

ρ_{ss1} is the density of the air at standard sea level conditions which is equal to

$$0.0023769 \left[\frac{\text{lb} \cdot \text{sec}^2}{\text{ft}^4} \right] \quad \text{or} \quad \left[\frac{\text{slug}}{\text{ft}^3} \right]$$

K_1 is a constant equal to 6.875×10^{-6}

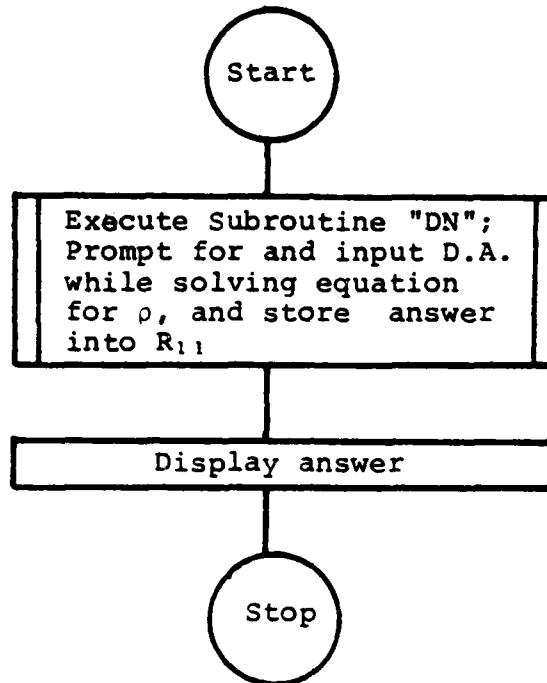
h is the density altitude (ft)

ρ is the density of the air at level h

with the input of known values, the equation to be programmed now becomes:

$$\rho = 0.0023769 \left[1 - (6.875 \times 10^{-6})(h) \right]^{4.2561} \quad (3)$$

3. FLOWCHART



4. EXAMPLE PROBLEMS AND USER INSTRUCTIONS

Find the density, ρ , at a density altitude, D.A., of 1000 feet.

Keystrokes:

[XEQ] [ALPHA] DENSITY [ALPHA]

1000 [R/S]

Display:

D.A.=?

DN=0.0023081

note - do not touch the calculator and proceed immediately to the next problem

Find the density, ρ , at a density altitude, D.A., of 5283 feet.

Keystrokes:

[R/S] [R/S]

5,283 [R/S]

Display:

D.A.=?

DN=0.0020306

note - pushing the run stop [R/S] button twice will reposition the calculator to the top of the program

Find the density, ρ , at a density altitude, D.A., of 0 feet (sea level).

Keystrokes:

[R/S] [R/S]

0 [R/S]

Display:

D.A.=?

DN=0.0023769

(standard day sea level conditions)

5. PROGRAMS & SUBROUTINES USED

"DENSITY"
"DN"

6. PROGRAM LISTINGS

PROGRAM	SUBROUTINE
01♦LBL "DENSITY"	01♦LBL "DN"
02 XEQ "DN"	02 "D.A.=?"
03 FIX 7	03 PROMPT
04 "DN="	04 6.875 E-
05 ARCL X	06
06 RVIEW	05 *
07 END	06 CHS
	07 1
	08 +
	09 ENTER↑
	10 4.2561
	11 Y↑X
	12 .0023769
	13 *
	14 STO 11
	15 END

DISC AREA

1. PURPOSE

This program/subroutine calculates the disc area of a rotor system when given the radius. The disc area is the total area enscribed by the plane of the rotor without coning.

2. EQUATIONS

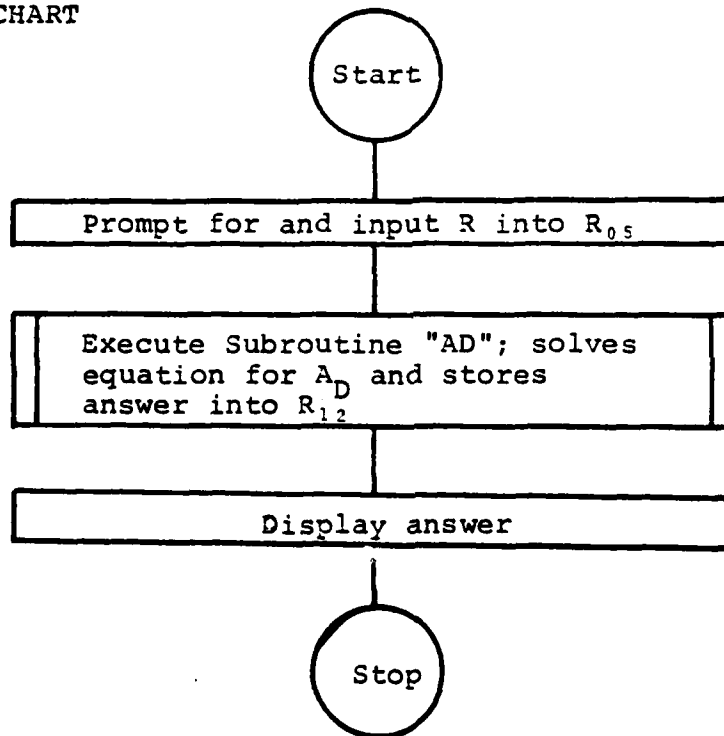
$$A_D = \pi R^2 \quad (4)$$

where:

A_D is the Disc Area (ft^2)

R is the rotor system radius (ft)

3. FLOWCHART



4. EXAMPLE PROBLEMS AND USER INSTRUCTIONS

The rotor radius of the UH-60A Blackhawk is 26.83 feet.

Find the Disc Area.

Keystrokes:	Display:
[XEQ] [ALPHA] AREA [ALPHA]	R=?
26.83 [R/S]	AREA=2,261.47

The rotor radius of the AH-1T SeaCobra is 24.00 feet. Find the Disc Area.

Keystrokes:	Display:
[R/S] [R/S]	R=?
24.00 [R/S]	AREA=1,809.56

5. PROGRAMS AND SUBROUTINES USED

"AREA"
"AD"

6. PROGRAM LISTINGS

PROGRAM	SUBROUTINE
01♦LBL "ARE A"	01♦LBL "AD"
02 "R=?"	02 RCL 05
03 PROMPT	03 X↑2
04 STO 05	04 PI
05 XEQ "AD"	05 *
06 FIX 2	06 STO 12
07 "AREA="	07 END
08 ARCL X	
09 AVIEW	
10 END	

SOLIDITY

1. PURPOSE

This program/subroutine computes solidity, σ_r , the fraction of the disc area that is composed of blades, i.e. solid.

2. EQUATIONS

$$\sigma_r = \frac{b c R}{\pi R^2} = \frac{b c}{\pi R} \quad (5)$$

where:

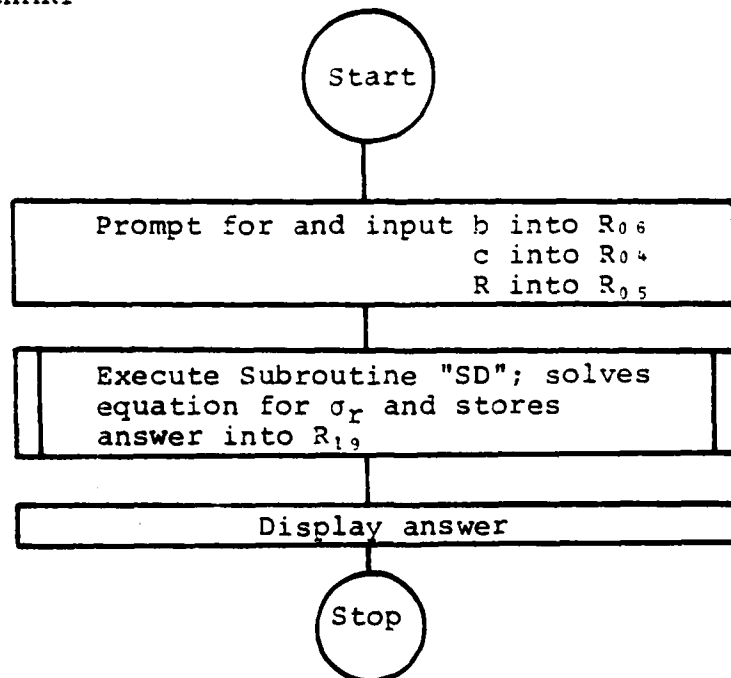
σ_r is the solidity of the rotor system

b is the number of rotor blades in the rotor system

R is the radius of the rotor system (ft)

c is the chord length of the rotor blade (ft)

3. FLOWCHART



4. SAMPLE PROBLEMS AND USER INSTRUCTIONS

Find the solidity, σ_r , of the aft rotor system on the CH-46E Sea Knight (note - the fore and aft rotor systems both have the same dimensions).

$$R = 25.50 \text{ ft}$$

$$c = 1.5625 \text{ ft}$$

$$b = 3$$

Keystrokes:

[XEQ] [ALPHA] SOLID [ALPHA]

3 [R/S]

1.5625 [R/S]

25.50 [R/S]

Display:

b=?

C=?

R=?

SOLID=0.05851

Find the solidity, σ_r , of the main rotor system of the CH-54A Skycrane.

$$R = 36.00 \text{ ft}$$

$$c = 1.972 \text{ ft}$$

$$b = 6$$

Keystrokes:

[R/S]

6 [R/S]

1.972 [R/S]

36.00 [R/S]

Display:

b=?

C=?

R=?

SOLID=0.10462

5. PROGRAMS & SUBROUTINES USED

"SOLID"
"SD"

6. PROGRAM LISTINGS

PROGRAM	SUBROUTINE
01♦LBL "SOLID"	01♦LBL "SD"
02 "b=?"	02 RCL 06
03 PROMPT	03 RCL 04
04 STO 06	04 *
05 "C=?"	05 RCL 05
06 PROMPT	06 /
07 STO 04	07 PI
08 "R=?"	08 /
09 PROMPT	09 STO 19
10 STO 05	10 END
11 XEQ "SD"	
12 FIX 5	
13 "SOLID="	
14 ARCL X	
15 AVIEW	
16 END	

TIP VELOCITY

1. PURPOSE

This program/subroutine computes the tip velocity of the rotor blade. The tip velocity, V_T , is the product of the rotational velocity, Ω , and the rotor radius, R .

2. EQUATIONS

$$V_T = \Omega R \quad (6)$$

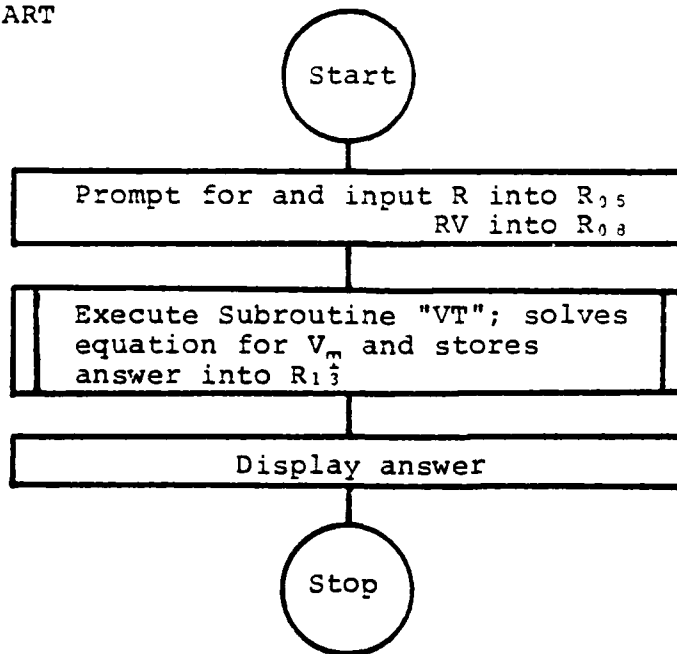
where:

V_T is the velocity of the rotor tip (ft/sec)

Ω is the rotational velocity (radians/sec)

R is the rotor radius (ft)

3. FLOWCHART



4. SAMPLE PROBLEMS AND USER INSTRUCTIONS

The rotor radius of a CH-53D Sea Stallion is 36.11 feet and the normal rotational velocity is 19.37 radians/sec. Find the tip velocity.

Keystrokes:	Display:
[XEQ] [ALPHA] VTIP [ALPHA]	R=?
36.11 [R/S]	RV=?
19.37 [R/S]	VT=699.45

The rotor radius of an AH-64 is 24.00 feet and the normal rotational velocity is 30.26 radians/sec. Find the tip velocity.

Keystrokes:	Display:
[R/S]	R=?
24 [R/S]	RV=?
30.26 [R/S]	VT=726.24

note - to convert RPM to radians/sec, divide by 9.55

5. PROGRAMS & SUBROUTINES USED

"VTIP"
"VT"

6. PROGRAM LISTINGS

PROGRAM	SUBROUTINE
01♦LBL "VTI P"	01♦LBL "VT"
02 "R=?"	02 RCL 08
03 PROMPT	03 RCL 05
04 STO 05	04 *
05 "RV=?"	05 STO 13
06 PROMPT	06 END
07 STO 08	
08 XEQ "VT"	
09 FIX 2	
10 "VT="	
11 ARCL X	
12 RVIEW	
13 END	

INDUCED VELOCITY

1. PURPOSE

This program/subroutine computes the induced velocity, v_i , the total inflow velocity through the rotor system during hover.

2. EQUATIONS

$$v_i = \left[\frac{T}{2\rho \cdot A_D} \right]^{1/2} \quad (7)$$

where:

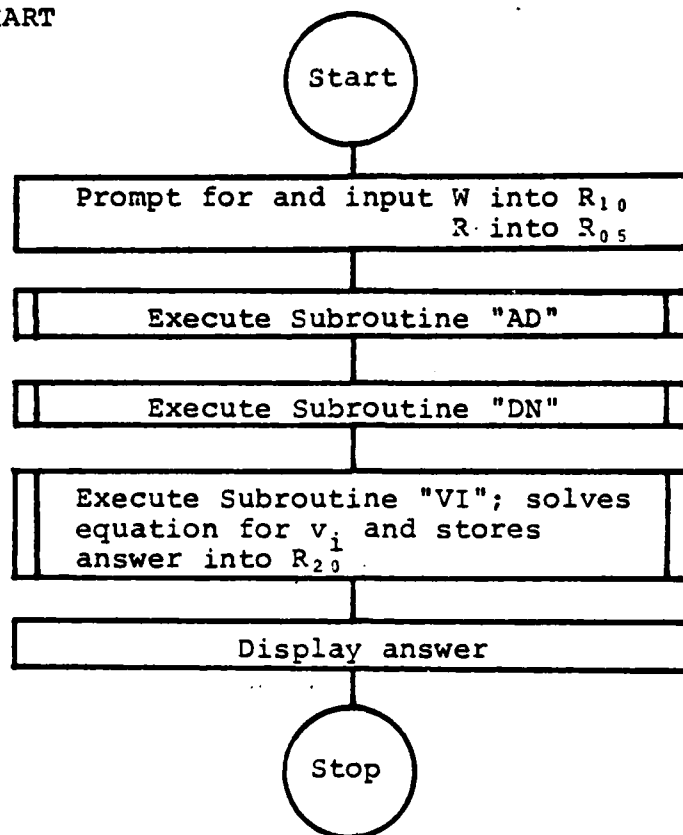
v_i is the induced velocity (ft/sec)

ρ is the density of the air $\left[\frac{\text{lb} \cdot \text{sec}^2}{\text{ft}^4} \right]$

A_D is the rotor disc area (ft²)

T is the thrust which is equal to the weight, W (lbs)

3. FLOWCHART



4. EXAMPLE PROBLEMS AND USER INSTRUCTIONS

Find the induced velocity, v_i , of the main rotor system of a hovering SH-2F LAMPS under the following conditions:

DA = 0 (sea level)

W = 11,300 lb

R = 22.0 ft

note - insure that Subroutines "AD" and "DN" are in program memory

Keystrokes:

[XEQ] [ALPHA] VIND [ALPHA]

Display:

W=?

11,300 [R/S]

R=?

22.0 [R/S]

D.A.=?

0 [R/S]

VI=39.54

Find the induced velocity, v_i , of the main rotor system of a hovering CH-54A Skycrane under the following conditions:

D.A. = 2000 ft

R = 36 ft

W = 42,500 (maximum gross weight)

Keystrokes:

Display:

[R/S]

W=?

42,500 [R/S]

R=?

36 [R/S]

D.A.=?

2,000 [R/S]

VI=48.26

5. PROGRAMS & SUBROUTINES USED

"VIND"

"VI"

"AD"

"DN"

6. PROGRAM LISTINGS

PROGRAM	SUBROUTINE
01♦LBL "VIN D"	01♦LBL "VI"
02 "W=?"	02 RCL 10
03 PROMPT	03 2
04 STO 10	04 /
05 "R=?"	05 RCL 11
06 PROMPT	06 /
07 STO 05	07 RCL 12
08 XEQ "AD"	08 /
09 XEQ "DN"	09 SQRT
10 XEQ "VI"	10 STO 20
11 FIX 2	11 END
12 "VI="	
13 ARCL X	
14 RVIEW	
15 END	

COEFFICIENT OF THRUST

1. PURPOSE

This program/subroutine computes the coefficient of thrust for a given rotor system. The coefficient of thrust is a non-dimensional coefficient established to facilitate computations and comparisons. [Ref.1]

2. EQUATIONS

$$C_T = \frac{T}{A_D \cdot \rho \cdot V_T^2} \quad (8)$$

where:

C_T is the coefficient of thrust (non-dimensional)

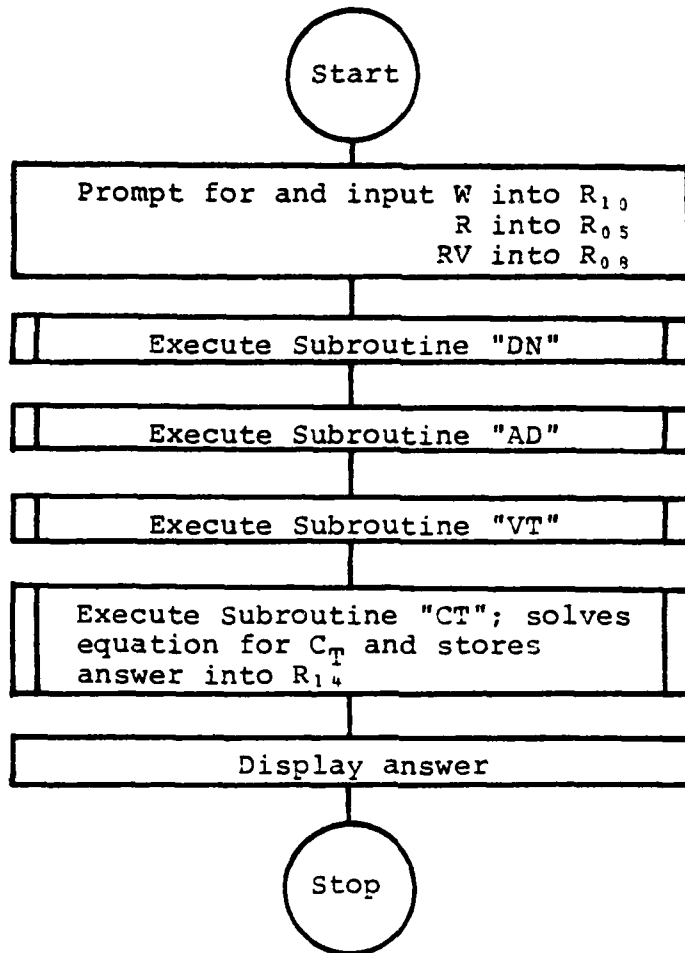
A_D is the disc area (ft²)

V_T is the tip velocity (ft/sec)

ρ is the density of the air $\left[\frac{\text{lb} \cdot \text{sec}^2}{\text{ft}^4} \right]$

T is the thrust which is equal to the weight, W (lb)

3. FLOWCHART



4. EXAMPLE PROBLEMS AND USER INSTRUCTIONS

Find the coefficient of thrust, C_T , for a UH-1H Iroquois operating under the following conditions:

$$N = 305 \text{ RPM} \rightarrow \Omega = 31.94 \text{ radians/sec}$$

$$\text{D.A.} = 1600 \text{ ft}$$

$$W = 8400 \text{ lbs}$$

$$R = 24.09 \text{ ft}$$

Keystrokes:

[XEQ] [ALPHA] CTHRUST [ALPHA]

8,400 [R/S]

24.09 [R/S]

31.94 [R/S]

1,600 [R/S]

Display:

W=?

R=?

RV=?

D.A.=?

CT=0.0034320

Find the coefficient of thrust, C_T , for an OH-6A operating under the following conditions:

$N = 470 \text{ RPM} \rightarrow \Omega = 49.21 \text{ radians/sec}$

D.A. = 4000 ft

W = 2500 lb

R = 13.165 ft

Keystrokes:

[R/S]

2,500

13.165

49.21

4,000

Display:

W=?

R=?

RV=?

D.A.=?

CT=0.0051824

5. PROGRAMS & SUBROUTINES USED

"CTHRUST"

"CT"

"DN"

"AD"

"VT"

6. PROGRAM LISTINGS

PROGRAM	SUBROUTINE
01♦LBL "CTH RUST"	01♦LBL "CT"
02 "W=?"	02 RCL 10
03 PROMPT	03 RCL 11
04 STO 10	04 /
05 "R=?"	05 RCL 12
06 PROMPT	06 /
07 STO 05	07 RCL 13
08 "RV=?"	08 X↑2
09 PROMPT	09 /
10 STO 08	10 STO 14
11 XEQ "DN"	11 END
12 XEQ "AD"	
13 XEQ "VT"	
14 XEQ "CT"	
15 FIX 7	
16 "CT="	
17 ARCL X	
18 RVIEW	
19 END	

TIP LOSS FACTOR

1. PURPOSE

This program/subroutine computes the tip loss factor, B. Tip vortices, at the tip of the rotor blades, tend to despoil the pressure difference at the tips and thereby reduces the lift at the tips. The extent of these losses depends upon the rotor blade loadings, and number of blades. Numerous theories exist. The theory used in this subroutine is an approximation of the tip loss factor made by Prandtl and Betz. [Ref. 1] After the tip loss factor, B, has been computed in the subroutine and returned to the main programs used later, the induced power will change in accordance with the following equation:

$$P_{i_{TL}} = \frac{P_i}{B} \quad (9)$$

where:

$P_{i_{TL}}$ is the induced power with tip losses

P_i is the induced power

B is the tip loss factor

2. EQUATIONS

$$B = 1 - \frac{\sqrt{2C_p}}{b} \quad (10)$$

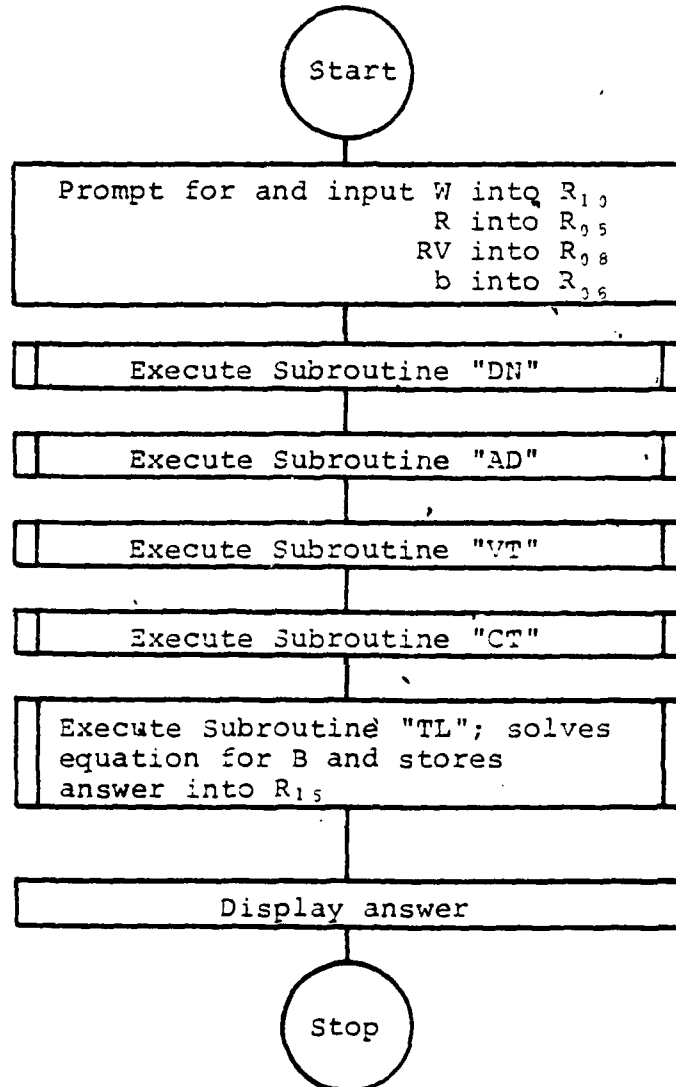
where:

C_T is the coefficient of thrust

b is the number of rotor blades

B is the tip loss factor

3. FLOWCHART



4. EXAMPLE PROBLEMS AND USER INSTRUCTIONS

Find the tip loss factor, B , for an OH-6A Cayuse operating under the following conditions:

$$N = 470 \text{ RPM} \rightarrow \Omega = 49.21 \text{ radians/sec}$$

$$\text{D.A.} = 5,000 \text{ ft}$$

$$W = 2,150 \text{ lbs}$$

$$R = 13.165 \text{ ft}$$

$$b = 4$$

Keystrokes:

[XEQ] [ALPHA] TIPLOSS [ALPHA]

2150 [R/S]

13.165 [R/S]

49.21 [R/S]

4 [R/S]

5000 [R/S]

Display:

W=?

R=?

RV=?

b=?

D.A.=?

B=0.9760

Find the tip loss factor, B , for the same helicopter in the above problem, only this time use the maximum gross weight of $W = 2550 \text{ lbs}$.

Keystrokes:

[R/S]

2550 [R/S]

13.165 [R/S]

Display:

W=?

R=?

RV=?

49.21 [R/S]

b=?

4 [R/S]

D.A.=?

5000 [R/S]

B=0.9739

5. PROGRAMS & SUBROUTINES USED

"TIPLOSS"
"TL"
"DN"
"AD"
"VT"
"CT"

6. PROGRAM LISTINGS

PROGRAM	SUBROUTINE
01 ♦ LBL "TIP LOSS"	01 ♦ LBL "TL"
02 "W=?"	02 RCL 14
03 PROMPT	03 2
04 STO 10	04 *
05 "R=?"	05 SQRT
06 PROMPT	06 RCL 06
07 STO 05	07 /
08 "RV=?"	08 CHS
09 PROMPT	09 1
10 STO 00	10 +
11 "J=?"	11 STO 15
12 PROMPT	12 END
13 STO 06	
14 XEQ "DN"	
15 XEQ "AD"	
16 XEQ "VT"	
17 XEQ "CT"	
18 XEQ "TL"	
19 FIX 4	
20 "B="	
21 ARCL X	
22 AVIEW	
23 END	

EQUIVALENT CHORD

1. PURPOSE

This program is also used as a subroutine by the main programs. This program computes the equivalent chord, C_e , for a tapered rotor blade. A tapered rotor blade (the chord at the tip less than the chord at the root) has less tip loss effect due to the smaller surface area over which the losses may occur; this is the primary reason for tapering the tips of the rotor blades. [Ref. 1]

2. EQUATIONS

The calculation for equivalent chord for thrust determinations has reduced to the following figure and equation:

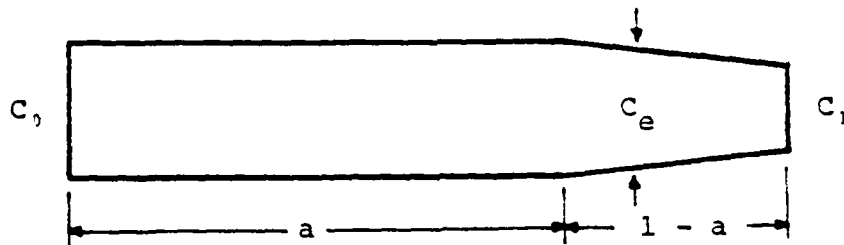


FIGURE 1
Tapered Rotor Blade

$$C_e = C_1 + \frac{1}{2} \left[\frac{C_0 - C_1}{1 - a} (1 - a^4) \right] \quad (11)$$

where:

C_e is the equivalent chord (ft)

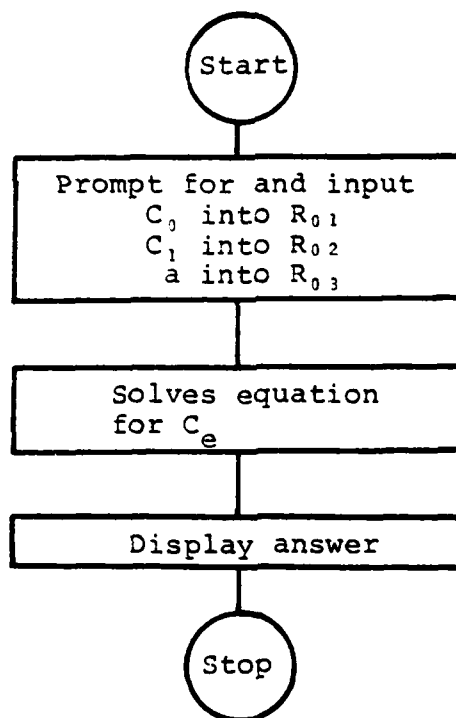
C_0 is the root chord (ft)

C_1 is the tip chord (ft)

a is the fraction of radius where the taper starts
(decimal value)

note - when $a = 0$, the blade has a linear taper from the root to the tip. When $a = 1$, the blade is completely rectangular, and $C_e = C$

3. FLOWCHART



4. EXAMPLE PROBLEMS AND USER INSTRUCTIONS

Find the equivalent chord, C_e , for a tapered rotor blade with the following dimensions:

$$C_0 = 1.6 \text{ ft}$$

$$C_1 = 0.8 \text{ ft}$$

$$a = .75$$

Keystrokes:

[XEQ] [ALPHA] ECHORD [ALPHA]

1.6 [R/S]

0.8 [R/S]

.75 [R/S]

Display:

C0=?

C1=?

a=?

CE=1.347

Find the equivalent chord, C_e , for a tapered rotor blade with the following dimensions:

$$C_0 = 1.0 \text{ ft}$$

$$C_1 = 0.9 \text{ ft}$$

$$a = .9$$

Keystrokes:

[R/S] [R/S]

1 [R/S]

.9 [R/S]

.9 [R/S]

Display:

C0=?

C1=?

a=?

CE=0.986

5. PROGRAMS & SUBROUTINES USED

"ECHORD"

6. PROGRAM LISTINGS

PROGRAM

```
01♦LBL "ECH  
ORD"  
02 "C0=?"  
03 PROMPT  
04 STO 01  
05 "C1=?"  
06 PROMPT  
07 STO 02  
08 "a=?"  
09 PROMPT  
10 STO 03  
11♦LBL "EC"  
12 RCL 03  
13 ENTER↑  
14 4  
15 Y↑X  
16 CHS  
17 1  
18 +  
19 RCL 01  
20 ENTER↑  
21 RCL 02  
22 -  
23 *  
24 RCL 03  
25 CHS  
26 1  
27 +  
28 /  
29 4  
30 /  
31 RCL 02  
32 +  
33 FIX 3  
34 "CE="   
35 ARCL X  
36 RVIEW  
37 STOP  
38 END
```

GROUND EFFECT

1. PURPOSE

This program/subroutine computes the ground effect ratio P/P_{OGE} , as a function of the ratio of the rotor system height above the ground to the diameter of the rotor system. [Ref. 1] FIGURE 2 is a graph which shows the ratio of power required to hover in-ground-effect to that required to hover out-of-ground-effect for the average helicopter. This curve was obtained as the best fit to considerable amounts of test data on both single and tandem rotor helicopters. [Ref. 3]

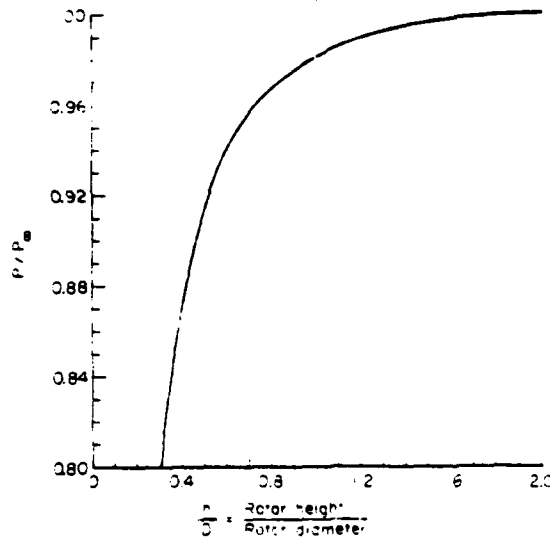


FIGURE 2
Ground Effect Curve [Ref. 3]

2. EQUATIONS

A curve fitting equation for the plot of FIGURE 2 results in the following equation:

$$\text{G.E. RATIO} = \frac{P}{P_{\text{OGE}}} = \left[\begin{aligned} & -0.1276 (h/D)^4 + 0.7080 (h/D)^3 - 1.4569 (h/D)^2 \\ & + 1.3432 (h/D) + 0.5147 \end{aligned} \right] \quad (12)$$

where:

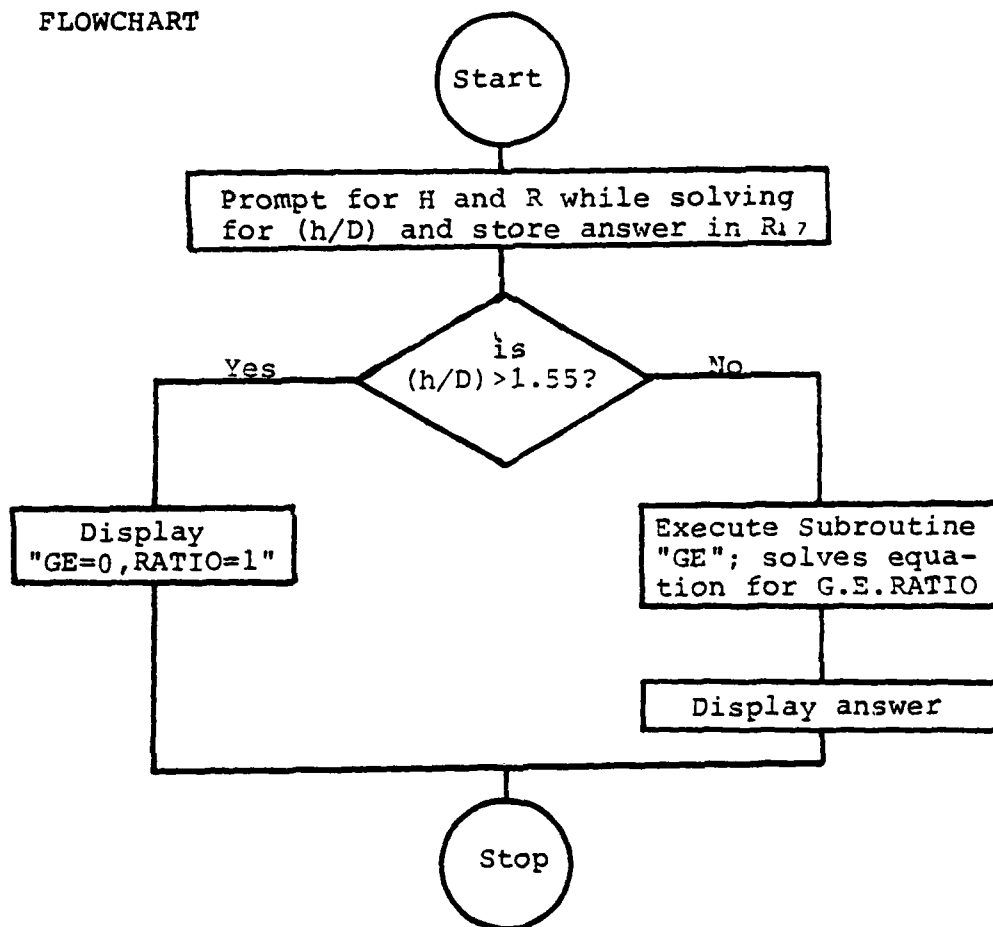
h is the height of the rotor system above the ground (ft)

D is the diameter of the rotor system (ft)

P is the power in-ground-effect

P_{OGE} is the power out-of-ground effect

3. FLOWCHART



4. EXAMPLE PROBLEMS AND USER INSTRUCTIONS

The rotor radius of an SH-3H is 31.0 ft. It is currently hovering above the deck of the antisubmarine carrier Yorktown with the rotor system 24.33 ft above the deck (wheels 10 ft above the deck). What is the ground effect ratio?

Keystrokes:

[XEQ] [ALPHA] GEFFECT [ALPHA]

24.33 [R/S]

31 [R/S]

Display:

H=?

R=?

RATIO=0.8572

The rotor radius of an AH-1S Cobra is 22.0 ft. It is moving into a holding position behind and just below the top of some tall cover with the rotor system 70.0 ft above the ground (skids 58.0 ft above the ground). What is the ground effect ratio?

Keystrokes:

[R/S]

70 [R/S]

22 [R/S]

Display:

H=?

R=?

GE=0, RATIO=1

note - the Cobra is hovering out of ground effect

5. PROGRAMS & SUBROUTINES USED

"GEFFECT"

"GE"

6. PROGRAM LISTINGS

PROGRAM	SUBROUTINE
01♦LBL "GEF FECT"	01♦LBL "GE"
02 "H=?"	02 RCL 17
03 PROMPT	03 1.3432
04 "R=?"	04 *
05 PROMPT	05 RCL 17
06 2	06 X↑2
07 *	07 -1.4569
08 /	08 *
09 STO 17	09 +
10 1.55	10 RCL 17
11 -	11 3
12 X>0?	12 Y↑X
13 GTO 01	13 .7080
14 XEQ "GE"	14 *
15 FIX 4	15 +
16 "RATIO="	16 RCL 17
17 ARCL X	17 4
18 RVIEW	18 Y↑X
19 GTO 02	19 -.1276
20♦LBL 01	20 *
21 "GE=0, RA TIO=1"	21 +
22 PROMPT	22 .5147
23♦LBL 02	23 +
24 END	24 END

APPENDIX C

MAJOR SUBROUTINES

This appendix consists of several ~~major~~ subroutines that are called and executed by the main programs of appendix D. These subroutines compute the vertical component of the induced velocity for forward climbing flight; prompt for data input; prompt for change of original data input; compute profile power, induced power, climb power, parasite power, and total power all for a single rotor helicopter; and compute the equivalent area and the induced power requirements for a tandem rotor helicopter.

COEFFICIENTS

1. PURPOSE

This is a Subroutine used by those main programs that deal with forward climbing flight computations. This Subroutine calculates and stores the coefficients of a fourth order equation which Subroutine "VC" will recall and use to solve for the one real root of this equation. This real root is the vertical component of the induced velocity, v_{i_T} , which when multiplied with the thrust, T , gives the product of induced power, P_i , for forward climbing flight.

2. EQUATIONS

$$A(v_{i_T})^4 + B(v_{i_T})^3 + C(v_{i_T})^2 + D(v_{i_T}) + E = 0 \quad (13)$$

where:

$$A = 1.0$$

$$B = 2V_v$$

$$C = (V_f^2 + V_v^2)$$

$$D = 0$$

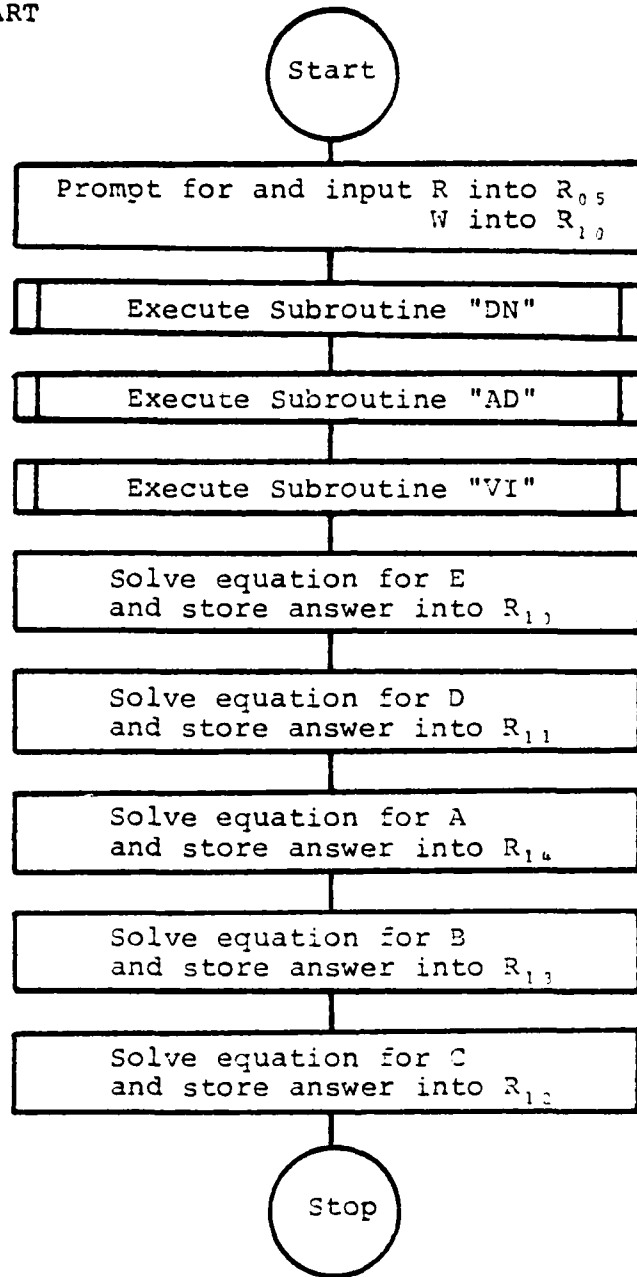
$$E = -v_i^4$$

} V_v is the vertical velocity
(ft/sec)

} V_f is the forward velocity
(ft/sec)

} v_i is the induced velocity
at a hover (ft/sec)

3. FLOWCHART



4. EXAMPLE PROBLEMS AND USER INSTRUCTIONS

This subroutine is immediately followed by Subroutine "VC" when used in the main programs. During its computation, Subroutine "VC" uses storage registers R_{00} through R_{12} .

It is therefore necessary to use Subroutine "DATA" at a latter time in the main program in order to get the input data properly stored into the correct memory registers. Because of this, some repetition of input data prompting will occur during main program usage.

5. PROGRAMS AND SUBROUTINES USED

"CF"
"DN"
"AD"
"VI"

6. PROGRAM LISTINGS

SUBROUTINE

```
01 LBL "CF"  
02 "R=?"  
03 PROMPT  
04 STO 05  
05 "W=?"  
06 PROMPT  
07 STO 10  
08 XEQ "DN"  
09 XEQ "AD"  
10 XEQ "VI"  
11 4  
12 Y↑X  
13 CHS  
14 STO 10  
15 0  
16 STO 11  
17 1  
18 STO 14  
19 RCL 23  
20 2  
21 *  
22 STO 13  
23 2  
24 /  
25 X↑2  
26 RCL 25  
27 X↑2  
28 +  
29 STO 12  
30 END
```

VERTICAL COMPONENT OF INDUCED VELOCITY

1. PURPOSE

Subroutine "VC" is a subroutine used by those main programs that deal with forward climbing flight computations. It will immediately follow Subroutine "CF" in the main program listing because Subroutine "VC" recalls the coefficients of a fourth equation that Subroutine "CF" previously calculated. Subroutine "VC" uses the input of these coefficients to solve for the one real root of this fourth order equation. This real root is v_{iT} , the vertical component of the induced velocity through the rotor system for forward climbing flight computations. Subroutine "VC" is a shortened version of Program "MHL". Program "MHL" was obtained from the Catalog of Contributed Programs HP-41C User's Library. [Ref. 5] When given a polynomial with real coefficients, Program "MHL" will use Maehly's Method, a modification of the well-known Newton's Method to find the real roots of the equation. In its original form, Program "MHL" has 131 program steps. This program was modified for use as Subroutine "VC" with 105 program steps.

2. EQUATIONS

See Subroutine "CF" for a complete description of the fourth order equation that Subroutine "VC" solves.

Neither the equations used in the iterative root solving process are shown, nor is a flowchart for this process shown.

A complete description of this process is available from the HP-41C User's Library Catalog, Program Number 00660C. [Ref. 5]

3. FLOWCHART

none

4. EXAMPLE PROBLEMS AND USER INSTRUCTIONS

The user may wonder why Subroutine "CF" and Subroutine "VC" were not combined into one subroutine. Subroutine "VC" has previously appeared in several different forms. Each form has solved the fourth order polynomial using a different technique. Subroutine "VC" currently exists in the shortest form found; both in number of program steps and program running time. Perhaps the user of this subroutine is aware of an even shorter process and can thus modify this subroutine even farther. It is important to remember here that one of the primary reasons for the use of subroutines was for ease of program editing and modification.

5. PROGRAMS & SUBROUTINES USED

"VC"

6. PROGRAM LISTINGS

SUBROUTINE

01 ♦ LBL "VC"	08 10.01
02 FIX 2	09 +
03 SF 00	10 STO 06
04 SF 01	11 STO 08
05 CF 29	12 RCL 00
06 4	13 .1
07 STO 00	14 %

15	RCL	Z	61	GTO	02
16	+		62	◆LBL	05
17	STO	07	63	CF	00
18	CLX		64	1	
19	STO	01	65	ST+	01
20	20		66	ST+	07
21	STO	02	67	RCL	02
22	FC?C	01	68	STO	27
23	GTO	02	69	GTO	08
24	1 E-3		70	◆LBL	"AB"
25	STO	04	71	RCL	06
26	◆LBL	02	72	STO	08
27	RCL	02	73	RDN	
28	XEQ	"AB"	74	RCL	X
29	X=0?		75	0	
30	GTO	05	76	◆LBL	06
31	RCL	02	77	RCL	IND
32	XEQ	"BA"	08		
33	STO	05	78	+	
34	FS?	00	79	*	
35	GTO	04	80	DSE	08
36	RCL	07	81	GTO	06
37	STO	09	82	RCL	10
38	◆LBL	03	83	+	
39	RCL	03	84	STO	03
40	RCL	02	85	RTN	
41	RCL	IND	86	◆LBL	"BA"
09			87	RCL	06
42	-		88	STO	08
43	/		89	RDN	
44	ST-	05	90	RCL	X
45	DSE	09	91	RCL	X
46	GTO	03	92	0	
47	◆LBL	04	93	◆LBL	07
48	RCL	02	94	*	
49	RCL	03	95	RCL	08
50	RCL	05	96	INT	
51	/		97	10	
52	-		98	-	
53	ENTER↑		99	RCL	IND
54	X<>	02	08		
55	-		100	*	
56	RCL	02	101	+	
57	/		102	DSE	08
58	ABS		103	GTO	07
59	RCL	04	104	◆LBL	08
60	X<Y?		105	END	

DATA

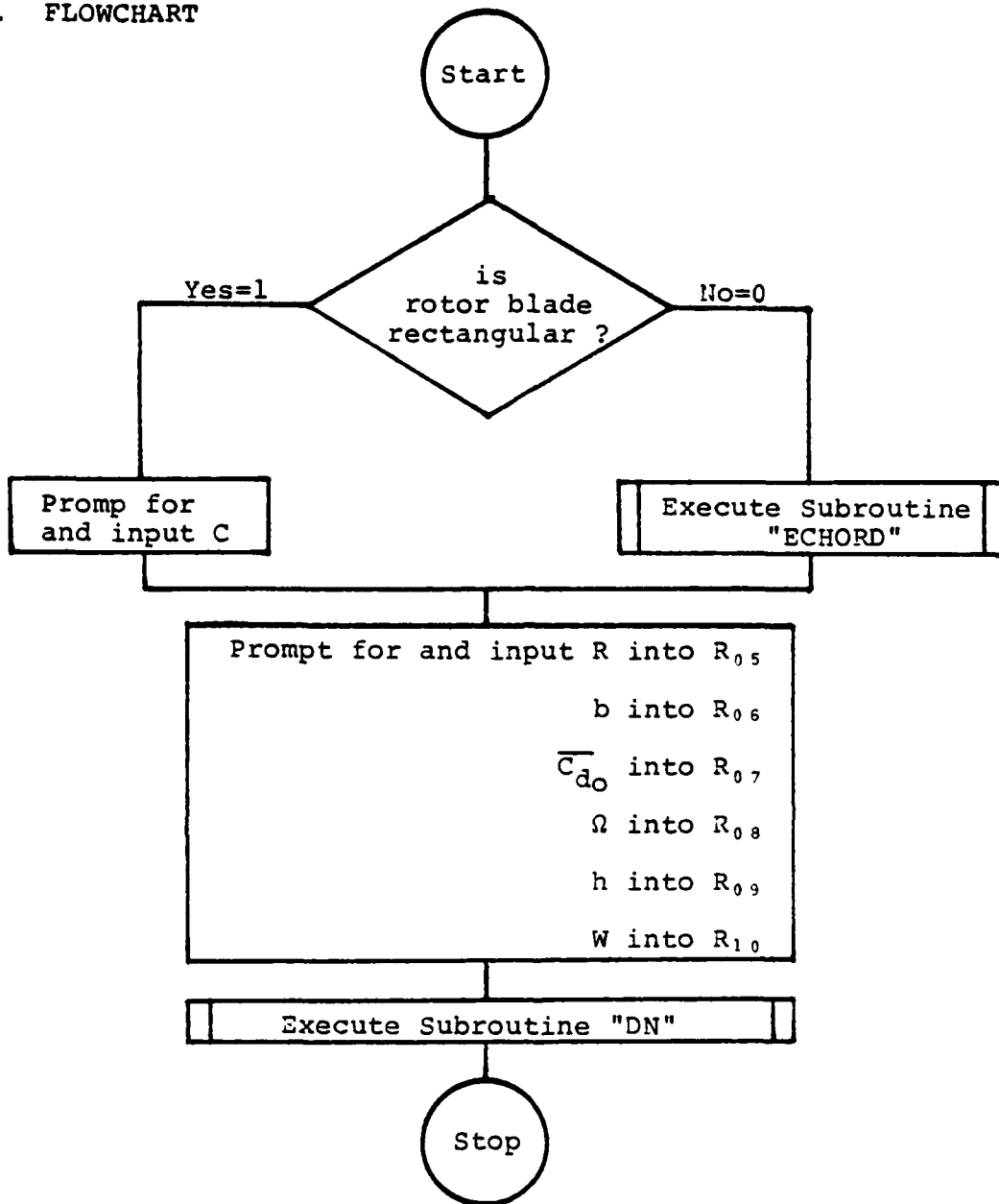
1. PURPOSE

This is a subroutine used by all main programs for data input, and depending upon the looping involved, some programs will use this subroutine more than once. In some very few instances, not every item of data that the calculator prompts for is required for program execution. In these few instances, the EXAMPLE PROBLEMS AND USER INSTRUCTIONS sections are very explicit in the correct procedures to be taken for data input. The primary reason in the repetitive use of this subroutine is to save program steps and calculator memory. Alpha characters and operators, the main ingredient of this subroutine, are more costly in storage requirements (bytes) than the typical numerical operators that are used throughout these programs. [Ref. 4]

2. EQUATIONS

none

3. FLOWCHART



4. EXAMPLE PROBLEMS AND USER INSTRUCTIONS

No equations are used, but this subroutine prompts for the following input where:

Display:	Explanation:
REC?	asks if the rotor blade is of rectangular planform 1 [R/S] if the answer is yes
C=?	asks for the blade chord (ft) 0 [R/S] if the answer is no
C0=?	asks for the root chord (ft)
C1=?	asks for the tip chord (ft)
a=?	asks for the fraction of radius of the rectangular portion of the blade (decimal value)
R=?	asks for the rotor disc radius (ft)
b=?	asks for the total number of individual blades in the rotor system
Cd0=?	asks for the average profile drag coefficient, \bar{C}_{d0}
RV=?	asks for the rotational velocity, Ω (radians/sec)
H=?	asks for the rotor system height above the ground, h (ft)
W=?	asks for the weight of the helicopter (lbs)
D.A.=?	asks for the density altitude, h_p (ft)

5. PROGRAMS & SUBROUTINES USED

"DATA"
"ECHORD"
"DN"

6. PROGRAM LISTINGS

SUBROUTINE

```
01♦LBL "DAT  
A"  
02 "REC?"  
03 PROMPT  
04 X>0?  
05 GTO 10  
06 XEQ "ECH  
ORD"  
07 GTO 11  
08♦LBL 10  
09 "C=?"  
10 PROMPT  
11♦LBL 11  
12 STO 04  
13 "R=?"  
14 PROMPT  
15 STO 05  
16 "b=?"  
17 PROMPT  
18 STO 06  
19 "Cd0=?"  
20 PROMPT  
21 STO 07  
22 "RV=?"  
23 PROMPT  
24 STO 08  
25 "H=?"  
26 PROMPT  
27 STO 09  
28 "W=?"  
29 PROMPT  
30 STO 10  
31 XEQ "DN"  
32 END
```

CHANGE

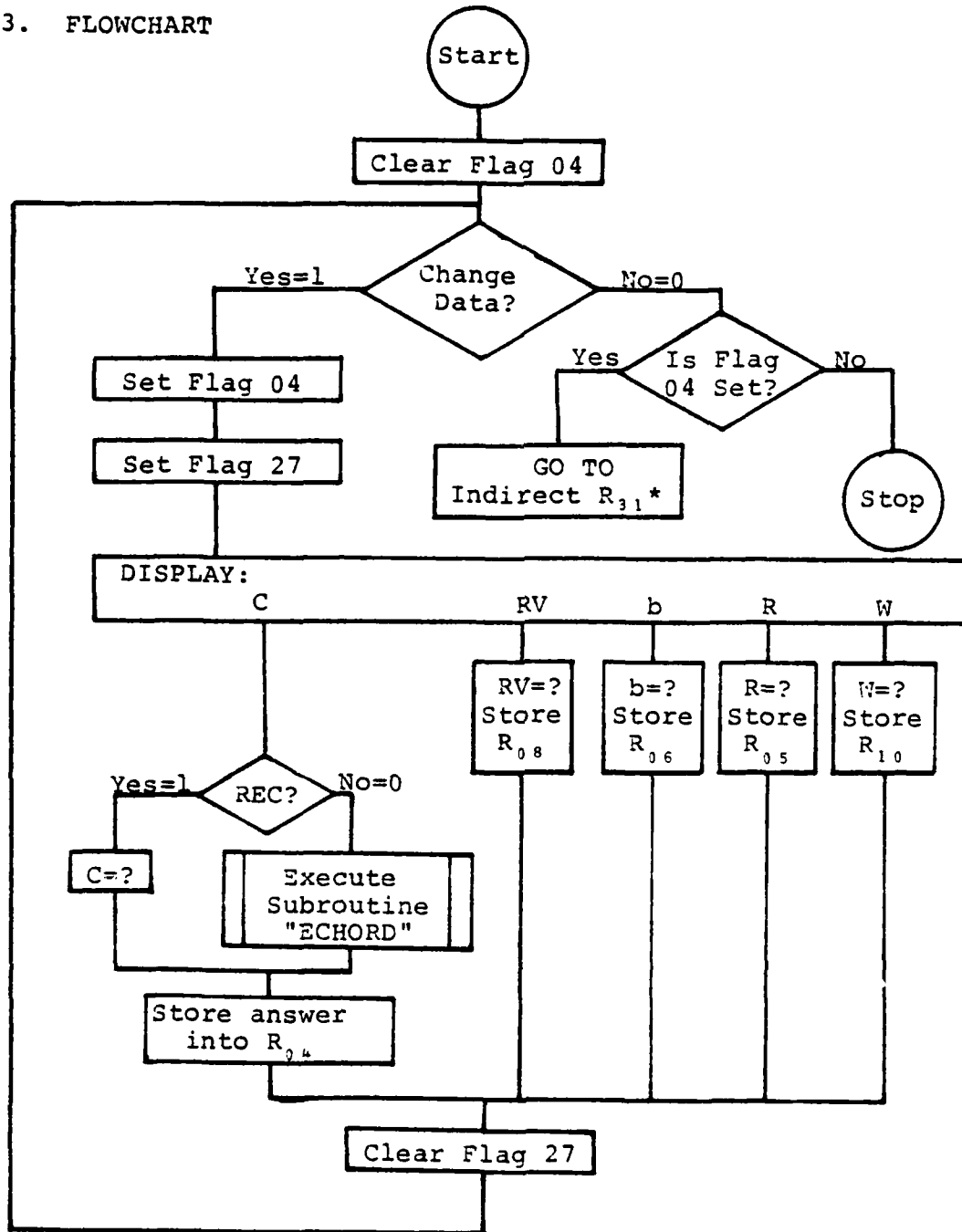
1. PURPOSE

This is a subroutine used by all main programs for expediting the change of input data. This subroutine is the last step in the main program listing before program termination. This subroutine allows for as many as five of the input variables to be quickly changed before returning to the top of the main program listing and initiating a new program operation. Upon examining the program listing for this subroutine, it will become quickly apparent to the user the ease of which this subroutine could be edited for other desired changes. Again, this is one of the purposes and obvious advantages of using subroutines throughout these programs.

2. EQUATIONS

none

3. FLOWCHART



* Returns to and reruns the main program with new data

4. EXAMPLE PROBLEMS AND USER INSTRUCTIONS

No sample problem is given here because of the numerous examples that exist in the main programs. Note that when flag 27 is set, this automatically places the calculator into the [USER] mode. By pressing the key directly below the displayed variable in need of change, will next cause the calculator to prompt for the new data input. The new numeric value is then keyed in followed by [R/S]. The calculator will again prompt in the display for another change of data with: "CHANGE?". The user should remember that here as well as elsewhere in these programs, yes is 1 and no is 0. When all changes have been made and the answer no is received, the calculator will then return to the main program and begin execution with the new data. If on the initial time through, no changes are desired, and the answer no is given (notice from the flow chart that flag 04 has not been set), the main program will terminate operation.

5. PROGRAMS & SUBROUTINES USED

"CG"
"ECHORD"

6. PROGRAM LISTINGS

SUBROUTINE

```
01♦LBL "CG"  
02 CF 04  
03♦LBL 06  
04 "CHANGE?"  
..  
05 PROMPT  
06 X=0?  
07 GTO 07  
08 SF 04  
09 SF 27  
10 " C RV b  
R W"  
11 PROMPT  
12♦LBL A  
13 "REC?"  
14 PROMPT  
15 X>0?  
16 GTO 02  
17 XEQ "ECH  
ORD"  
18 GTO 03  
19♦LBL 02  
20 "C=?"  
21 PROMPT  
22♦LBL 03  
23 STO 04  
24 GTO 05  
25♦LBL B  
26 "RV=?"  
27 PROMPT  
28 STO 08  
29 GTO 05  
30♦LBL C  
31 "b=?"  
32 PROMPT  
33 STO 06  
34 GTO 05  
35♦LBL D  
36 "R=?"  
37 PROMPT  
38 STO 05  
39 GTO 05  
40♦LBL E  
41 "W=?"  
42 PROMPT  
43 STO 10  
44♦LBL 05  
45 CF 27  
46 GTO 06  
47♦LBL 07  
48 FS? 04  
49 GTO IND  
31  
50 END
```

PROFILE POWER

1. PURPOSE

This subroutine computes the profile power, P_o , required in terms of horsepower. Profile power is that power required to turn the rotor blades against their drag.

2. EQUATIONS

$$P_{Oh} = \frac{1}{8} \cdot \sigma_r \cdot \overline{C_{dO}} \cdot \rho \cdot A_D \cdot V_T^3 \quad (14)$$

$$\mu = V_f / V_T \quad (15)$$

$$P_{Of} / P_{Oh} = (1 + 4.25\mu^2) \quad (16)$$

where:

P_{Oh} is the profile power required to hover $\left[\frac{\text{ft-lb}}{\text{sec}} \right]$

P_{Of} is the profile power required in forward flight $\left[\frac{\text{ft-lb}}{\text{sec}} \right]$

$\overline{C_{dO}}$ is the average profile drag coefficient

A_D is the area of the rotor disc (ft^2)

V_T is the tip velocity (ft/sec)

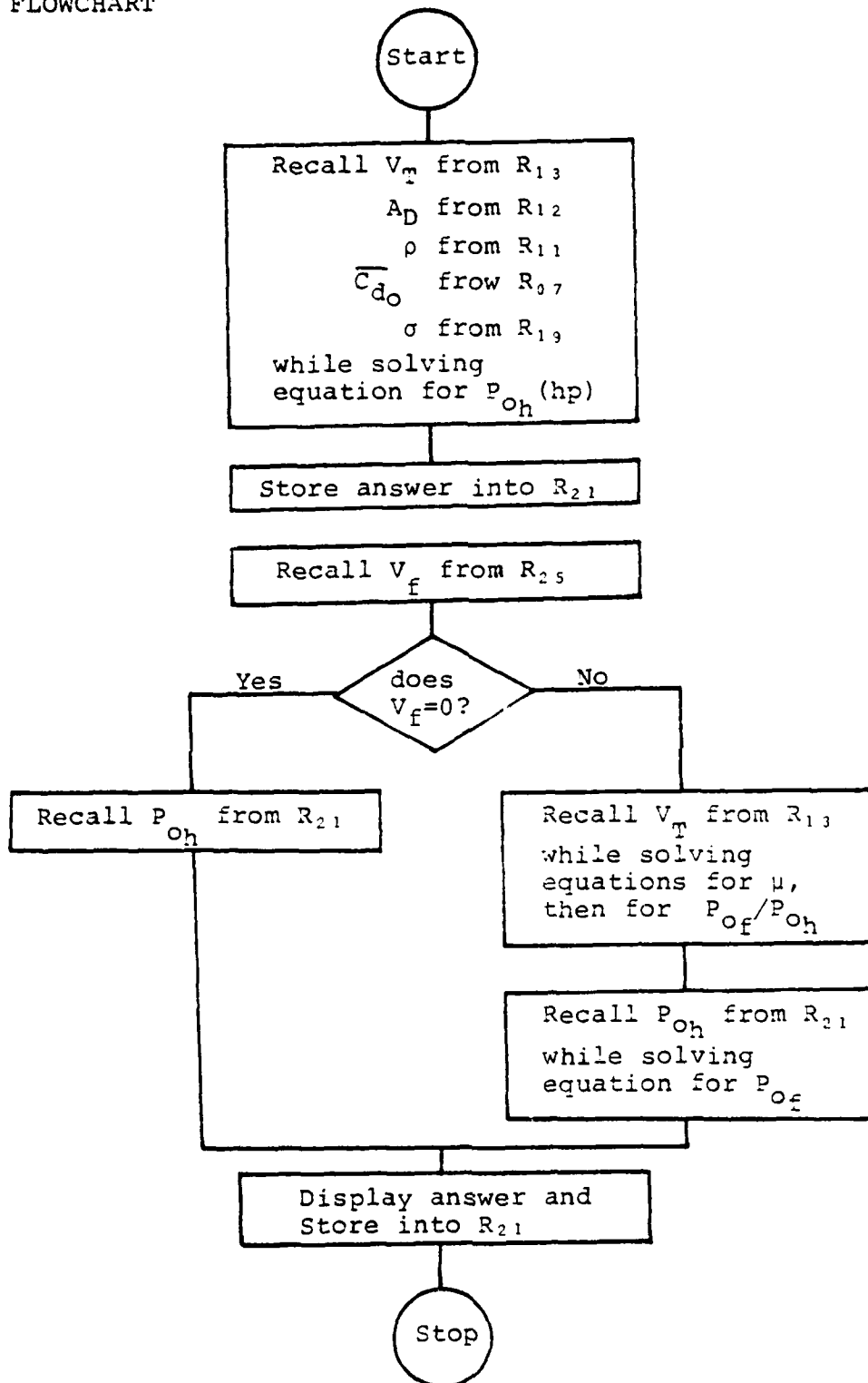
V_f is the forward velocity of the helicopter (ft/sec)

σ_r is the solidity of the rotor system

μ is the ratio of the rotor translational velocity to the velocity at the tip due to rotation

ρ is the density of the air $\left[\frac{\text{lb-sec}^2}{\text{ft}^4} \right]$

3. FLOWCHART



4. EXAMPLE PROBLEMS AND USER INSTRUCTIONS

none

5. PROGRAMS & SUBROUTINES USED

"PO"

6. PROGRAM LISTINGS

SUBROUTINE

```
01♦LBL "PO"  
02 RCL 13  
03 3  
04 Y↑X  
05 RCL 12  
06 *  
07 RCL 11  
08 *  
09 RCL 07  
10 *  
11 RCL 19  
12 *  
13 4400  
14 /  
15 STO 21  
16 RCL 25  
17 X=0?  
18 GTO 08  
19 RCL 13  
20 /  
21 X↑2  
22 4.25  
23 *  
24 1  
25 +  
26 RCL 21  
27 *  
28 GTO 09  
29♦LBL 08  
30 RCL 21  
31♦LBL 09  
32 "PO="   
33 PROMPT  
34 VIEW X  
35 STOP  
36 STO 21  
37 END
```

INDUCED POWER

1. PURPOSE

This subroutine computes the induced power, P_i , required in terms of horsepower. This subroutine deals only with hover and it takes into consideration both tip losses and ground effect. The induced power which produces a thrust equal to the weight (at hover) is equal to the product of the thrust and the inflow velocity. All of the main programs compute the inflow velocity peculiar to their flight conditions and will enter this subroutine at Label "PJ" or "TJ".

2. EQUATIONS

$$P_i = T \cdot v = T \sqrt{T/2\rho \cdot A_D} = \frac{T^{1.5}}{\sqrt{2\rho \cdot A_D}} \quad (17)$$

$$P_{iTL} = \frac{P_i}{B} \quad (9)$$

$$\text{G.E. RATIO} = \frac{P_i}{P_{iOGE}} \quad (12)$$

where:

T is the thrust which is equal to the weight, W (lb)

v is the induced velocity (ft/sec)

B is the tip loss factor

ρ is the density of the air $\left[\frac{\text{lb-sec}^2}{\text{ft}^4} \right]$

A_D is the disc area (ft²)

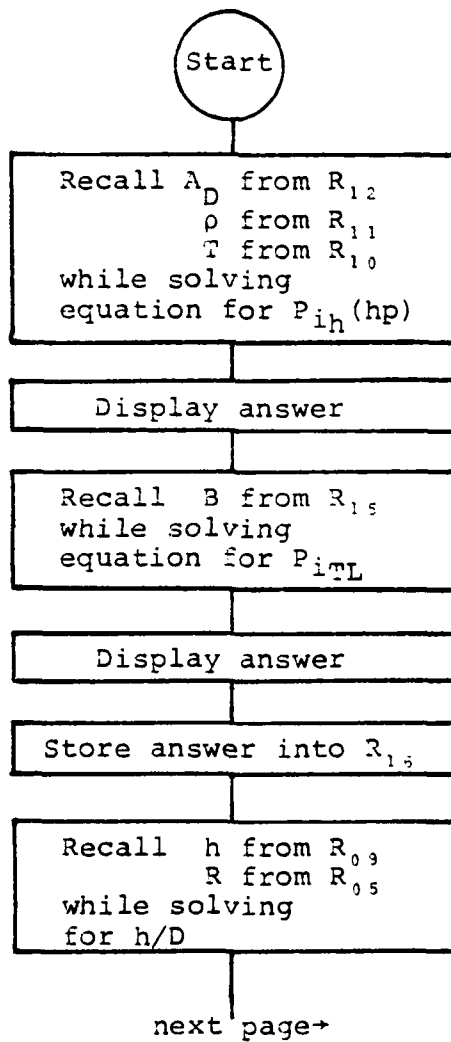
P_i is the induced power $\left[\frac{\text{ft-lb}}{\text{sec}} \right]$

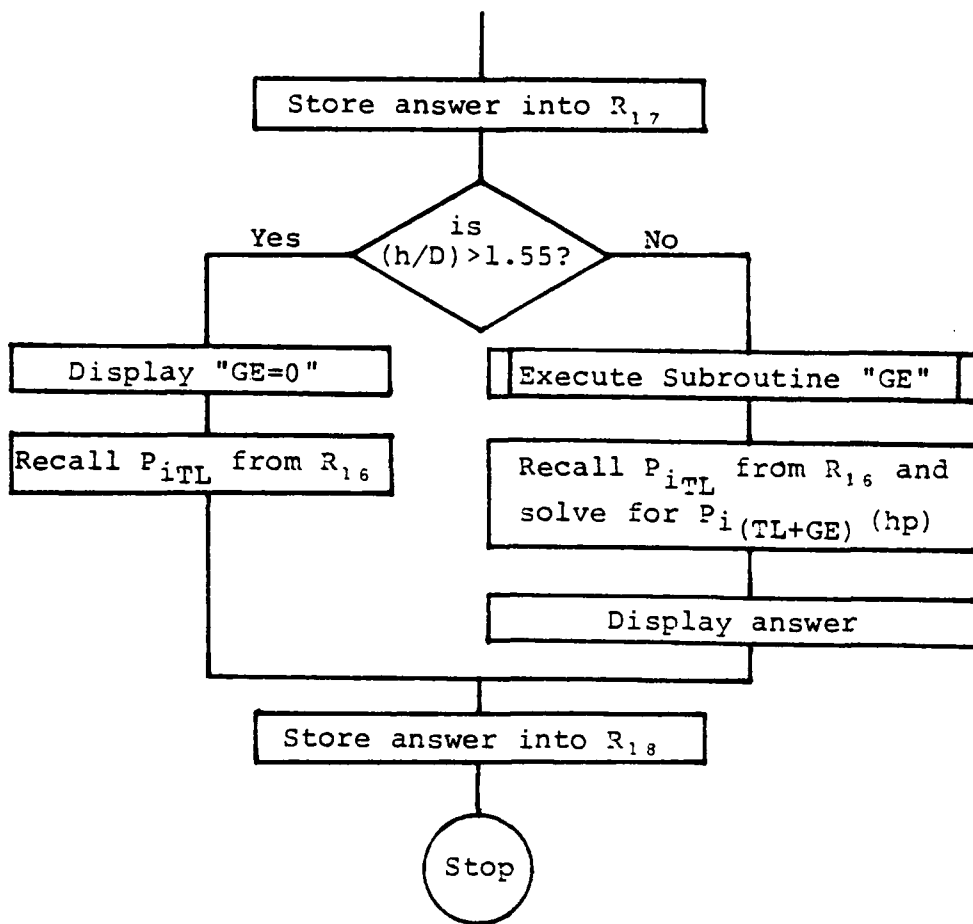
P_{iTL} is the induced power with tip losses $\left[\frac{\text{ft-lb}}{\text{sec}} \right]$

P_{iOGE} is the induced power under out-of-ground-effect conditions $\left[\frac{\text{ft-lb}}{\text{sec}} \right]$

G.E.
RATIO is the ground effect ratio

3. FLOWCHART





4. EXAMPLE PROBLEMS AND USER INSTRUCTIONS

none

5. PROGRAMS AND SUBROUTINES USED

"PI"
"GE"

6. PROGRAM LISTINGS

SUBROUTINE

```
01♦LBL "PI"
02 RCL 10
03 1.5
04 Y↑X
05 RCL 11
06 RCL 12
07 *
08 2
09 *
10 SQRT
11 /
12 550
13 /
14♦LBL "PJ"
15 "PI="
16 PROMPT
17 VIEW X
18 STOP
19 RCL 15
20 /
21♦LBL "TJ"
22 "PI<TL>="
23 PROMPT
24 VIEW X
25 STOP
26 STO 16
27 RCL 09
28 2
29 /
30 RCL 05
31 /
32 STO 17
33 1.55
34 -
35 X>0?
36 GTO 12
37 XEQ "GE"
38 RCL 16
39 *
40 "PI<TL+G
E>="
41 PROMPT
42 VIEW X
43 STOP
44 GTO 13
45♦LBL 12
46 "GE=0"
47 PROMPT
48 RCL 16
49♦LBL 13
50 STO 18
51 END
```


CLIMB POWER

1. PURPOSE

This subroutine computes the climb power, P_c , required in terms of horsepower.

2. EQUATIONS

$$P_c = T \cdot V_v \quad (18)$$

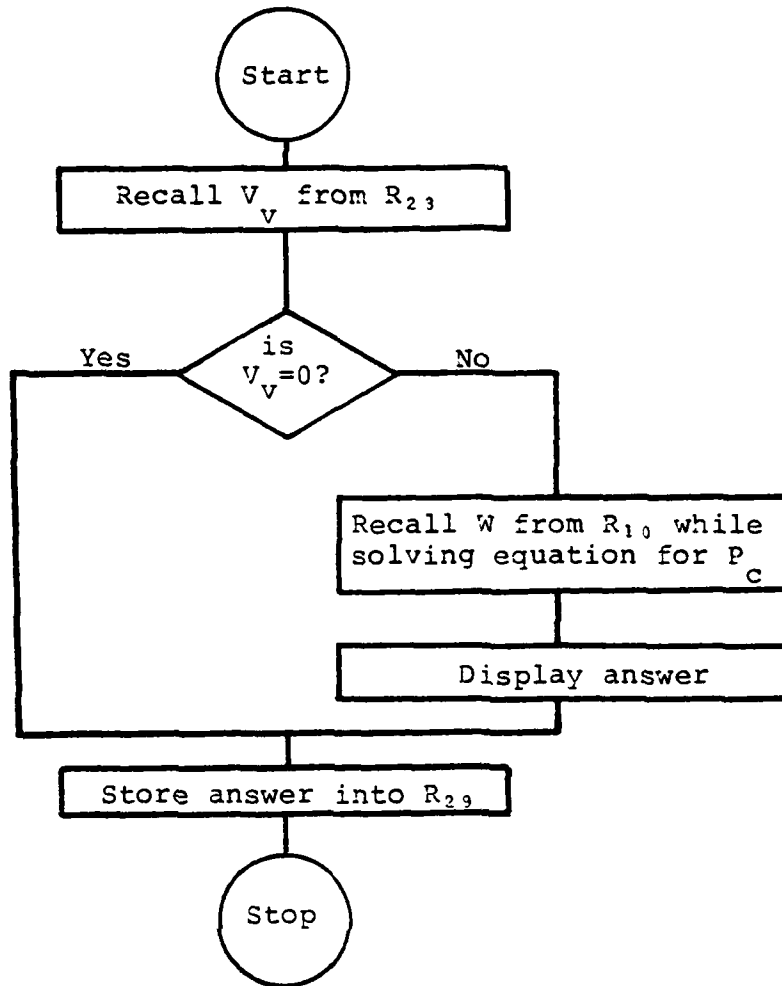
where:

P_c is climb power $\left[\frac{\text{ft-lb}_f}{\text{sec}} \right]$

T is the thrust which is equal to the weight, W (lb)

V_v is the vertical velocity (ft/sec)

3. FLOWCHART



4. EXAMPLE PROBLEMS AND USER INSTRUCTIONS

none

5. PROGRAMS & SUBROUTINES USED

"PC"

6. PROGRAM LISTINGS

SUBROUTINE

```
01♦LBL "PC"  
02 RCL 23  
03 X=0?  
04 GTO 02  
05 RCL 10  
06 *  
07 550  
08 /  
09 "PC="   
10 PROMPT  
11 VIEW X  
12 STOP  
13♦LBL 02  
14 STO 29  
15 END
```

PARASITE POWER

1. PURPOSE

This subroutine computes the parasite power, P_p , required in terms of horsepower. As the helicopter proceeds from hover into forward flight, drag forces are created on the various components of the helicopter due to pressure drag and skin friction.

2. EQUATIONS

$$P_p = \frac{1}{2}\rho f_v V_v^3 + \frac{1}{2}\rho f_f V_f^3 \quad (19)$$

where:

P_p is the parasite power $\left[\frac{\text{ft}\cdot\text{lb}_f}{\text{sec}} \right]$

f_v is the equivalent flat plate area for vertical flight (ft^2)

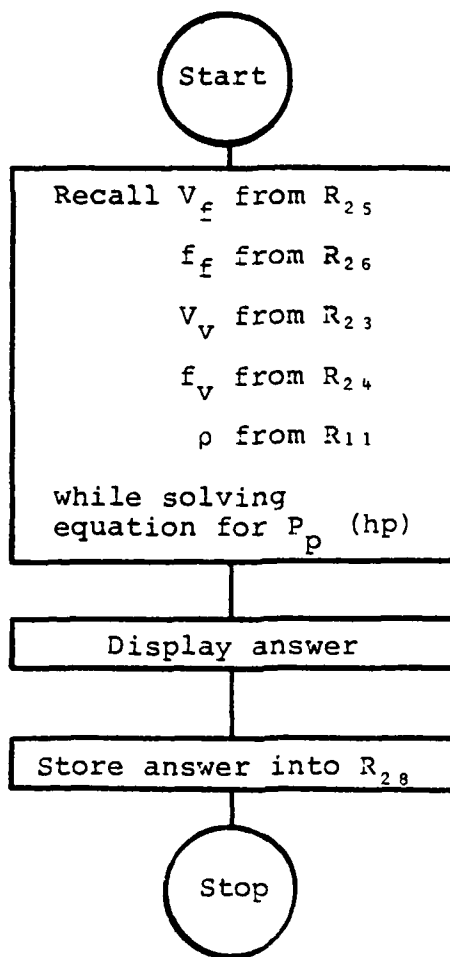
f_f is the equivalent flat plate area for forward flight (ft^2)

V_v is the vertical velocity (ft/sec)

V_f is the forward velocity (ft/sec)

ρ is the density of the air $\left[\frac{\text{lb}\cdot\text{sec}^2}{\text{ft}^4} \right]$

3. FLOWCHART



4. EXAMPLE PROBLEMS AND USER INSTRUCTIONS

none

5. PROGRAMS & SUBROUTINES USED

"pp"

6. PROGRAM LISTINGS

SUBROUTINE

```
01♦LBL "PP"  
02 RCL 25  
03 3  
04 Y↑X  
05 RCL 26  
06 *  
07 RCL 23  
08 3  
09 Y↑X  
10 RCL 24  
11 *  
12 +  
13 RCL 11  
14 *  
15 1100  
16 /  
17 "PP="   
18 PROMPT  
19 VIEW X  
20 STOP  
21 STO 28  
22 END
```

TOTAL POWER

1. PURPOSE

This subroutine computes the total power, P_T , required for the main rotor in terms of horsepower.

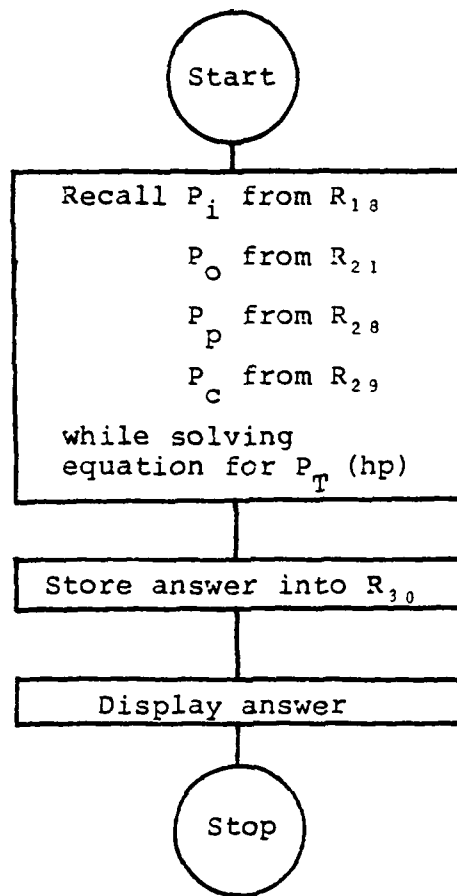
2. EQUATIONS

$$P_T = P_i + P_o + P_c + P_p \quad (20)$$

where:

- P_T is the total power required
- P_i is the induced power required
- P_o is the profile power required
- P_c is the climb power required
- P_p is the parasite power required

3. FLOWCHART



4. EXAMPLE PROBLEMS AND USER INSTRUCTIONS

none

5. PROGRAMS & SUBROUTINES USED

"PT"

6. PROGRAM LISTINGS

SUBROUTINE

```
01 ♦ LBL "PT"  
02 RCL 18  
03 RCL 21  
04 +  
05 RCL 28  
06 +  
07 RCL 29  
08 +  
09 STO 30  
10 "PT<MR>="
```

```
11 PROMPT  
12 VIEW X  
13 STOP  
14 END
```

EQUIVALENT AREA

1. PURPOSE

This subroutine computes the equivalent area, A_e , with tip losses of a tandem rotor helicopter in terms of square feet.

2. EQUATIONS

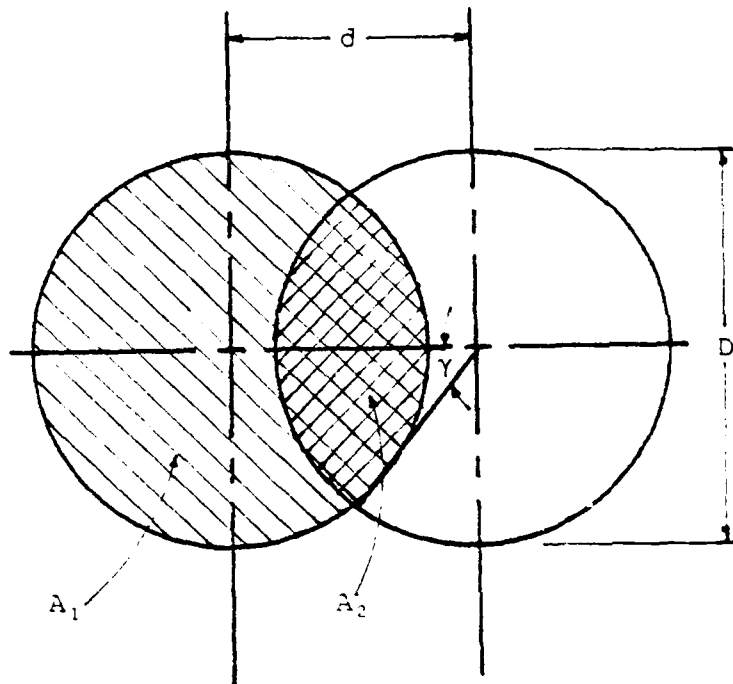


FIGURE 3
Planform View Of Overlapped Rotors [Ref. 3]

where:

$$\text{overlap} = 1 - d/D \quad (21)$$

$$S_R = d/R \quad (22)$$

$$\gamma = \cos^{-1}(1 - \text{overlap}) \quad (23)$$

$$A_O = 2A_1 + 2A_2 = 2\pi R^2 \quad (24)$$

AD-A125 036

HAND-HELD COMPUTER PROGRAMS FOR PRELIMINARY HELICOPTER
DESIGN(U) NAVAL POSTGRADUATE SCHOOL MONTEREY CA
P J FARDINK OCT 82


22

UNCLASSIFIED

F/G 9/2.

NL

END
DATE
FILMED
3-83
DTIC



MICROCOPY RESOLUTION TEST CHART
NATIONAL BUREAU OF STANDARDS-1963-A

$$A_e = 2A_1 + 2A_2 = A_o \left(1 - \left[\frac{\gamma - \sin\gamma \cos\gamma}{\pi} \right] \right) \quad (25)$$

where:

S_R is the shaft spacing ratio

A_o is the total combined area of the two rotor discs (ft^2)

A_e is the equivalent area (ft^2)

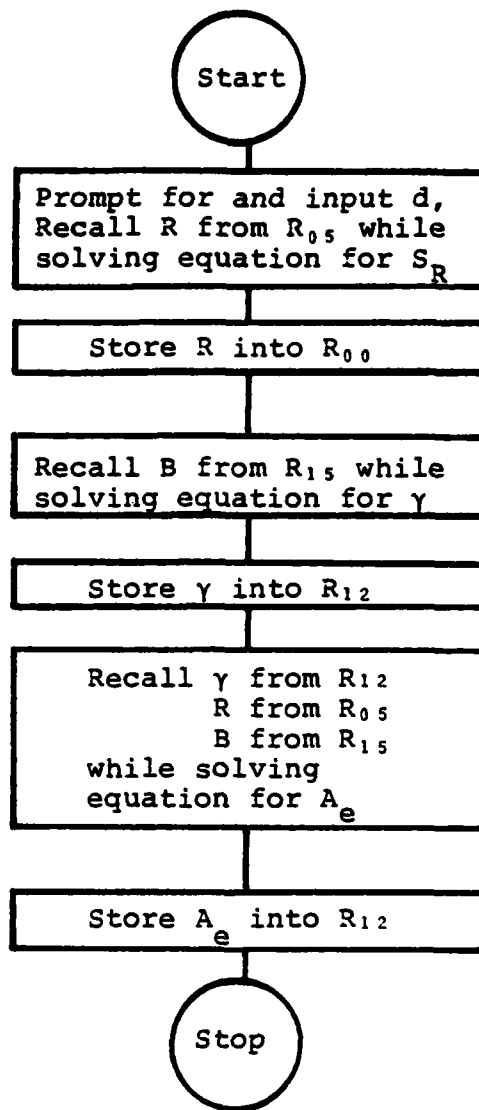
γ is the wake skew angle (radians)

R is the radius of the rotor system (ft)

D is the diameter of the rotor system (ft)

d is the distance between the rotor shafts (ft)

3. FLOWCHART



4. EXAMPLE PROBLEMS AND USER INSTRUCTIONS

none

5. PROGRAMS & SUBROUTINES USED

"AE"

6. PROGRAM LISTINGS

SUBROUTINE

```
01♦LBL "AE"  
02 "d=?"  
03 PROMPT  
04 RCL 05  
05 /  
06 STO 00  
07 RCL 15  
08 /  
09 2  
10 /  
11 RAD  
12 ACOS  
13 STO 12  
14 COS  
15 RCL 12  
16 SIN  
17 *  
18 CHS  
19 RCL 12  
20 +  
21 PI  
22 /  
23 CHS  
24 1  
25 +  
26 2  
27 *  
28 PI  
29 *  
30 RCL 05  
31 RCL 15  
32 *  
33 X↑2  
34 *  
35 STO 12  
36 DEG  
37 END
```

TANDEM ROTOR INDUCED POWER

1. PURPOSE

This subroutine computes the induced power required for a tandem rotor helicopter in terms of horsepower. This subroutine will compute both the induced power at a hover, P_{i_h} , and the induced power in forward flight, P_{i_f} .

2. EQUATIONS

$$P_{i_h} = \frac{T^{1.5}}{\sqrt{2 \cdot \rho \cdot A_e}} \cdot K \quad (26)$$

$$K = 1.46 - 0.253S_R \quad (27)$$

$$P_{i_f} = P_{i_h} \cdot K_u \quad (28)$$

$$K_u = 1 + d_f/2 \quad (29)$$

$$S_R = d/R \quad (22)$$

$$\gamma = \tan^{-1} \left(\frac{1.5 T_f}{2 \cdot \rho \cdot A_f \cdot V_f^2} \right) \quad (30)$$

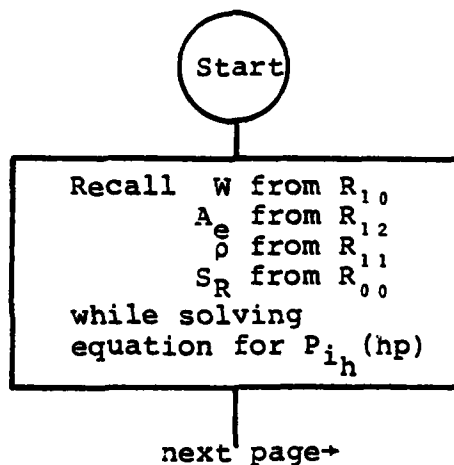
$$d_f = \frac{\sqrt{1 + S_R^2} + S_R \cdot \cos \gamma}{\sqrt{1 + S_R^2} (1 + S_R^2 \cdot \sin^2 \gamma)} \quad (31)$$

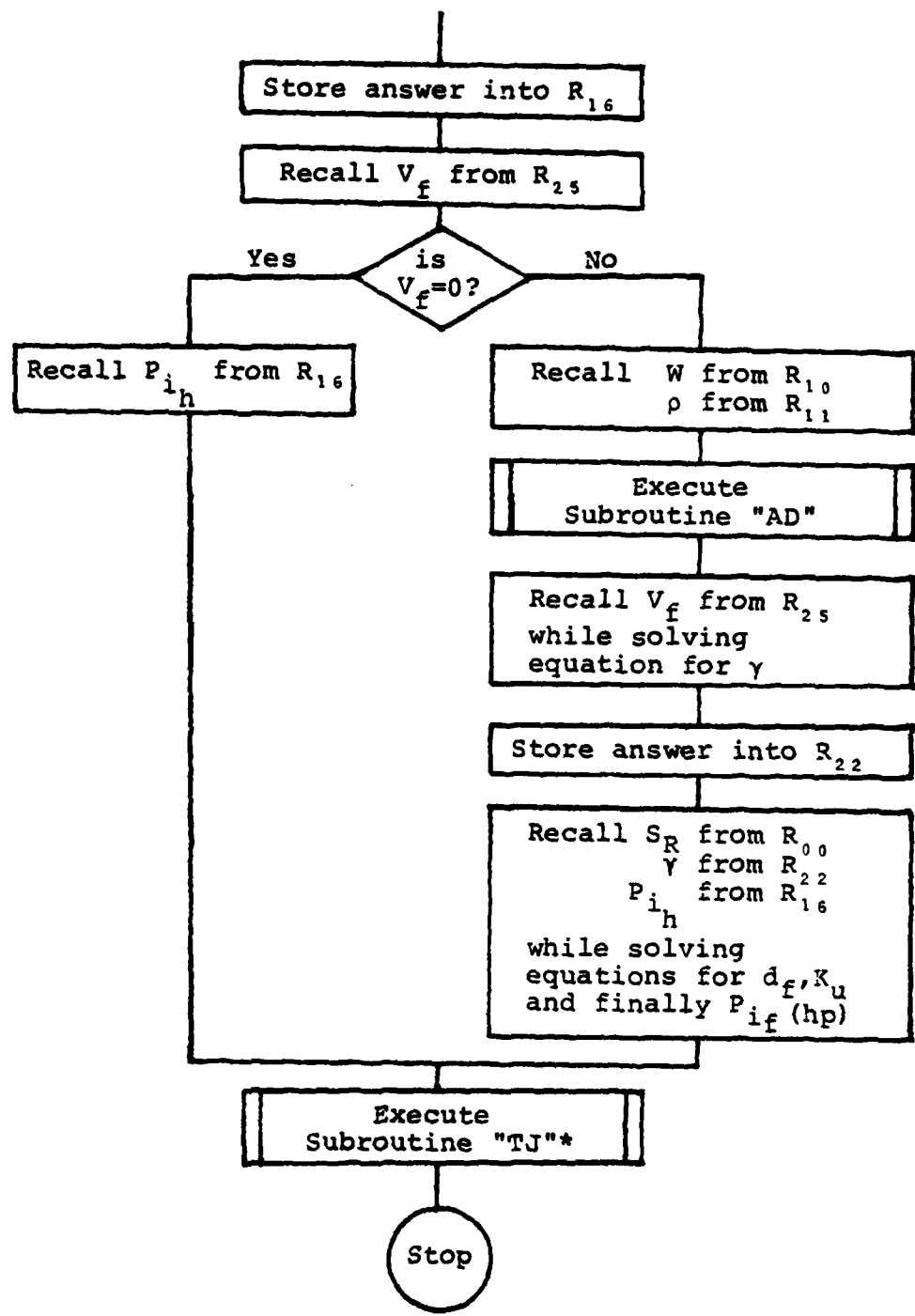
where:

P_{i_h} is the induced power at a hover $\left[\frac{\text{ft-lb}_f}{\text{sec}} \right]$

P_{i_f} is the induced power in forward flight $\left[\frac{\text{ft-lb}_f}{\text{sec}} \right]$
 A_e is the effective area (ft^2)
 A_f is the area of the forward rotor disc (ft^2)
 d_f is the induced power correction factor
 K_u is the forward flight correction factor
 S_R is the rotor shaft spacing ratio
 T_f is the thrust of the forward rotor which is usually equal to $\frac{1}{2}W$, the weight (lb_f)
 V_f is the forward velocity (ft/sec)
 K is the ratio of the induced power at a hover for a single rotor helicopter as compared to a tandem
 d is the distance between the rotor shafts (ft)
 R is the radius of the rotor system (ft)
 T is the thrust which is equal to the weight, W (lb_f)
 γ is the wake skewing angle
 ρ is the density of the air $\left[\frac{\text{lb-sec}^2}{\text{ft}^4} \right]$

3. FLOWCHART





*enters Subroutine "PI" at label "TJ"

4. EXAMPLE PROBLEMS AND USER INSTRUCTIONS

none

5. PROGRAMS & SUBROUTINES USED

"PIT"
"AD"
"PI" at label "TJ"

6. PROGRAM LISTINGS

SUBROUTINE

01♦LBL "PIT	35 STO 22
02 RCL 10	36 SIN
03 1.5	37 X↑2
04 Y↑X	38 RCL 00
05 RCL 12	39 X↑2
06 RCL 11	40 *
07 *	41 1
08 2	42 +
09 *	43 RCL 00
10 SQRT	44 X↑2
11 /	45 1
12 550	46 +
13 /	47 SQRT
14 RCL 00	48 STO 19
15 -.253	49 *
16 *	50 1/X
17 1.46	51 RCL 22
18 +	52 COS
19 *	53 RCL 00
20 STO 16	54 *
21 RCL 25	55 RCL 19
22 X=0?	56 +
23 GTO 01	57 *
24 RCL 10	58 2
25 .375	59 /
26 *	60 1
27 RCL 11	61 +
28 /	62 RCL 16
29 XEQ "AD"	63 *
30 /	64 GTO 02
31 RCL 25	65♦LBL 01
32 X↑2	66 RCL 16
33 /	67♦LBL 02
34 ATAN	68 XEQ "TJ"
	69 END

APPENDIX D

MAIN PROGRAMS

This appendix consists of the main programs of this programming effort. The major ingredients of these programs are the subroutines found in the preceding two appendices. These main programs compute the various power requirements for hovering flight, forward (straight and level) flight, vertical flight, and forward climbing flight all for a single rotor helicopter; also tailrotor power requirements; autorotative flight; tandem rotor hovering and forward flight power requirements; and finally a short program to check several of the critical flight parameters.

HOVER

1. PURPOSE

This main program computes the various power requirements in terms of horsepower for hovering flight. The various calculated power requirements are displayed as follows:

Display:

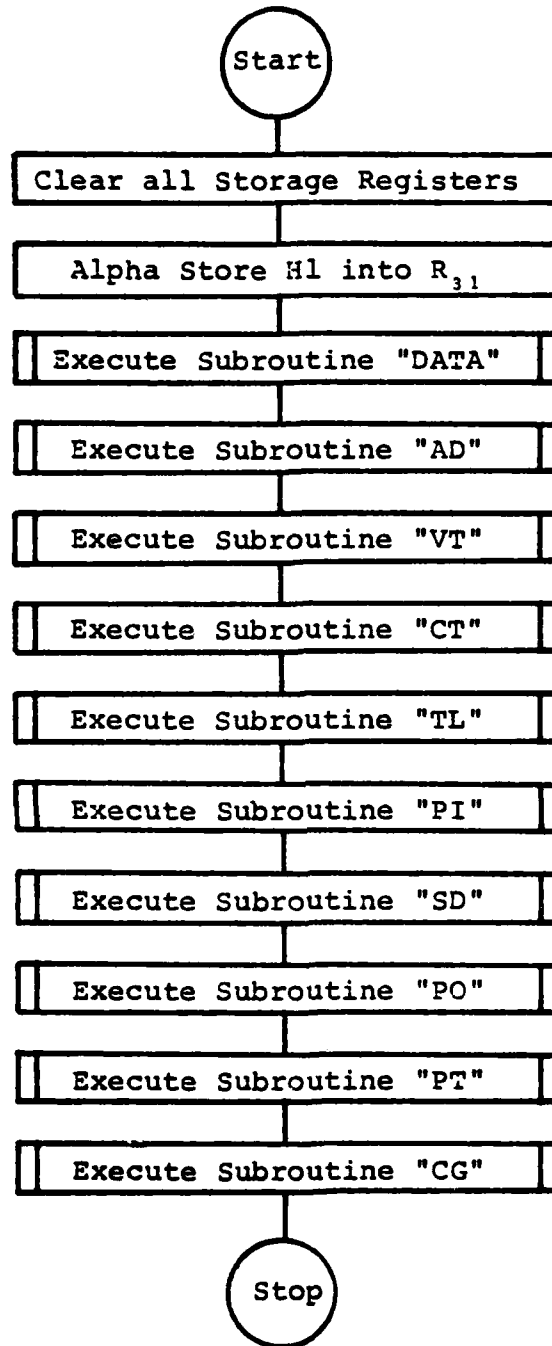
Explanation:

PI=	induced power
PI(TL)=	induced power with tip losses
PI(TL+GE)=	induced power with tip losses plus ground effect
PO=	profile power
PT(MR)=	total power for the main rotor

2. EQUATIONS

No equations are found in the actual program itself. Consult the various subroutine listings for the equations used.

3. FLOWCHART



4. EXAMPLE PROBLEMS AND USER INSTRUCTIONS

Find the hover power requirements for an OH-58C, Kiowa,
under the following conditions:

C = 1.086 ft	$\Omega = 354 \text{ RPM} \rightarrow 37.068 \text{ rads/sec}$
R = 17.7 ft	h = 25 ft
b = 2	D.A. = 1,000 ft
W = 3,000 lbs	$\bar{C}_{d0} = .008$

Keystrokes:	Display:
[XEQ] [ALPHA] HOVER [ALPHA]	REC?
(Rectangular Blade? 1 is Yes, 0 is No)	
1 [R/S]	C=?
1.086 [R/S]	R=?
17.7 [R/S]	b=?
2 [R/S]	Cd0=?
.008 [R/S]	RV=?
37.068 [R/S]	H=?
25 [R/S]	W=?
3,000 [R/S]	D.A.=?
1,000 [R/S]	PI=
[R/S]	140.16
[R/S]	PI(TL) =
[R/S]	145.87
[R/S]	PI(TL+GE) =
[R/S]	139.21
[R/S]	PO=

45.57

PT(MR) =

184.77

CHANGE?

Change Data? 1 is Yes, 0 is No)

[S]

C RV b R W

is desired at this point to increase the weight of this
copter to 3,200 lbs (maximum gross weight). To observe
effect this change will have on the hover power re-
quirements, press the key on the calculator keyboard di-
rectly beneath the variable in need of change. In this case
the [LN] key is directly beneath the W in the display:

W=?

) [R/S]

CHANGE?

Further Changes? 1 is Yes, 0 is No)

[S]

PI =

154.41

PI(TL) =

160.92

PI(TL+GE) =

153.56

PO =

45.57

PT(MR) =

199.13

CHANGE?

0 [R/S] 0.00

Now, using the same OH-58C at the new weight of 3,200 lbs
find the hover power requirements with the rotor system
height above the ground, h, equal to 60 ft.

Keystrokes:	Display:
[R/S]	REC?
1 [R/S]	C=?
1.086 [R/S]	R=?
17.7 [R/S]	b=?
2 [R/S]	CdO=?
.008 [R/S]	RV=?
37.068 [R/S]	H=?
60 [R/S]	W=?
3,200 [R/S]	D.A.=?
1,000 [R/S]	PI=
[R/S]	154.41
[R/S]	PI(TL) =
[R/S]	160.92
[R/S]	GE=0

(Ground effect is now equal to zero, the helicopter is
hovering out of ground effect.)

[R/S]	PO=
[R/S]	45.57
[R/S]	PT(MR) =
[R/S]	206.48

[R/S]

CHANGE?

0 [R/S]

0.00

5. PROGRAMS & SUBROUTINES USED

"AD"	"ECHORD"	"PT"
"CG"	"GE"	"SD"
"CT"	"HOVER"	"TL"
"DATA"	"PI"	"VT"
"DN"	"PO"	

6. PROGRAM LISTINGS

PROGRAM

```
01♦LBL "HOV  
ER"  
02 CLRG  
03 "H1"  
04 ASTO 31  
05 XEQ "DAT  
A"  
06♦LBL "H1"  
07 XEQ "AD"  
08 XEQ "VT"  
09 XEQ "CT"  
10 XEQ "TL"  
11 XEQ "PI"  
12 XEQ "SD"  
13 XEQ "PO"  
14 XEQ "PT"  
15 XEQ "CG"  
16 END
```

FORWARD FLIGHT

1. PURPOSE

This main program computes the various power requirements in terms of horsepower for forward (straight and level) flight. If the forward flight velocity, V_f , is entered as zero, this program will also calculate the various hover power requirements. The various calculated power requirements are displayed as follows:

Display:	Explanation:
PI=	induced power
PI(TL)=	induced power with tip losses
PI(TL+GE)=	induced power with tip losses plus ground effect
PO=	profile power
PP=	parasite power
PT(MR)=	total power for the main rotor

2. EQUATIONS

$$V_f \text{ (ft/sec)} = V_f \text{ (kts)} \cdot (1.68894) \quad (32)$$

$$P_i = T \cdot v_{iT} = T \cdot \left\{ -\frac{V_f^2/v_i^2}{2} + \sqrt{(V_f^2/2v_i^2)^2 + 1} \right\}^{\frac{1}{2}} \cdot v_i \quad (33)$$

where:

T is the thrust which is equal to the weight, W (lb_f)

V_f is the forward velocity (ft/sec)

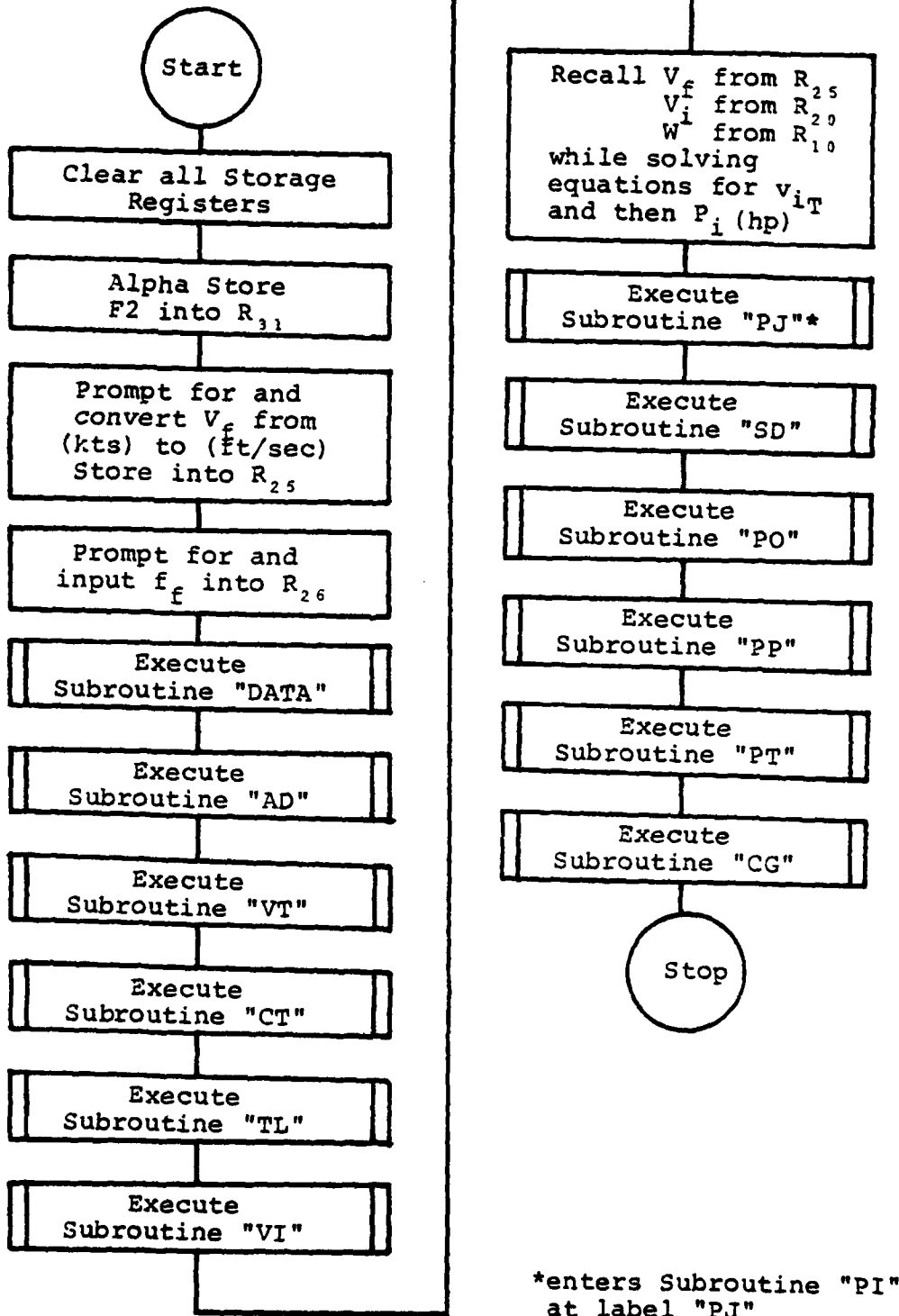
v_i is the induced velocity at a hover (ft/sec)

P_i is the induced power required $\left[\frac{\text{ft-lb}_f}{\text{sec}} \right]$

v_{iT} is the thrust component of the induced velocity
vector (ft/sec)

No other equations are found in the actual program
itself. Consult the various subroutine listings for the
equations used.

3. FLOWCHART



4. EXAMPLE PROBLEMS AND USER INSTRUCTIONS

Find the forward (straight and level) flight power requirements for an OH-6A, Cayuse, under the following conditions:

$C = 0.57 \text{ ft}$	$\Omega = 470 \text{ RPM} \rightarrow 49.215 \text{ rads/sec}$
$R = 13.165 \text{ ft}$	$\bar{C}_{d_0} = .009$
$b = 4$	$D.A. = 500 \text{ ft}$
$W = 2,250 \text{ lbs}$	$V_f = 90 \text{ kts}$
$h = 100 \text{ ft}$	$f_f = 5.0 \text{ ft}^2$

Keystrokes:

[XEQ] [ALPHA] FORFLT [ALPHA]

90 [R/S]

5 [R/S]

(Rectangular Blade? 1 is Yes, 0 is No)

1 [R/S]

.57 [R/S]

13.165 [R/S]

4 [R/S]

.009 [R/S]

49.215 [R/S]

100 [R/S]

2,250 [R/S]

500 [R/S]

[R/S]

[R/S]

[R/S]

Display:

FOR V=?

F.P.A.(FF)=?

REC?

C=?

R=?

b=?

Cd0=?

RV=?

H=?

W=?

D.A.=?

PI=

23.72

PI(TL)=

24.28

[R/S]	GE=0
[R/S]	PO=
[R/S]	48.27
[R/S]	PP=
[R/S]	37.39
[R/S]	PT(MR) =
[R/S]	109.94
[R/S]	CHANGE?

(Change Data? 1 is Yes, 0 is No)

1 [R/S]	C RV b R W
---------	------------

It is desired at this point to decrease the rotor radius from 13.165 ft to 12.665 ft. To observe what effect this change will have on the forward flight horsepower requirements, press the key on the calculator keyboard directly beneath the variable in need of change. In this case the [LOG] key is directly beneath the R in the display:

[LOG]	R=?
12.665 [R/S]	CHANGE?

(Any Further Changes? 1 is Yes, 0 is No)

0 [R/S]	PI=
[R/S]	25.63
[R/S]	PI(TL) =
[R/S]	26.28
[R/S]	GE=0
[R/S]	PO=
[R/S]	41.97

[R/S]	PP=
[R/S]	37.39
[R/S]	PT(MR) =
[R/S]	105.64
[R/S]	CHANGE?
0 [R/S]	0.00

Find the hovering flight power requirements for the same OH-6A under the original conditions with the only difference being $V_f = 0$.

Keystrokes:

Display:

[R/S]	FOR V=?
0 [R/S]	F.P.A. (FF) =?
5 [R/S]	REC?
1 [R/S]	C=?
.57 [R/S]	R=?
13.165 [R/S]	b=?
4 [R/S]	CdO=?
.009 [R/S]	RV=?
49.215 [R/S]	H=?
100 [R/S]	W=?
2,250 [R/S]	D.A.=?
500 [R/S]	PI=
[R/S]	121.50
[R/S]	PI(TL) =
[R/S]	124.35

[R/S]	GE=0
[R/S]	PO=
[R/S]	39.12
[R/S]	PP=
[R/S]	0.00
[R/S]	PT(MR)=
[R/S]	163.47
[R/S]	CHANGE?
0 [R/S]	0.00

note - When program "HOVER" is executed for this case, the outputs are identical. Examination of equation 33 with $V_f = 0$, readily explains the reason for the identical results.

5. PROGRAMS & SUBROUTINES USED

"AD"	"FORFLT"	"SD"
"CG"	"GE"	"TL"
"CT"	"PI" at label "PJ"	"VI"
"DATA"	"PO"	"VT"
"DN"	"PP"	
"ECHORD"	"PT"	

6. PROGRAM LISTINGS

PROGRAM

01 LBL "FOR FLT"	07 1.F8894
02 CLRG	08 *
03 "F2"	09 STO 25
04 ASTO 31	10 "F.P.A.< FF>=?"
05 "FOR V=?"	11 PROMPT
"	12 STO 26
06 PROMPT	

```
13 XEQ "DAT  
A"  
14 LBL "F2"  
15 XEQ "AD"  
16 XEQ "VT"  
17 XEQ "CT"  
18 XEQ "TL"  
19 XEQ "VI"  
20 RCL 25  
21 RCL 20  
22 /  
23 X↑2  
24 2  
25 /  
26 STO 00  
27 X↑2  
28 1  
29 +  
30 SQRT  
31 RCL 00  
32 -  
33 SQRT  
34 RCL 20  
35 *  
36 RCL 10  
37 *  
38 550  
39 /  
40 XEQ "PJ"  
41 XEQ "SD"  
42 XEQ "PO"  
43 XEQ "PP"  
44 XEQ "PT"  
45 XEQ "CG"  
46 END
```

VERTICAL FLIGHT

1. PURPOSE

This main program computes the various power requirements in terms of horsepower for vertical flight (vertical ascent). If the vertical velocity, V_v , is entered as zero, this program will also calculate the various hover power requirements. The various calculated power requirements are displayed as follows:

Display:	Explanation:
PI=	induced power
PI(TL)=	induced power with tip losses
PI(TL+GE)=	induced power with tip losses plus ground effect
PO=	profile power
PP=	parasite power
PC=	climb power
PT(MR)=	total power for the main rotor

2. EQUATIONS

$$V_v \text{ (ft/sec)} = V_v \text{ (ft/min)} \cdot 60 \quad (34)$$

$$v_v = -\frac{V_v}{2} + \sqrt{(V_v/2)^2 + v_{ih}^2} \quad (35)$$

$$P_{i_c} = T \cdot v_v \quad (36)$$

where:

T is the thrust which is equal to the weight, W (lb_f)

v_v is the induced velocity due to pumping in a vertical climb (ft/sec)

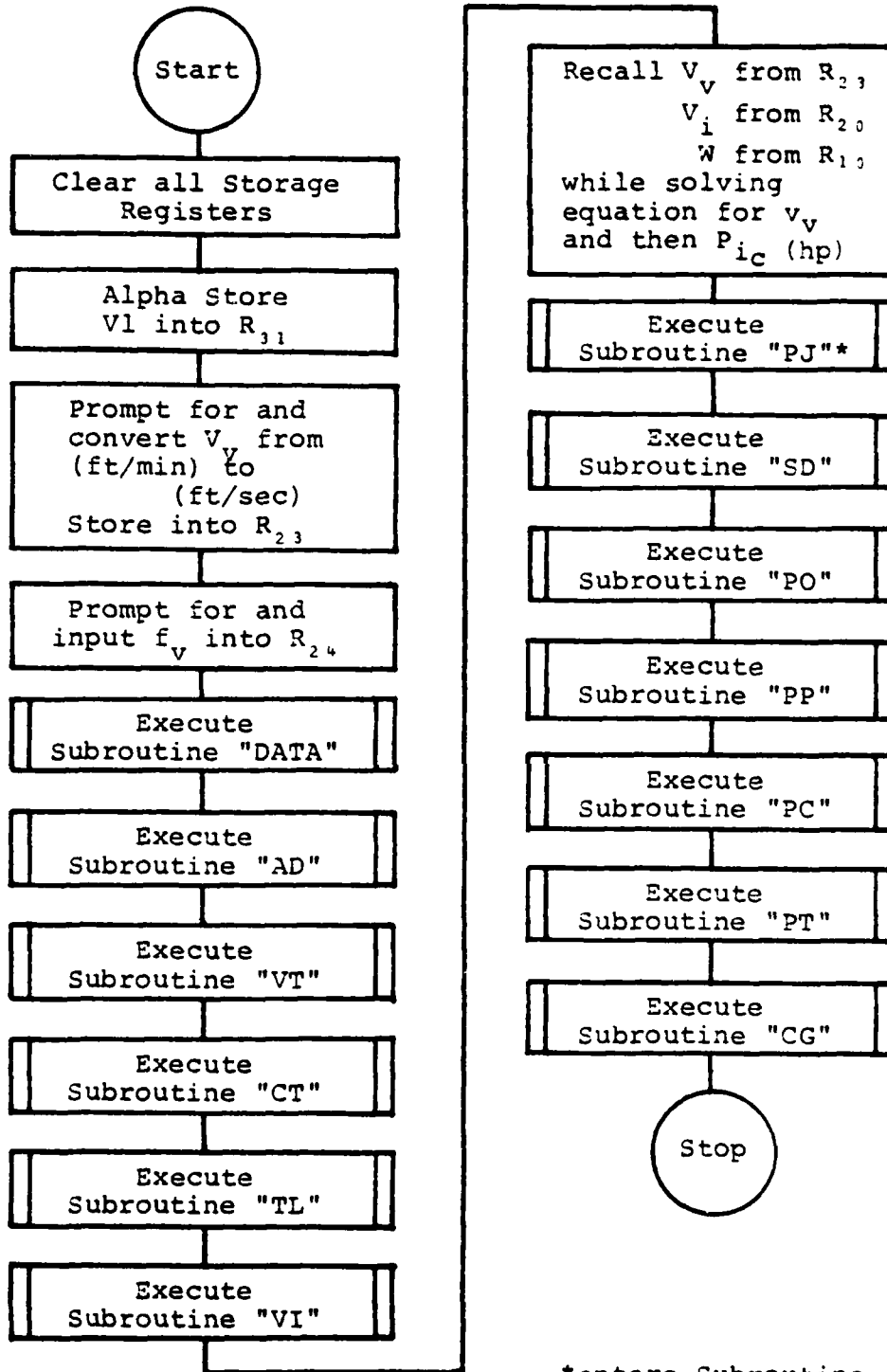
V_v is the steady rate of climb velocity (ft/sec)

v_{ih} is the induced velocity at a hover (ft/sec)

P_{i_c} is the induced power required to climb $\left[\frac{ft-lb_f}{sec} \right]$

No other equations are found in the actual program itself. Consult the various subroutine listings for the equations used.

3. FLOWCHART



*enters Subroutine "PI" at label "PJ"

EXAMPLE PROBLEMS AND USER INSTRUCTIONS

1 the vertical flight power requirements for an SH-3H,
King, under the following flight conditions:

C = 1.52 ft	$\bar{C}_{d_0} = .0095$
R = 31 ft	D.A. = 100 ft
b = 5	$V_v = 1,000$ ft/sec
W = 18,000 lbs	$f_v = 360$ ft ²
h = 100 ft	$\Omega = 203$ RPM \rightarrow 21.257 rads/sec

strokes:	Display:
0] [ALPHA] VERFLT [ALPHA]	VERT V=?
00 [R/S]	F.P.A.(VF)=?
[R/S]	REC?
stangular Blade? 1 is Yes, 0 is No)	
[R/S]	C=?
0 [R/S]	R=?
[R/S]	b=?
[R/S]	Cd0=?
05 [R/S]	RV=?
057 [R/S]	H=?
[R/S]	W=?
00 [R/S]	D.A.=?
[R/S]	PI=
0]	919.60
0]	PI(TL)=
0]	939.83

[R/S]	GE=0
[R/S]	PO=
[R/S]	344.97
[R/S]	PP=
[R/S]	3.59
[R/S]	PC=
[R/S]	545.45
[R/S]	PT(MR) =
[R/S]	1,833.84
[R/S]	CHANGE?

(Change Data? 1 is Yes, 0 is No)

1 [R/S]	C PV b R W
---------	------------

It is desired at this point to taper the rotor blades. The new main rotor blade dimensions are:

$$C_0 = 1.52$$

$$C_1 = 0.76$$

$$a = .90$$

To observe what effect this change will have on the vertical flight power requirements, press the key on the calculator keyboard directly beneath the variable in need of change.

In this case the [Σ+] key is directly beneath the C in the display:

[Σ+]	REC?
0 [R/S]	C0=?
1.52 [R/S]	C1=?
.76 [R/S]	a=?

.9 [R/S]	CE=1.413
(The new Equivalent Chord is 1.413 ft)	
[R/S]	CHANGE?
(Any Further Changes? 1 is Yes, 0 is No)	
0 [R/S]	PI=
[R/S]	919.595
[R/S]	PI(TL)=
[R/S]	939.828
[R/S]	GE=0
[R/S]	PO=
[R/S]	320.776
[R/S]	PP=
[R/S]	3.591
[R/S]	PC=
[R/S]	545.455
[R/S]	PT(MR)=
[R/S]	1,809.649
[R/S]	CHANGE?
0 [R/S]	0.000

Find the hovering flight power requirements for the same SH-3H under the original conditions with the only difference being $V_v = 0$.

Keystrokes:	Display:
[R/S]	VERT V=?
0 [R/S]	F.P.A.(VF)=?

360 [R/S]	REC?
1 [R/S]	C=?
1.52 [R/S]	R=?
31 [R/S]	b=?
5 [R/S]	CdO=?
.0095 [R/S]	RV=?
21.257 [R/S]	H=?
100 [R/S]	W=?
18,000 [R/S]	D.A.=?
100 [R/S]	PI=
[R/S]	1,160.712
[R/S]	PI(TL)=
[R/S]	1,186.250
[R/S]	GE=0
[R/S]	PO=
[R/S]	344.966
[R/S]	PP=
[R/S]	0.000
[R/S]	PT(MR)=
[R/S]	1,531.217
[R/S]	CHANGE?
0 [R/S]	0.000

note - When program "HOVER" is executed for this case, the outputs are identical. Examination of equations 35 and 36 with $V_v = 0$, readily explains the reason for the identical results.

5. PROGRAMS & SUBROUTINES USED

"AD"	"GE"	"SD"
"CG"	"PC"	"TL"
"CT"	"PI" at label "PJ"	"VERFLT"
"DATA"	"PO"	"VI"
"DN"	"PP"	"VT"
"ECHORD"	"PT"	

6. PROGRAM LISTINGS

```

PROGRAM
01♦LBL "VER
FLT" 22 /
02 CLRG 23 RCL 20
03 "V1" 24 /
04 ASTO 31 25 STO 00
05 "VERT V= 26 X↑2
?" 27 1
06 PROMPT 28 +
07 60 29 SQRT
08 / 30 RCL 00
09 STO 23 31 -
10 "F.P.A.< 32 RCL 20
VF>=?" 33 *
11 PROMPT 34 RCL 10
12 STO 24 35 *
13 XEQ "DAT 36 550
A" 37 /
14♦LBL "V1" 38 XEQ "PJ"
15 XEQ "AD" 39 XEQ "SD"
16 XEQ "VT" 40 XEQ "PO"
17 XEQ "CT" 41 XEQ "PP"
18 XEQ "TL" 42 XEQ "PC"
19 XEQ "VI" 43 XEQ "PT"
20 RCL 23 44 XEQ "CG"
21 2 45 END

```

FLIGHT

1. PURPOSE

This main program computes the various power requirements in terms of horsepower for forward climbing flight. If the vertical velocity, V_v , is entered as zero, this program will compute the various power requirements for forward (straight and level) flight. If the forward velocity, V_f , is entered as zero, this program will compute the various power requirements for vertical flight. If both the vertical velocity, V_v , and the forward velocity, V_f , are entered as zero, this program will compute the various power requirements for hovering flight. The various calculated power requirements are displayed as follows:

Display:	Explanation:
PI=	induced power
PI(TL)=	induced power with tip losses
PI(TL+GE)=	induced power with tip losses plus ground effect
PO=	profile power
PP=	parasite power
PC=	climb power
PT(MR)=	total power for the main rotor

2. EQUATIONS

$$V_f \text{ (ft/sec)} = V_f \text{ (kts)} \cdot (1.68894) \quad (32)$$

$$P_i = T \cdot v_{iT} \quad (33)$$

$$V_v \text{ (ft/sec)} = V_v \text{ (ft/min)} \cdot 60 \quad (34)$$

where:

T is the thrust which is equal to the weight, W (lb_f)

P_i is the induced power $\frac{\text{ft-lb}_f}{\text{sec}}$

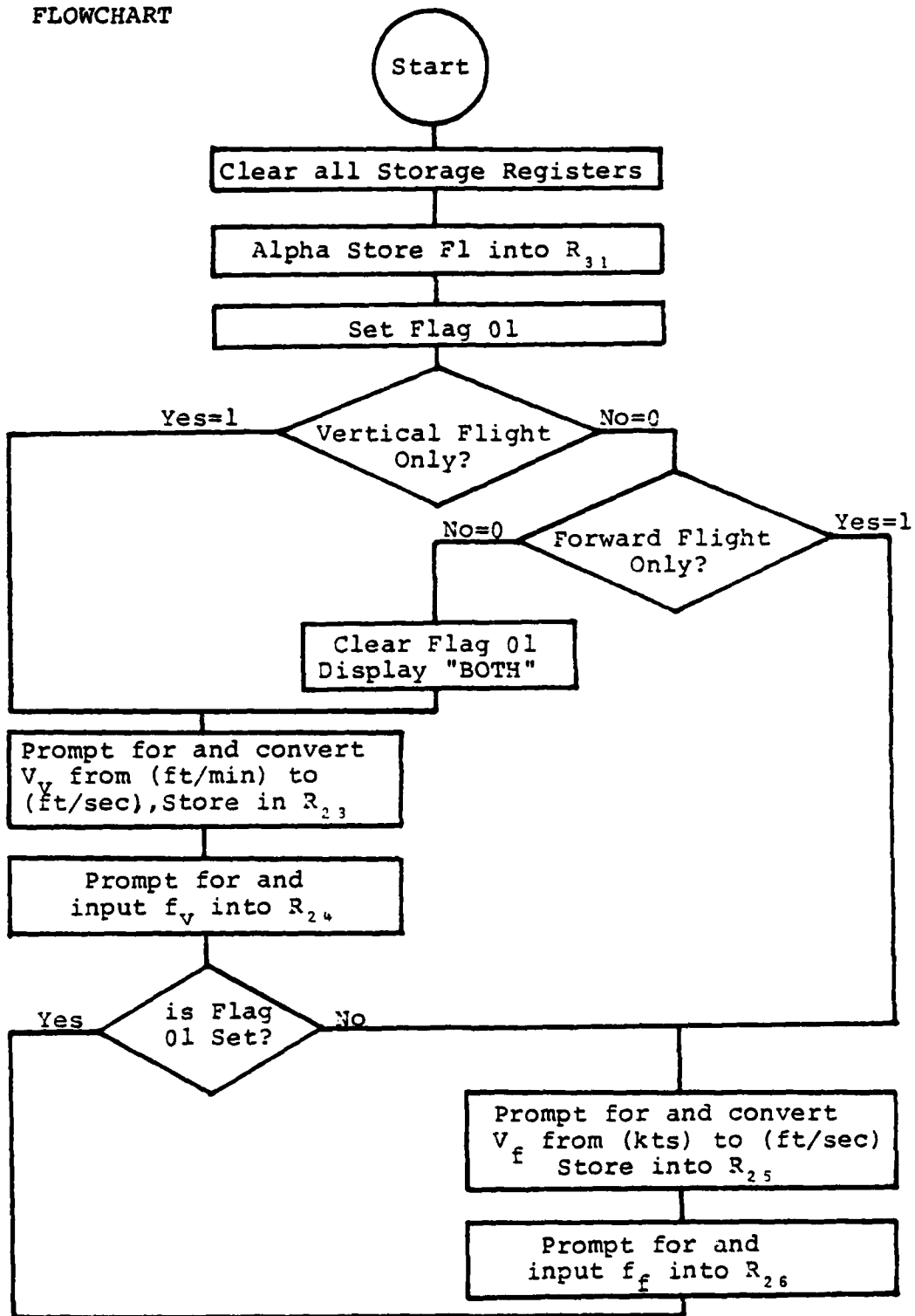
V_v is the vertical velocity (ft/sec)

V_f is the forward velocity (ft/sec)

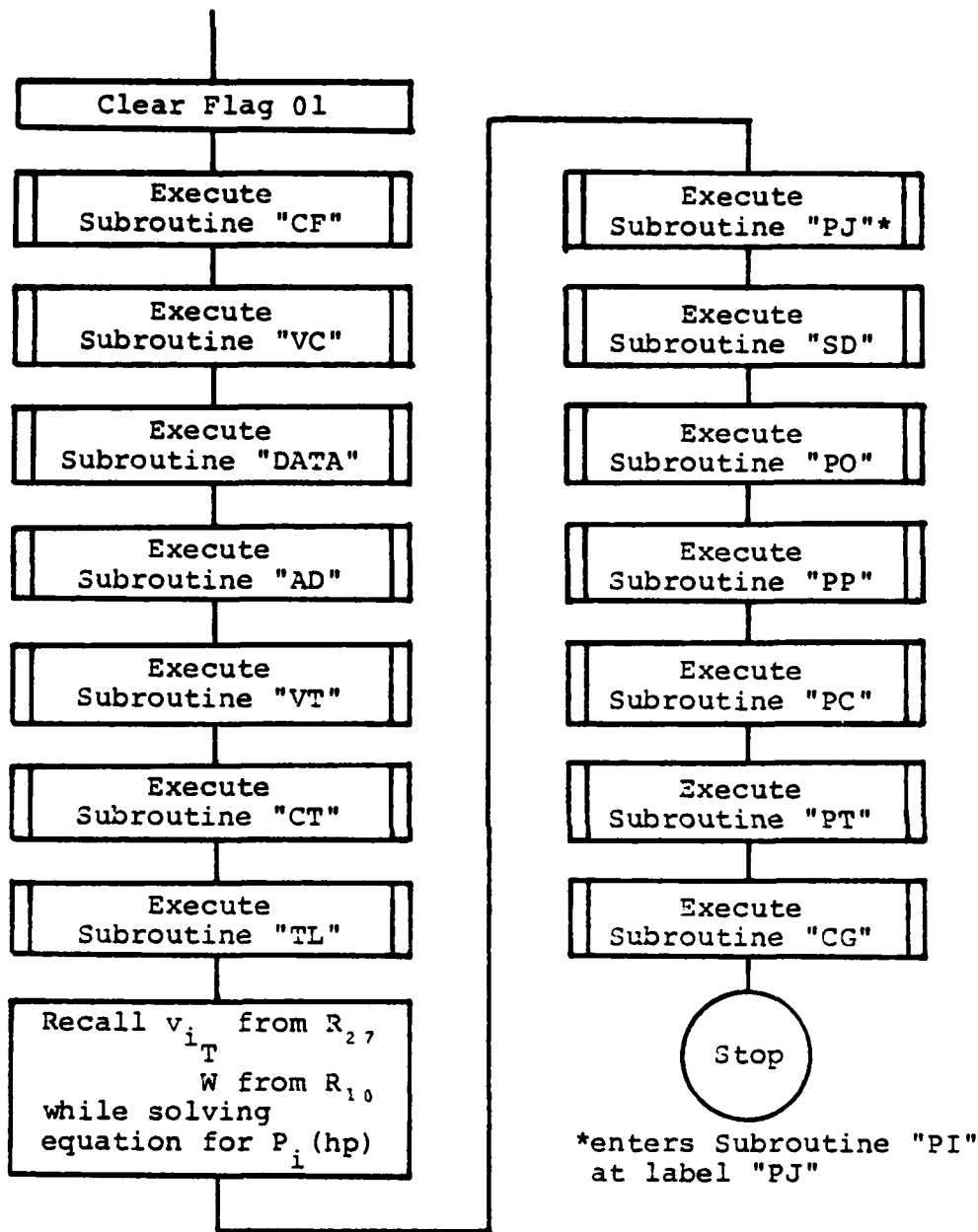
v_{iT} is the vertical component of the induced
velocity (ft/sec)

No other equations are found in the actual program itself. Consult the various subroutine listings for the equations used.

3. FLOWCHART



next page →



4. EXAMPLE PROBLEMS AND USER INSTRUCTIONS

Find the forward climbing flight power requirements for a UH-60A, Blackhawk, under the following conditions:

$C = 1.73 \text{ ft}$	$\Omega = 258 \text{ RPM} + 27.02 \text{ rads/sec}$
$R = 26.835 \text{ ft}$	$\bar{C}_{d_o} = .008$
$b = 4$	$V_v = 500 \text{ ft/sec}$
$W = 18,250 \text{ lbs}$	$f_v = 308 \text{ ft}^2$
$h = 200 \text{ ft}$	$V_f = 60 \text{ kts}$
$D.A. = 650 \text{ ft}$	$f_f = 25.69 \text{ ft}^2$

Keystrokes:

Display:

[XEQ] [ALPHA] FLIGHT [ALPHA]

VERT ONLY?

(Execute Vertical Flight Only? 1 is Yes, 0 is No)

0 [R/S]

FOR ONLY?

(Execute Forward Flight Only? 1 is Yes, 0 is No)

0 [R/S]

BOTH

(The calculator is ready to do the combination of both, i.e. forward climbing flight)

[R/S]

VERT V=?

500 [R/S]

F.P.A.(VF)=?

308 [R/S]

FOR V=?

60 [R/S]

F.P.A.(FF)=?

25.69 [R/S]

R=?

26.835 [R/S]

W=?

18,250 [R/S]

D.A.=?

650 [R/S]	REC?
(Rectangular Blade? 1 is Yes, 0 is No)	
1 [R/S]	C=?
1.73 [R/S]	R=?
26.835 [R/S]	b=?
4 [R/S]	CdO=?
.008 [R/S]	RV=?
27.02 [R/S]	H=?
200 [R/S]	W=?
18,250 [R/S]	D.A.=?
650 [R/S]	PI=
[R/S]	549.98
[R/S]	PI (TL) =
[R/S]	566.21
[R/S]	GE=0
[R/S]	PO=
[R/S]	325.07
[R/S]	PP=
[R/S]	57.05
[R/S]	PC=
[R/S]	276.52
[R/S]	PT (MR) =
[R/S]	1224.85
[R/S]	CHANGE?
0 [R/S]	0.00

Find the vertical flight power requirements for the same UH-60A under the same conditions with the only exception being that the forward flight velocity, V_f , is now equal to zero.

Keystrokes:

Display:

[R/S]	VERT ONLY?
1 [R/S]	VERT V=?
500 [R/S]	F.P.A.(VF)=?
308 [R/S]	R=?
26.835 [R/S]	W=?
18,250 [R/S]	D.A.=?
650 [R/S]	REC?
1 [R/S]	C=?
1.73 [R/S]	R=?
26.835 [R/S]	b=?
4 [R/S]	CdO=?
.008 [R/S]	RV=?
27.02 [R/S]	H=?
200 [R/S]	W=?
18,250 [R/S]	D.A.=?
650 [R/S]	PI=
[R/S]	1248.63
[R/S]	PI(TL)=
[R/S]	1285.50
[R/S]	GE=0
[R/S]	PO=

[R/S]	300.15
[R/S]	PP=
[R/S]	0.38
[R/S]	PC=
[R/S]	276.52
[R/S]	PT(MR)=
[R/S]	1,862.54
[R/S]	CHANGE?
0 [R/S]	0.00

note - When program "VERFLT" is executed for this case, the outputs are identical. Examination of subroutine "CF" and subroutine "VC" with $V_f = 0$, explains the reason for the identical results.

Find the forward (straight and level) flight power requirements for the same UH-60 under the original conditions with the only exception being that the vertical velocity, V_v , is now equal to zero.

Keystrokes:

[R/S]
 0 [R/S]
 1 [R/S]
 60 [R/S]
 25.69 [R/S]
 26.835 [R/S]

Display:

VERT ONLY?
 FOR ONLY?
 FOR V=?
 F.P.A.(FF)=?
 R=?
 W=?

18,250 [R/S]	D.A.=
650 [R/S]	PI=
[R/S]	558.69
[R/S]	PI(TL)=
[R/S]	575.18
[R/S]	GE=0
[R/S]	PO=
[R/S]	325.07
[R/S]	PP=
[R/S]	56.68
[R/S]	PT(MR)=
[R/S]	956.93
[R/S]	CHANGE?
0 [R/S]	0.00

note - When program "FORFLT" is executed for this case, the outputs are identical. Examination of subroutine "CF" and subroutine "VC" with $V_v = 0$, explains the reason for the identical results.

Find the hovering flight power requirements for the same UH-60 under the original conditions with the only exceptions being that both the vertical velocity, V_v , and the forward velocity, V_f , are equal to zero.

Keystrokes:

[R/S]

Display:

VERT ONLY?

) [R/S]	FOR ONLY?
) [R/S]	BOTH
[R/S]	VERT V=?
) [R/S]	F.P.A. (VF) =?
08 [R/S]	FOR V=?
) [R/S]	F.P.A. (FF) =?
5.69 [R/S]	R=?
6.835 [R/S]	W=?
.8,250 [R/S]	D.A.=?
50 [R/S]	REC?
. [R/S]	C=?
.73 [R/S]	R=?
6.835 [R/S]	b=?
[R/S]	CdO=?
.008 [R/S]	RV=?
7.02 [R/S]	H=?
00 [R/S]	W=?
.8,250 [R/S]	D.A.=?
50 [R/S]	PI=
R/S]	1,379.98
R/S]	PI (TL) =
R/S]	1,420.73
R/S]	GE=0
R/S]	PO=
R/S]	300.15
R/S]	PP=

[R/S]	0.00
[R/S]	PT(MR)=
[R/S]	1,720.88
[R/S]	CHANGE?
0 [R/S]	0.00

note - When program "HOVER" is executed for this case, the outputs are identical. Examination of subroutine "CF" and subroutine "VC" with $V_f = 0$, and $V_v = 0$, explains the reason for the identical results.

The user of program "FLIGHT" might wonder at this time as to why it is even necessary to have programs "HOVER", "FORFLT", and "VERFLT" when it has now become obvious that program "FLIGHT" will do all three cases. Three reasons exist to substantiate the existence of these other three programs. First, program "FLIGHT" is a long program and, as such, requires 31 more program registers than any of the other three. Second, program "FLIGHT" has a longer running time than any of the other three. Subroutine "VC" alone will take an average of 30 seconds of execution time. And third, program "FLIGHT" involves some double prompting for the same input. The reasons for this were explained in subroutines "DATA and "CF". This procedure optimizes the use of data registers, but also increases the execution time.

Therefore, if the user's only desire is to execute pure hover, or forward flight, or vertical flight computations, then one of these other programs should be used. Both calculator memory space and calculator execution time will be significantly reduced.

5. PROGRAMS & SUBROUTINES USED

"AD"	"DN"	"PI" at label "PJ"	"TL"
"CF"	"ECHORD"	"PO"	"VC"
"CG"	"FLIGHT"	"PP"	"VI"
"CT"	"GE"	"PT"	"VT"
"DATA"	"PC"	"SD"	

6. PROGRAM LISTINGS

PROGRAM

01♦LBL "FLI GHT"	21 /
02 CLRG	22 STO 23
03 "F1"	23 "F.P.A.< VF>=?"
04 ASTO 31	24 PROMPT
05 SF 01	25 STO 24
06 "VERT ON LY?"	26 FS? 01
07 PROMPT	27 GTO 06
08 X>0?	28♦LBL 05
09 GTO 04	29 "FOR V=? "
10 "FOR ONL Y?"	30 PROMPT
11 PROMPT	31 1.68894
12 X>0?	32 *
13 GTO 05	33 STO 25
14 CF 01	34 "F.P.A.< FF>=?"
15 "BOTH"	35 PROMPT
16 PROMPT	36 STO 26
17♦LBL 04	37♦LBL 06
18 "VERT V= ?"	38 CF 01
19 PROMPT	39 XEQ "CF"
20 60	40 XEQ "VC"
	41 XEQ "DAT"

R"
42 ◆LBL "F1"
43 XEQ "AD"
44 XEQ "VT"
45 XEQ "CT"
46 XEQ "TL"
47 RCL 27
48 RCL 10
49 *
50 550
51 /
52 XEQ "PJ"
53 XEQ "SD"
54 XEQ "PO"
55 XEQ "PP"
56 XEQ "PC"
57 XEQ "PT"
58 XEQ "CG"
59 END

TAILROTOR

1. PURPOSE

This main program computes the various tailrotor power requirements in terms of horsepower under all types of flight conditions. The tailrotor program must be executed immediately following the execution of any of the main rotor programs such as "HOVER", "FORFLT", "VERFLT", or "FLIGHT". The tailrotor program recalls and uses much of the information that the previously executed program has put into storage. By doing this, the tailrotor program is shortened. There is no need for regurgitation of input data and calculations for the main rotor, which is the starting point for all tailrotor computations. The various calculated power requirements are displayed as follows:

Display:	Explanation:
PI=	induced power for the tailrotor
PI(TL)=	induced power with tip losses for the tailrotor
PO=	profile power for the tailrotor
PT(TR)=	total power for the tailrotor
PT(MR)=	total power for the main rotor
PT(ACFT)=	total power for the aircraft

2. EQUATIONS

$$P_{i(tr)} = T_{(tr)} \cdot v_{i(tr)} \quad (37)$$

$$T_{(tr)} = \frac{P_{(mr)}/\Omega_{(mr)}}{l_{tr}} \quad (38)$$

$$v_{i_f(tr)} = \left\{ -\frac{V_f^2}{2} + \left[\left(\frac{V_f^2}{2} \right)^2 + \frac{P_f^2}{(2A_{D(tr)} l_{tr} \Omega_{(mr)} \rho)^2} \right]^{1/2} \right\}^{1/2} \quad (39)$$

$$v_{i(tr)} = \frac{P_{h(mr)}}{(2A_{D(tr)} l_{tr} \Omega_{(mr)} \rho)} \quad (40)$$

$$P_{i_f(tr)} = T_{(tr)} \cdot v_{i_f(tr)} \quad (41)$$

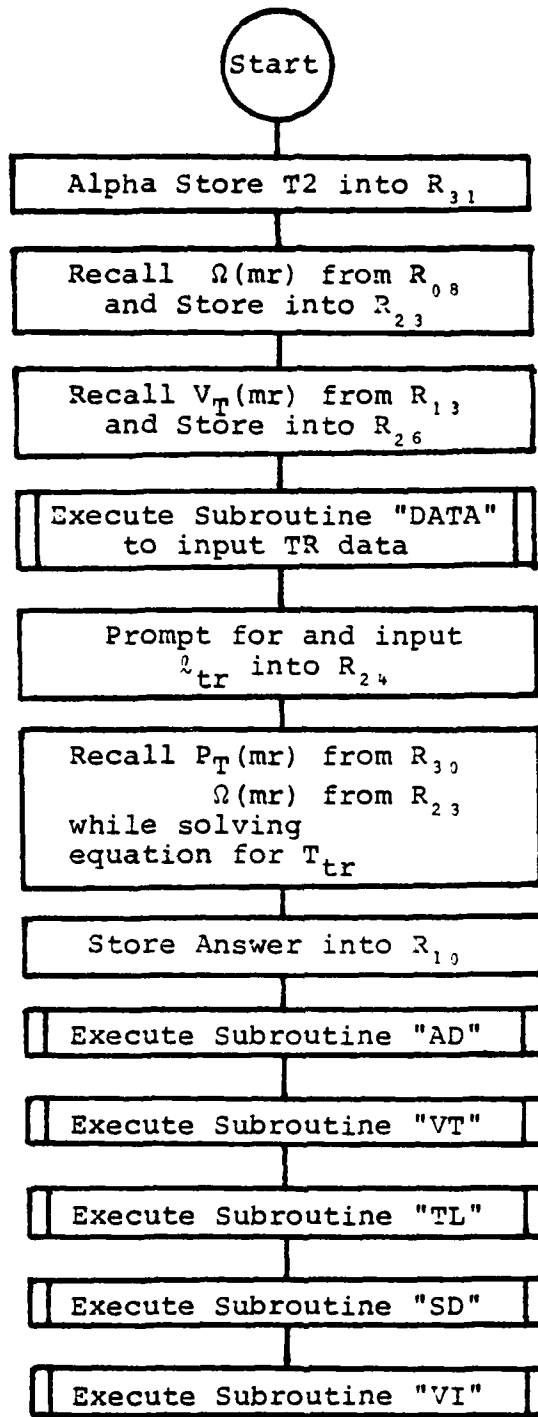
$$P_{o_f(tr)} = \frac{1}{8} \sigma_{(tr)} \bar{C}_{d_o(tr)} \rho A_{D(tr)} V_{T(tr)}^3 \left[1 + 4.3 \left(\frac{V_f}{V_{T(mr)}} \right)^2 \right] \quad (42)$$

where:

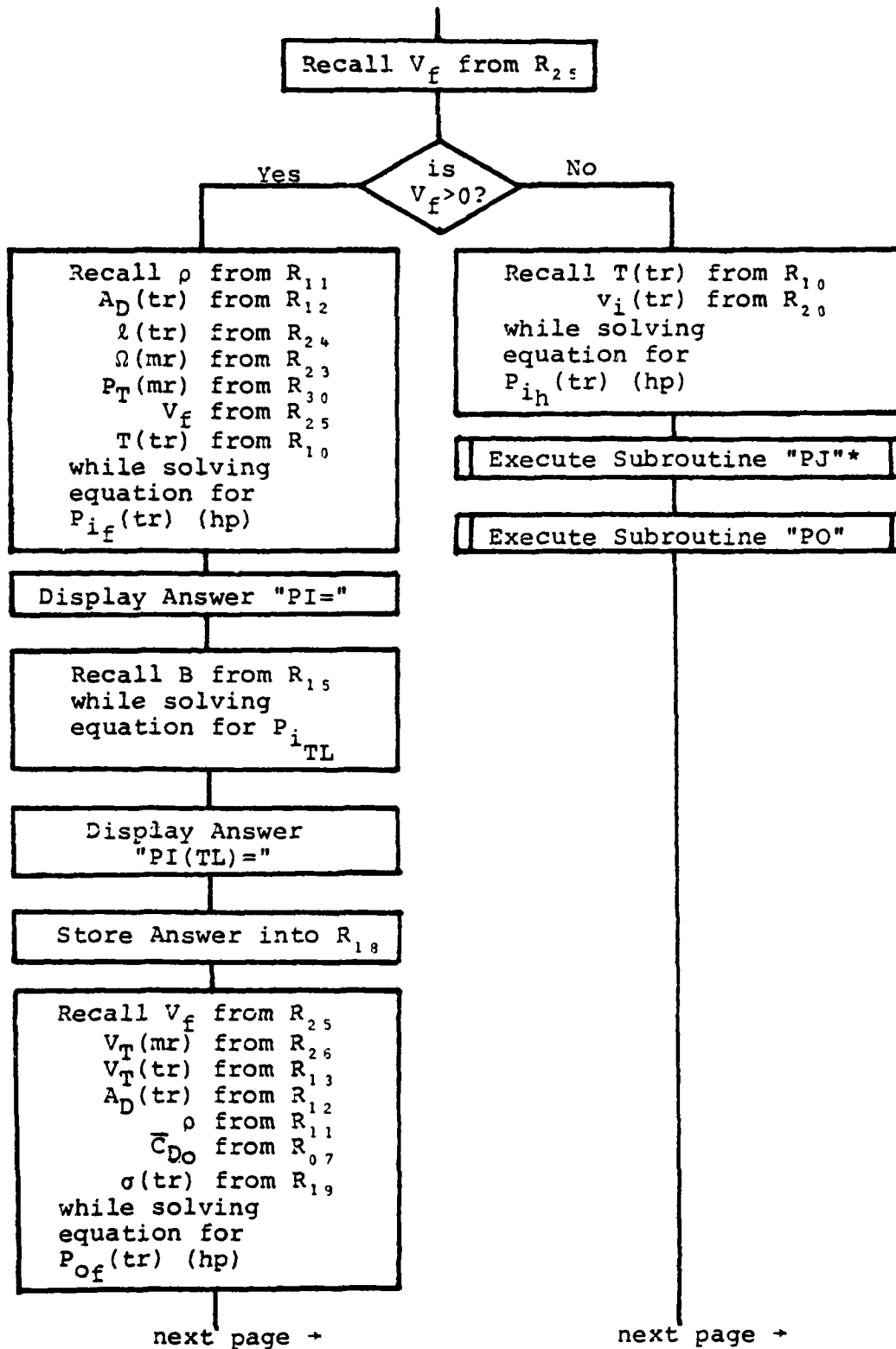
- $v_{i_f(tr)}$ is the induced velocity of the tailrotor in forward flight (ft/sec)
- $P_{i_f(tr)}$ is the induced power required by tailrotor forward flight $\left[\frac{\text{ft-lb}_f}{\text{sec}} \right]$
- $P_{o_f(tr)}$ is the profile power required by the tailrotor in forward flight $\left[\frac{\text{ft-lb}_f}{\text{sec}} \right]$
- $\bar{C}_{d_o(tr)}$ is the average profile drag coefficient of the tailrotor
- $P_{h(mr)}$ is the total power required by the main rotor in hover $\left[\frac{\text{ft-lb}_f}{\text{sec}} \right]$
- $A_{D(tr)}$ is the disc area of the tailrotor (ft²)

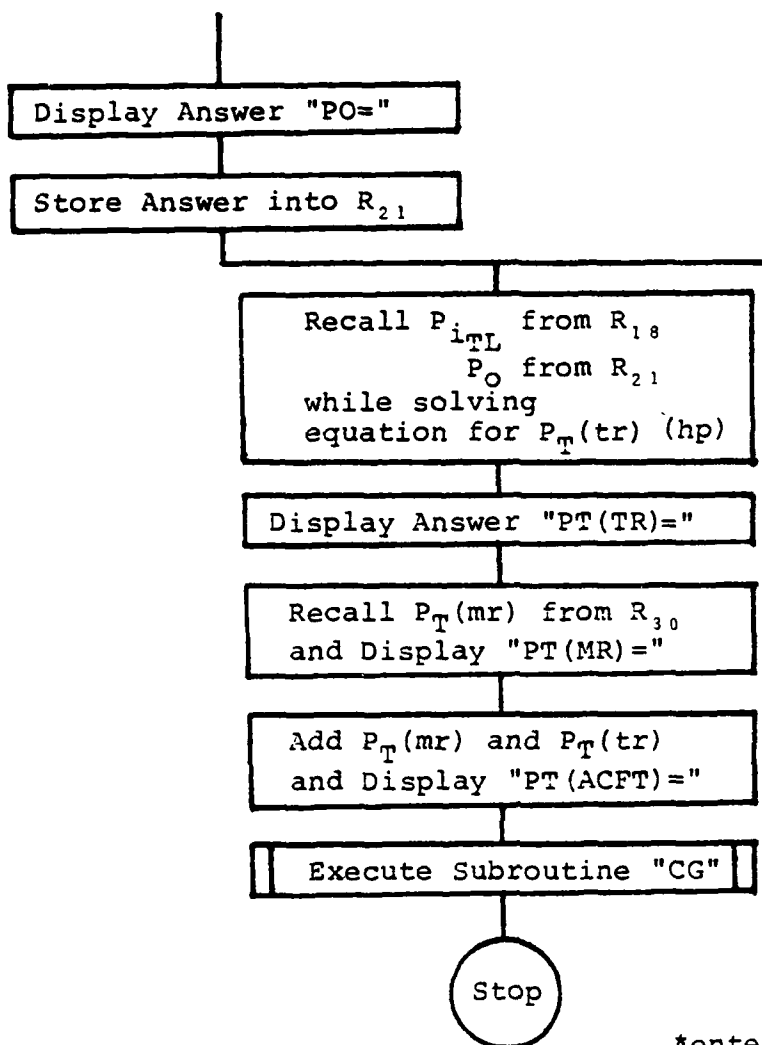
$V_{T(tr)}$ is the tip velocity of the tailrotor (ft/sec)
 $V_{T(mr)}$ is the tip velocity of the main rotor (ft/sec)
 $v_i(tr)$ is the induced velocity of the tailrotor at
a hover (ft/sec)
 $P_i(tr)$ is the induced power required by the tail-
rotor at a hover $\left[\frac{\text{ft-lb}_f}{\text{sec}} \right]$
 $T(tr)$ is the required thrust for the tailrotor (lb_f)
 $\Omega(mr)$ is the rotational velocity of the main rotor
system (radians/sec)
 $\sigma(tr)$ is the solidity of the tailrotor
 $P(mr)$ is the total power required by the main
rotor $\left[\frac{\text{ft-lb}_f}{\text{sec}} \right]$
 l_{tr} is the tail length, the distance from the center
of the main rotor system to the center of the
tailrotor system (ft)
 P_f is the total power required by the main rotor
in forward flight $\left[\frac{\text{ft-lb}_f}{\text{sec}} \right]$
 V_f is the forward velocity of the helicopter (ft/sec)
 ρ is the density of the air $\left[\frac{\text{lb-sec}^2}{\text{ft}^4} \right]$

3. FLOWCHART



next page +





*enters Subroutine "PI"
at Label "PJ"

4. EXAMPLE PROBLEMS AND USER INSTRUCTIONS

Find the tailrotor power requirements for an SH-3H, Sea King, conducting a "LAMPS" mission while hovering above the surface of the ocean under the following flight conditions:

$$W = 18,650 \text{ lbs}$$

$h = 54 \text{ ft}$

$D.A. = 0 \text{ ft}$

$l_{tr} = 36.6 \text{ ft}$

Main Rotor Data:

$C = 1.52 \text{ ft}$

$R = 31 \text{ ft}$

$b = 5$

$\bar{C}_{d_0} = .0095$

$\Omega = 203 \text{ RPM} \rightarrow 21.26 \frac{\text{rads}}{\text{sec}}$

Tail Rotor Data:

$C = 0.61 \text{ ft}$

$R = 5.3 \text{ ft}$

$b = 5$

$\bar{C}_{d_0} = .0105$

$\Omega = 1243 \text{ RPM} \rightarrow 130.16 \frac{\text{rads}}{\text{sec}}$

Keystrokes:

[XEQ] [ALPHA] HOVER [ALPHA]

1 [R/S]

1.52 [R/S]

31 [R/S]

5 [R/S]

.0095 [R/S]

21.26 [R/S]

54 [R/S]

18,650 [R/S]

0 [R/S]

[R/S]

[R/S]

[R/S]

[R/S]

[R/S]

Display:

REC?

C=?

R=?

b=?

Cd0=?

RV=?

H=?

W=?

D.A.=?

PI=

1222.36

PI(TL)=

1249.70

PI(TL+GE)=

1216.90

[R/S]	PO=
[R/S]	346.12
[R/S]	PT(MR)=
[R/S]	1563.02
[R/S]	CHANGE?
0 [R/S]	0.00
[XEQ] [ALPHA] TR [ALPHA]	TR DATA

Subroutine "DATA" is about to be executed. This prompt tells the user that the tail rotor data should now be entered.

[R/S]	REC?
1 [R/S]	C=?
.61 [R/S]	R=?
5.3 [R/S]	b=?
5 [R/S]	CdO=?
.0105 [R/S]	RV=?
130.16 [R/S]	H=?
54 [R/S]	W=?
18,650 [R/S]	D.A.=?
0 [R/S]	L(TAIL) =
36.6 [R/S]	PI=
[R/S]	103.08
[R/S]	PI(TL) =
[R/S]	106.25
[R/S]	GE=0
[R/S]	PO=

[R/S]	30.10
[R/S]	PT(TR) =
[R/S]	136.35
[R/S]	PT(MR) =
[R/S]	1563.02
[R/S]	PT(ACFT) =
[R/S]	1699.37
[R/S]	CHANGE?
1 [R/S]	C RV b R W

It is desired at this point to increase the length of the tail, l_{tr} , from 36.6 to 41.6 feet. To observe what effect this change will have on the tailrotor power requirements flag 04 must be set to return to the main program where it then becomes possible to change l_{tr} . The flowchart for subroutine "CG" depicts this process. In order to initiate this procedure, pick a variable and input its original value. In this example, b is used:

[\sqrt{x}]	b=?
5 [R/S]	CHANGE?
0 [R/S]	L(TAIL)=?
41.6 [R/S]	PI =
[R/S]	85.07
[R/S]	PI(TL) =
[R/S]	87.51
[R/S]	GE=0
[R/S]	PO =

[R/S]	30.10
[R/S]	PT(TR) =
[R/S]	117.61
[R/S]	PT(MR) =
[R/S]	1563.02
[R/S]	PT(ACFT) =
[R/S]	1680.63
[R/S]	CHANGE?
0 [R/S]	0.00

The same SH-3H is now returning to ship with $V_f = 100$ kts, $h = 500$ ft, and $f_f = 31.27$ ft². Find the tailrotor power required.

Keystrokes:

[XEQ] [ALPHA] FORFLT [ALPHA]
 100 [R/S]
 31.27 [R/S]
 1 [R/S]
 1.52 [R/S]
 31 [R/S]
 5 [R/S]
 .0095 [R/S]
 21.26 [R/S]
 500 [R/S]
 18,650 [R/S]
 0 [R/S]

Display:

FOR V=?
 F.P.A.(FF)=?
 REC?
 C=?
 R=?
 b=?
 CdO=?
 RV=?
 H=?
 W=?
 D.A.=?
 PI=

V/S]	260.63
V/S]	PI (TL) =
V/S]	266.46
V/S]	GE=0
V/S]	PO=
V/S]	442.73
V/S]	PP=
V/S]	325.53
V/S]	PT (MR) =
V/S]	1034.71
V/S]	CHANGE?
[R/S]	0.00
EQ] [ALPHA] TR [ALPHA]	TR DATA
V/S]	REC?
[R/S]	C=?
1 [R/S]	R=?
3 [R/S]	b=?
[R/S]	CdO=?
105 [R/S]	RV=?
0.16 [R/S]	H=?
0 [R/S]	W=?
1,650 [R/S]	D.A.=?
0 [R/S]	L (TAIL) =?
.6 [R/S]	PI =
V/S]	13.90
V/S]	PI (TL) =

[R/S]	14.25
[R/S]	PO=
[R/S]	37.31
[R/S]	PT(TR)=
[R/S]	51.56
[R/S]	PT(MR)=
[R/S]	1034.71
[R/S]	PT(ACFT)=
[R/S]	1086.27
[R/S]	CHANGE?
0 [R/S]	0.00

note - the CHANGE? process can be executed as many times as the user may desire, but the whole of program "TR" can only be executed once. By examining the flowchart for this program, it can be seen that several main rotor data elements are moved about in the storage registers. This is done to conserve program memory. Therefore, it becomes necessary to go back and execute one of the other main rotor programs before again attempting to execute program "TR" in its entirety.

5. PROGRAMS & SUBROUTINES USED

"AD"	"ECHORD"	"TL"
"CG"	"GE"	"TR"
"CT"	"PI" at label "PJ"	"VI"
"DATA"	"PO"	"VT"
"DN"	"SD"	

6. PROGRAM LISTINGS

PROGRAM

```

01♦LBL "TR"
02 "T2"
03 ASTO 31
04 RCL 08
05 STO 23
06 RCL 13
07 STO 26
08 "TR DATA
"
09 PROMPT
10 XEQ "DAT
A"
11 1000
12 STO 09
13♦LBL "T2"
14 "L<TAIL>
=?"
15 PROMPT
16 STO 24
17 RCL 30
18 550
19 *
20 RCL 23
21 /
22 RCL 24
23 /
24 STO 10
25 XEQ "AD"
26 XEQ "VT"
27 XEQ "CT"
28 XEQ "TL"
29 XEQ "SD"
30 XEQ "VI"
31 RCL 25
32 X>0?
33 GTO 01
34 RCL 10
35 RCL 20
36 *
37 550
38 /
39 XEQ "PJ"
40 XEQ "PO"
41 GTO 02
42♦LBL 01
43 RCL 11
44 2
45 *
46 RCL 12
47 *
48 RCL 24
49 *
50 RCL 23
51 *
52 X↑2
53 1/X
54 RCL 30
55 550
56 *
57 X↑2
58 *
59 RCL 25
60 X↑2
61 2
62 /
63 STO 00
64 X↑2
65 +
66 SQRT
67 RCL 00
68 -
69 SQRT
70 RCL 10
71 *
72 550
73 /
74 "PI="
75 PROMPT
76 VIEW X
77 STOP
78 RCL 15
79 /
80 "PI<TL>="
"
81 PROMPT
82 VIEW X
83 STOP
84 STO 18
85 RCL 25
86 RCL 26
87 /
88 X↑2
89 RCL 26
90 X↑2

```

```

91 *
92 4.3
93 *
94 RCL 13
95 X↑2
96 /
97 1
98 +
99 RCL 13
100 3
101 Y↑X
102 RCL 12
103 *
104 RCL 11
105 *
106 RCL 07
107 *
108 RCL 19
109 *
110 4400
111 /
112 *
113 "PO="
114 PROMPT
115 VIEW X
116 STOP
117 STO 21
118 LBL 02
119 RCL 18
120 RCL 21
121 +
122 "PT<TR>="
"
123 PROMPT
124 VIEW X
125 STOP
126 RCL 30
127 "PT<MR>="
"
128 PROMPT
129 VIEW X
130 STOP
131 +
132 "PT<ACFT
>="
133 PROMPT
134 VIEW X
135 STOP
136 XEQ "CG"
137 END

```

AUTOROTATION

1. PURPOSE

This main program computes several values for a single rotor helicopter in vertical and forward flight autorotation. The computed values are displayed as follows:

Display:	Explanation:
VV=	vertical velocity in a vertical autorotation (ft/min)
VF(MIN.R.O.D.)=	forward autorotative flight velocity for minimum autorotative rate of descent (kts)
VV(MIN.R.O.D.)=	vertical autorotative velocity (ft/min) at the forward autorotative flight velocity for minimum autorotative rate of descent
d(HOR.GLIDE)=	horizontal distance travelled on the ground at the forward autorotative flight velocity for minimum rate of descent (ft)

2. EQUATIONS

$$\bar{C}_L = (3K_2/K_1)^{1/2} \quad (43)$$

$$\bar{C}_d = K_1 \bar{C}_L^2 + K_2 \quad (44)$$

$$\bar{F} = \frac{(C_L^3/C_d^2) \cdot \sigma}{4} \quad (45)$$

$$V_v = \left[\frac{W}{2 \cdot \rho \cdot A_D \cdot \bar{F}} \right]^{1/2} \quad (46)$$

$$\bar{F} = \frac{\bar{F}}{(1 + \bar{F})^2} \quad (0 < \bar{F} < 1) \text{ Momentum Theory} \quad (47)$$

$$\bar{F} = \frac{(2\bar{F} - \sqrt{3\bar{F}})}{(4\bar{F} - 3)} \quad (\bar{F} > 1) \text{ Glauert Equation} \quad (48)$$

$$V_{f(\text{min ROD})} = 0.00867 \cdot R \cdot \text{RPM} \quad (49)$$

$$V_{v(\text{min ROD})} = 0.251 \cdot R \cdot \text{RPM} \quad (50)$$

$$d_{(\text{hor glide})} = \frac{h}{\tan \gamma} \quad (51)$$

$$\gamma = \arcsin \frac{V_v}{V_f} \approx 16.6^\circ \quad (52)$$

where:

\bar{C}_L is the average coefficient of lift

\bar{C}_D is the average coefficient of drag

K_1 is a real number coefficient called the lift coefficient multiplier in drag coefficient terms

K_2 is a real number coefficient equal to C_{d_0}

V_v is the vertical velocity in a vertical autorotation (ft/min)

A_D is the area of the rotor disc (ft²)

σ is the solidity of the main rotor system

ρ is the density of the air $\left[\frac{\text{lb-sec}^2}{\text{ft}^4} \right]$

h is the height of the rotor system above the ground (ft)

$V_{f(\text{min ROD})}$ is the forward autorotative flight velocity for minimum autorotative rate of descent (kts)

$V_{v(\text{min ROD})}$ is the vertical autorotative velocity (ft/min) at the forward autorotative flight velocity for minimum autorotative rate of descent

$d_{(\text{hor glide})}$ is the horizontal distance travelled on the ground (ft) at the forward autorotative flight velocity for minimum rate of descent

RPM is the rotational velocity of the main rotor system in revolutions/minute

\bar{F} is a non-dimensional coefficient

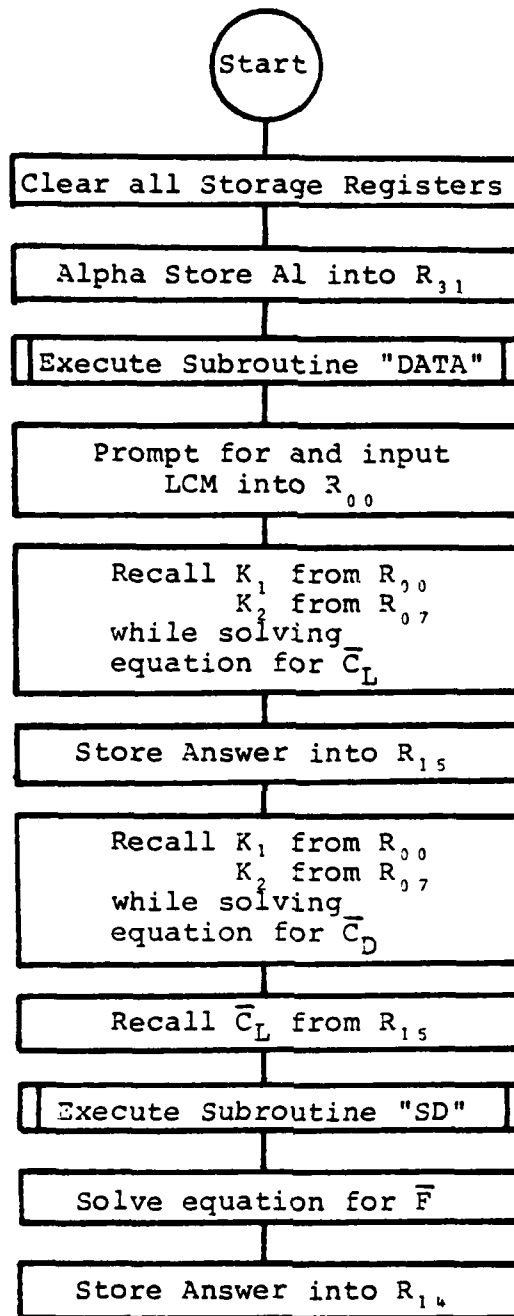
\bar{f} is a non-dimensional coefficient

W is the weight of the helicopter (lbs)

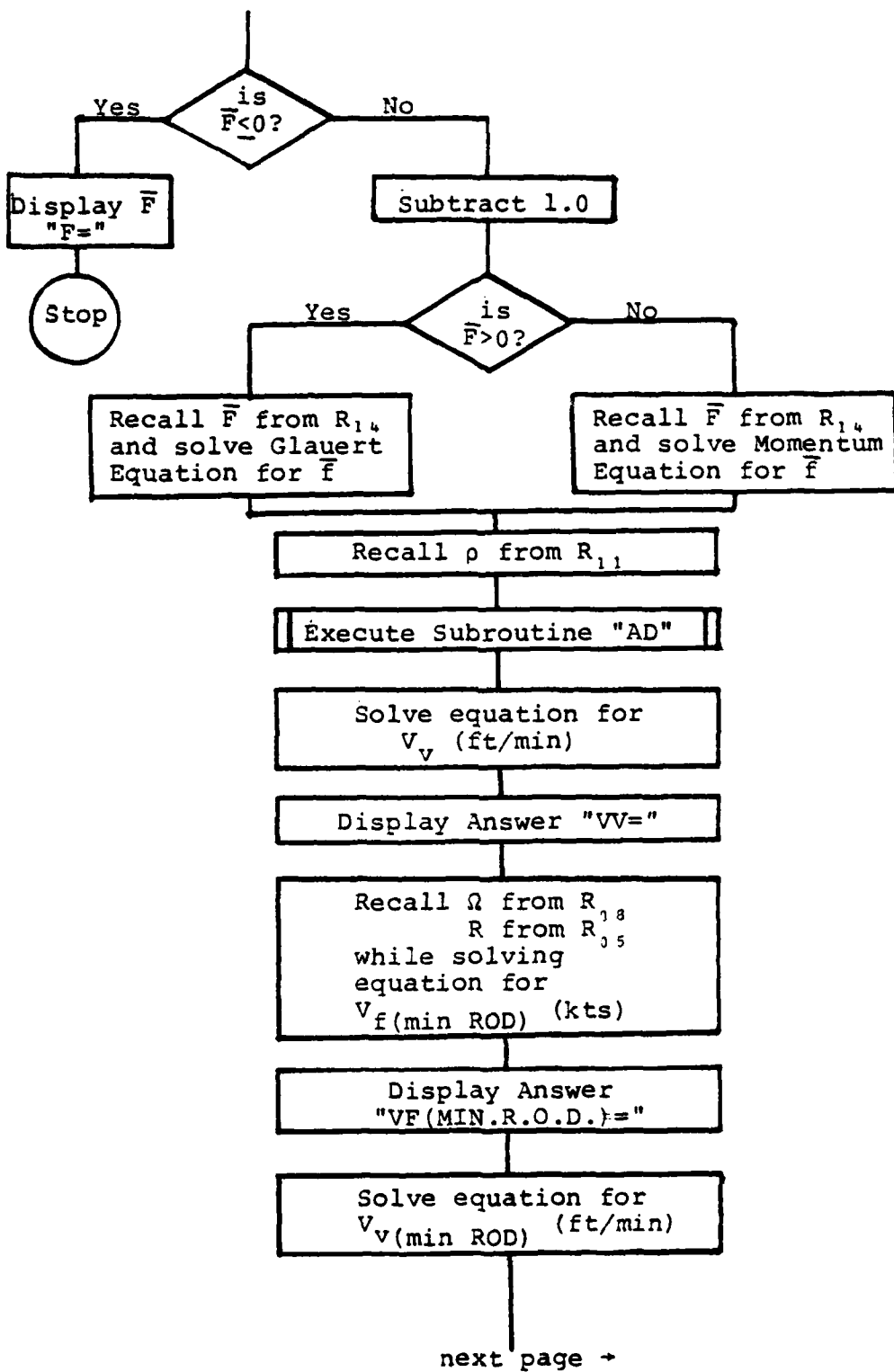
R is the radius of the rotor system (ft)

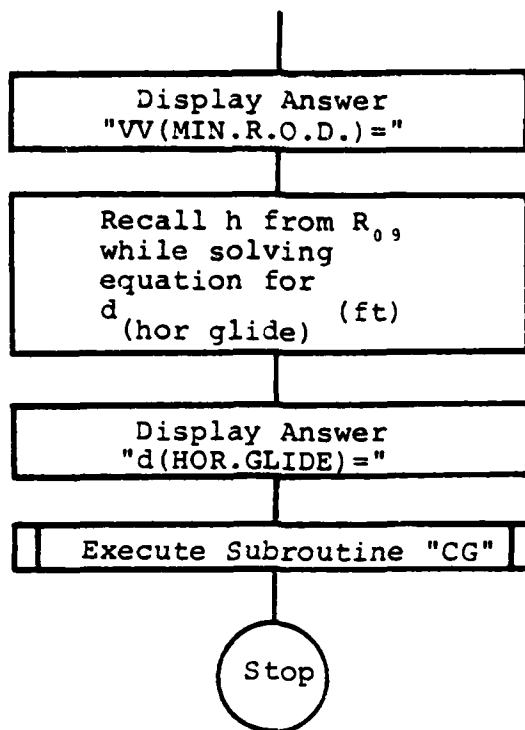
γ is the descent angle for minimum descent rate (degrees)

3. FLOW CHART



next page →





4. EXAMPLE PROBLEMS AND USER INSTRUCTIONS

note - if the display "F=" should appear, an error has been made in either the design or the input data itself. This will only occur when $\bar{F} < 0$. Neither this program nor the theory used will be able to calculate results for this situation.

For a UH-1H, Iroquois, with the following characteristics:

W = 8,200 lbs

NACA 0012 Main Rotor Blade:

h = 1,500 ft

R = 24 ft

b = 2

C = 1.75 ft

D.A. = 1,500 ft

$C_d = .0098 + .0120C_L^2$

$$\Omega = 324 \text{ RPM} \rightarrow 33.927 \text{ radians/sec}$$

find the rate of descent in a vertical autorotation, V_v ; the forward flight autorotative velocity for minimum rate of descent, $V_{f(\text{min ROD})}$; the vertical velocity for the minimum rate of descent, $V_{v(\text{min ROD})}$; and the horizontal glide distance travelled during the autorotation, $d_{(\text{hor glide})}$.

Keystrokes:

Display:

[XEQ] [ALPHA] AUTO [ALPHA]

REC?

1 [R/S]

C=?

1.75 [R/S]

R=?

24 [R/S]

b=?

2 [R/S]

CdO=?

.0098 [R/S]

RV=?

33.927 [R/S]

H=?

1,500 [R/S]

W=?

8,200 [R/S]

D.A.=?

1,500 [R/S]

LCM=?

.012 [R/S]

VV=

[R/S]

2885.69

[R/S]

VF(MIN.R.O.D.)=

[R/S]

67.92

[R/S]

VV(MIN.R.O.D.)=

[R/S]

2043.85

[R/S]

d(HOR.GLIDE)=

[R/S]

5031.70

[R/S]

CHANGE?

It is now desired to increase the weight from 8,200 to 9,500 lbs:

1 [R/S]	C RV b R W
[LN]	W=?
9,500 [R/S]	CHANGE?
0 [R/S]	VV=?
[R/S]	3106.02
[R/S]	VF(MIN.R.O.D.)=
[R/S]	67.42
[R/S]	VV(MIN.R.O.D.)=
[R/S]	2043.85
[R/S]	d(HOR.GLIDE)=
[R/S]	5031.70
[R/S]	CHANGE?

It is now desired to decrease the rotor rotational velocity from 33.927 to 32.88 radians/second. This is 314 RPM.

1 [R/S]	C RV b R W
[1/x]	RV=?
32.88 [R/S]	CHANGE?
0 [R/S]	VV=
[R/S]	3106.02
[R/S]	VF(MIN.R.O.D.)=
[R/S]	65.34
[R/S]	VV(MIN.R.O.D.)=
[R/S]	1980.77
[R/S]	d(HOR.GLIDE)=

[R/S]	5031.70
[R/S]	CHANGE?
0 [R/S]	0.00

note - A reduced rate of descent during a forward flight autorotation can be achieved by attaining as low a rotor speed as possible without exceeding published limits (stall). Below a certain rotational velocity, rate of descent increases again, and the higher the weight, the higher the RPM at which this reversal occurs. [Ref. 6] Also, the forward speed for minimum descent rate is not the same forward speed for maximum glide distance. The forward speed for maximum glide distance will be higher than the forward speed for minimum descent rate. This "stretching the glide" not only results in a longer horizontal glide distance, but also results in an increased rate of descent. [Ref. 6]

5. PROGRAMS & SUBROUTINES USED

"AUTO"	"DN"
"AD"	"ECHORD"
"CG"	"SD"
"DATA"	

6. PROGRAM LISTINGS

PROGRAM	
01♦LBL "AUT	A"
0"	06 "LCM=?"
02 CLRG	07 PROMPT
03 "A1"	08 STO 00
04 ASTO 31	09♦LBL "A1"
05 XEQ "DAT	10 RCL 00

```

11 1/X
12 3
13 *
14 RCL 07
15 *
16 SQRT
17 STO 15
18 X↑2
19 RCL 00
20 *
21 RCL 07
22 +
23 X↑2
24 1/X
25 RCL 15
26 3
27 Y↑X
28 *
29 XEQ "SD"
30 *
31 4
32 /
33 STO 14
34 X<=0?
35 GTO 01
36 1
37 -
38 X>0?
39 GTO 02
40 2
41 +
42 X↑2
43 1/X
44 RCL 14
45 *
46 GTO 03
47♦LBL 02
48 RCL 14
49 3
50 *
51 SQRT
52 CHS
53 RCL 14
54 2
55 *
56 +
57 RCL 14
58 4
59 *
60 3
61 -
62 /

```

```

63♦LBL 03
64 RCL 11
65 *
66 XEQ "AD"
67 *
68 2
69 *
70 1/X
71 RCL 10
72 *
73 SQRT
74 60
75 *
76 "VV="
77 PROMPT
78 VIEW X
79 STOP
80 RCL 08
81 RCL 05
82 *
83 .0827985
84 *
85 "VF<MIN.
R.O.D.>="
86 PROMPT
87 VIEW X
88 STOP
89 30.3158
90 *
91 "VV<MIN.
R.O.D.>="
92 PROMPT
93 VIEW X
94 STOP
95 RCL 09
96 .29811
97 /
98 "d<HOR.G
LIDE>="
99 PROMPT
100 VIEW X
101 STOP
102 XEQ "CG"
103 GTO 04
104♦LBL 01
105 "F="
106 ARCL X
107 RVIEW
108♦LBL 04
109 END

```

TANDEM

PURPOSE

This main program computes the various power requirements of horsepower for a tandem rotor aircraft in either hovering flight or forward (straight and level) flight. The various calculated power requirements are displayed as follows:

Display:	Explanation:
(TL)=	induced power with tip losses
(TL+GE)=	induced power with tip losses plus ground effect
P _o =	profile power for a single rotor system
P _o (TDM)=	profile power for the tandem rotor system
P _T (TDM)=	total power for the tandem rotor system

EQUATIONS

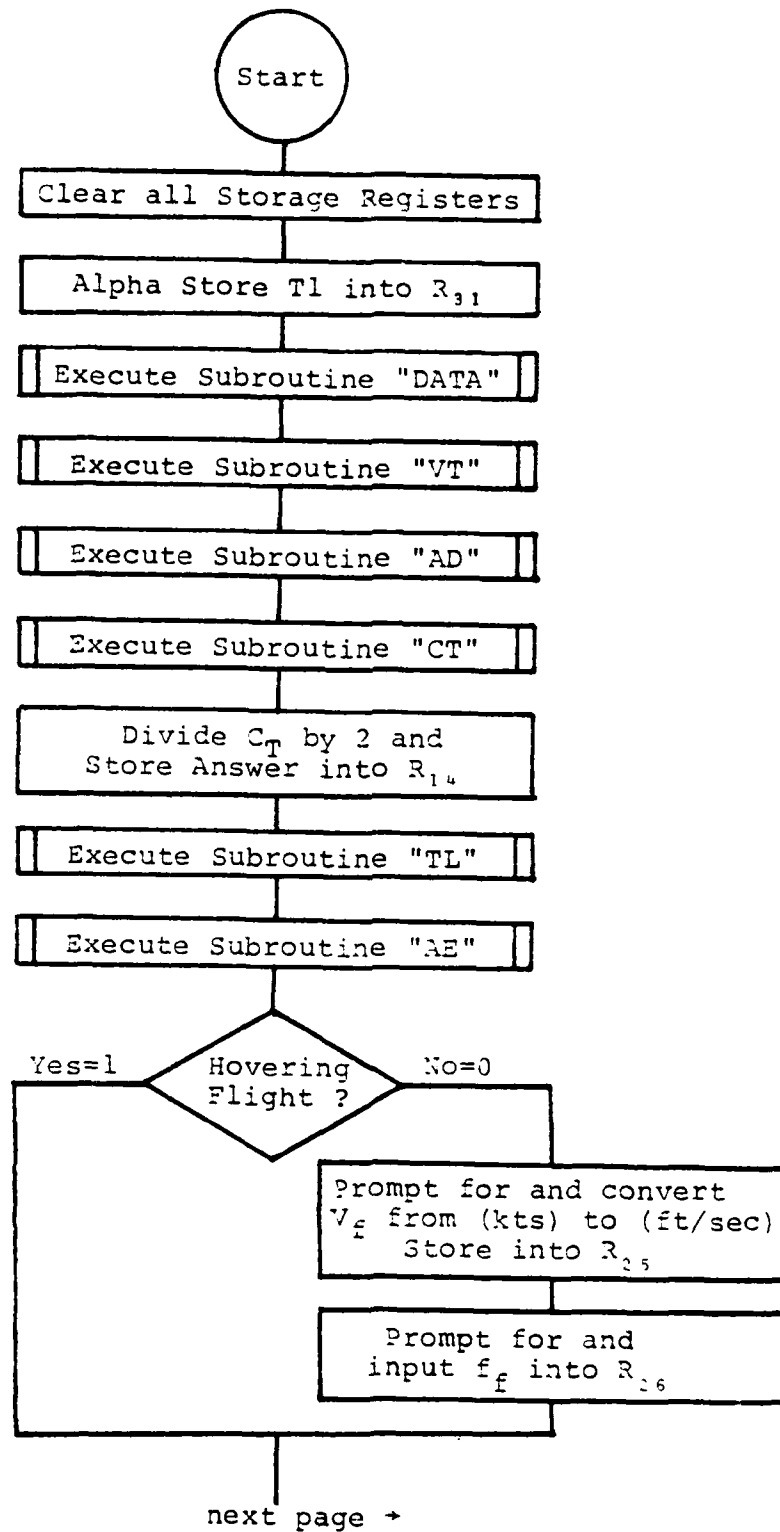
$$P_T = P_i + P_o + P_p \quad (20)$$

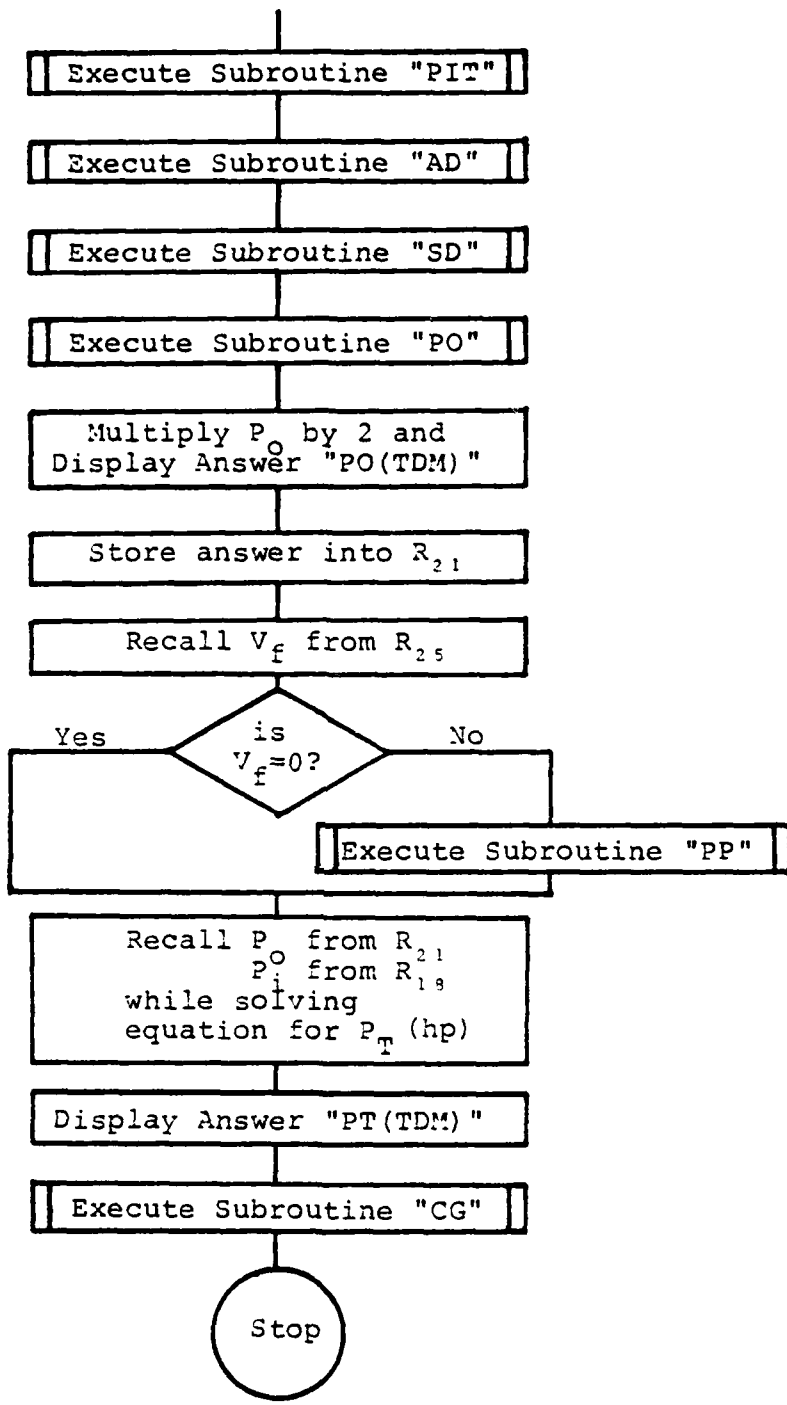
where:

P_T is the total power required
 P_i is the induced power required
 P_o is the profile power required
 P_p is the parasite power required

No other equations are found in the program. Consult the subroutine listings for the various equations used.

3. FLOWCHART





4. EXAMPLE PROBLEMS AND USER INSTRUCTIONS

Find the hover power requirements for a CH-47D, Chinook,
under the following conditions:

C = 2.667 ft	$\Omega = 225 \text{ RPM} + 23.56 \text{ rads/sec}$
R = 30.0 ft	$\bar{C}_{d_0} = .008$
b = 3	h = 35 ft
W = 45,000 lbs	D.A. = 1,500 ft
d = 38.917 ft	

Keystrokes:

Display:

[XEQ] [ALPHA] TANDEM [ALPHA]

REC?

(Rectangular Blade? 1 is Yes, 0 is No)

1 [R/S]

C=?

2.667 [R/S]

R=?

30 [R/S]

b=?

3 [R/S]

Cd0=?

.008 [R/S]

RV=?

23.56 [R/S]

H=?

35 [R/S]

W=?

45,000 [R/S]

D.A.=?

1,500 [R/S]

d=?

38.917 [R/S]

HOVER?

(Execute Hovering Flight Only? 1 is Yes, 0 is No)

1 [R/S]

PI(TL)=

[R/S]

4,263.48

[R/S]

PI(TL+GE)=

[R/S]	3,957.54
[R/S]	PO=
[R/S]	350.46
[R/S]	PO(TDM)=
[R/S]	700.93
[R/S]	PT(TDM)=
[R/S]	4,658.47
[R/S]	CHANGE?

(Change Data? 1 is Yes, 0 is No)

1 [R/S]	C RV b R W
---------	------------

It is desired at this point to increase the number of rotor blades per rotor system from 3 to 4. To observe what effect this change will have on the hover power requirements, press the key on the calculator keyboard directly beneath the variable in need of change. In this case the $[\sqrt{x}]$ key is directly beneath the b in the display:

$[\sqrt{x}]$	b=?
--------------	-----

4 [R/S]	CHANGE?
---------	---------

(Any Further Changes? 1 is Yes, 0 is No)

0 [R/S]	d=?
---------	-----

The calculator has returned to the top of the main program and now presents the opportunity to change the distance between the rotor shafts, d. In this example, d remains the same:

38.917 [R/S]	HOVER?
--------------	--------

1 [R/S]	PI(TL) =
[R/S]	4,227.80
[R/S]	PI(TL+GE) =
[R/S]	3,924.43
[R/S]	PO =
[R/S]	467.28
[R/S]	PO(TDM) =
[R/S]	934.57
[R/S]	PT(TDM) =
[R/S]	4,859.00
[R/S]	CHANGE?
0 [R/S]	0.00

Find the forward flight (straight and level) power requirements for a CH-46E, Sea Knight, under the following flight conditions:

$C = 1.5625 \text{ ft}$	$\Omega = 264 \text{ RPM} \rightarrow 27.64 \text{ rads/sec}$
$R = 25.5 \text{ ft}$	$\bar{C}_{d0} = .009$
$b = 3$	$D.A. = 2,000 \text{ ft}$
$W = 22,000 \text{ lbs}$	$V_f = 100 \text{ kts}$
$d = 33.33 \text{ ft}$	$f_f = 44.3 \text{ ft}^2$
$h = 2,000 \text{ ft}$	

Keystrokes:

[R/S]
 1 [R/S]
 1.5625 [R/S]

Display:

REC?
 C=?
 R=?

25.5 [R/S]	b=?
3 [R/S]	CdO=?
.009 [R/S]	RV=?
27.64 [R/S]	H=?
2,000 [R/S]	W=?
22,000 [R/S]	D.A.=?
2,000 [R/S]	d=?
33.33 [R/S]	HOVER?
0 [R/S]	FOR V=?
100 [R/S]	F.P.A. (FF) =?
44.3 [R/S]	PI (TL) =
[R/S]	3,235.14
[R/S]	GE=0
[R/S]	PO=
[R/S]	238.65
[R/S]	PO (TDM) =
[R/S]	477.30
[R/S]	PP=
[R/S]	434.78
[R/S]	PT (TDM) =
[R/S]	4,147.22
[R/S]	CHANGE?
1 [R/S]	C RV b R W

It is desired at this point to decrease the forward flight velocity, V_f , from 100 to 50 knots. To observe what effect

this change will have on the forward flight power requirements flag 04 must be set to return to the main program where it then becomes possible to change V_f . The flow-chart for subroutine "CG" depicts this process. In order to initiate this procedure, pick a variable and input its original value. In this example, W is used:

[LN]	W=?
22,000 [R/S]	CHANGE?
0 [R/S]	d=?
33.33 [R/S]	HOVER?
0 [R/S]	FOR V=?
50 [R/S]	F.P.A. (FF) =?
44.3 [R/S]	PI (TL) =
[R/S]	3,085.23
[R/S]	GE=0
[R/S]	PO=
[R/S]	203.54
[R/S]	PO (TDM) =
[R/S]	407.08
[R/S]	PP=
[R/S]	54.35
[R/S]	PT (TDM) =
[R/S]	3,546.66
[R/S]	CHANGE?
0 [R/S]	0.00

5. PROGRAMS & SUBROUTINES USED

"AD"	"ECHORD"	"SD"
"AE"	"GE"	"TANDEM"
"CG"	"PI" at label "TJ"	"TL"
"CT"	"PIT"	"VT"
"DATA"	"PO"	
"DN"	"PP"	

6. PROGRAM LISTINGS

PROGRAM	
01♦LBL "TAN	27♦LBL 02
DEM"	28 XEQ "PIT
02 CLRG	"
03 "T1"	29 XEQ "AD"
04 ASTO 31	30 XEQ "SD"
05 XEQ "DAT	31 XEQ "PO"
A"	32 2
06♦LBL "T1"	33 *
07 XEQ "VT"	34 "PO<TDM>
08 XEQ "AD"	"
09 XEQ "CT"	35 PROMPT
10 2	36 VIEW X
11 /	37 STOP
12 STO 14	38 STO 21
13 XEQ "TL"	39 RCL 25
14 XEQ "AE"	40 X=0?
15 "HOVER?"	41 GTO 03
16 PROMPT	42 XEQ "PP"
17 X>0?	43♦LBL 03
18 GTO 02	44 RCL 21
19 "FOR V=?"	45 +
"	46 RCL 18
20 PROMPT	47 +
21 1.68894	48 "PT<TDM>
22 *	"
23 STO 25	49 PROMPT
24 "F.P.A.<	50 VIEW X
FF>=?"	51 STOP
25 PROMPT	52 XEQ "CG"
26 STO 26	53 END

CHECKS

1. PURPOSE

This program performs a short series of checks on several important parameters. It is executed immediately following the execution of one of the main programs. This program recalls and uses data that the previously executed program has put into storage. The various parameters that are checked are displayed as follows:

Display:	Explanation:
SOLID=	the solidity of the rotor system
U=	the advance ratio
M(TIP)=	the Mach Number at the tip of the advancing rotor blade
D.L.=	the disc loading of the rotor system

2. EQUATIONS

$$a = \sqrt{\gamma \cdot g_c \cdot R \cdot T(^{\circ}R)} \quad (53)$$

$$T(^{\circ}K) = T(^{\circ}C) + 273.16 \quad (54)$$

$$T(^{\circ}R) = T(^{\circ}K) \div 0.5555 \quad (55)$$

$$M_T = \frac{V_f + V_T}{a} \quad (56)$$

$$\mu = \frac{V_f}{V_T} \quad (57)$$

$$\text{DISC LOADING} = \frac{W}{A_D} \quad (58)$$

where:

$T(^{\circ}\text{C})$ is the temperature in degrees centigrade

$T(^{\circ}\text{K})$ is the temperature in degrees kelvin

$T(^{\circ}\text{R})$ is the temperature in degrees rankine

g_c is the gravitational constant $\left[32.174 \frac{\text{lb}_m\text{-ft}}{\text{lb}_f\text{-sec}^2} \right]$

A_D is the rotor disc area (ft^2)

M_T is the Mach Number at the tip of the advancing rotor blade

V_f is the forward velocity of the helicopter (ft/sec)

V_T is the tip speed of the rotor blade (ft/sec)

R is the gas constant for air $\left[53.3 \frac{\text{ft}\text{-lb}_f}{\text{lb}_m\text{-}^{\circ}\text{R}} \right]$

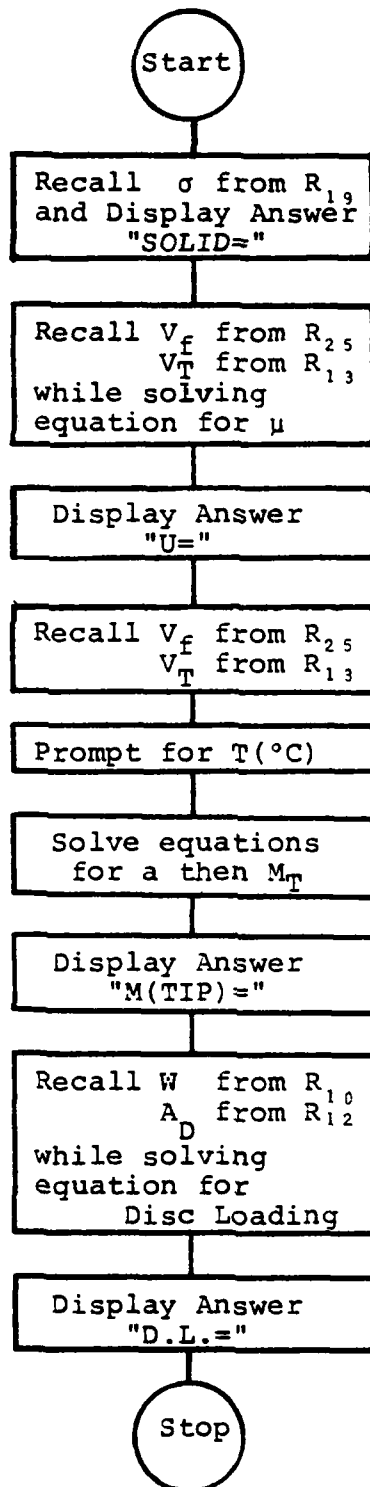
W is the weight (lbs)

μ is the advance ratio

a is the sonic velocity (ft/sec)

γ is the ratio of specific heats (1.4 for air)

3. FLOWCHART



4. EXAMPLE PROBLEMS AND USER INSTRUCTIONS

Execute program "FORFLT" for the CH-53E under the following characteristics and flight conditions:

C = 2.44 ft	$\Omega = 179 \text{ RPM} \rightarrow 18.743 \text{ rads/sec}$
R = 39.5 ft	$V_f = 140 \text{ kts}$
b = 7	$f_f = 63.57 \text{ ft}^2$
h = 1000 ft	$\bar{C}_{d0} = .009$
W = 70,000 lbs	D.A. = 1000 ft

Keystrokes:

[XEQ] [ALPHA] FORFLT [ALPHA]
140 [R/S]
63.57 [R/S]
1 [R/S]
2.44 [R/S]
39.5 [R/S]
7 [R/S]
.009 [R/S]
18.743 [R/S]
1000 [R/S]
70,000 [R/S]
1000 [R/S]
[R/S]
[R/S]
[R/S]
[R/S]

Display:

FOR V=?
F.P.A.(FF)=?
REC?
C=?
R=?
b=?
Cd0=?
RV=?
H=?
W=?
D.A.=?
PI=
1662.62
PI(TL)=
1699.10
GE=0

[R/S]	PO=
[R/S]	1852.87
[R/S]	PP=
[R/S]	1763.38
[R/S]	PT(MR)=
[R/S]	5315.35
[R/S]	CHANGE?
0 [R/S]	0.00

Now, execute program "CHECKS" in order to make a quick check on σ , μ , M_T , and Disc Loading. The temperature is 13° C

Keystrokes:

Display:

[XEQ] [ALPHA] CHECKS [ALPHA]	SOLID=0.1376
[R/S]	U=0.3194
[R/S]	T=?
13 [R/S]	M(TIP)=0.8783
[R/S]	D.L.=14.2808

It is important to note here that the blade loading is above 10 lbs/ft². This generates high induced velocities, which in turn can make operations in unimproved sites hazardous due to flying debris. Also, it becomes increasingly difficult to obtain safe autorotational characteristics at these higher disc loadings. [Ref. 7]

The tip Mach Number is above 0.85. This means that the advancing rotor blade is entering the transonic flow region and shock wave formation will lead to wave drag.

Blade stall effects on the retreating rotor blade have started prior to this. Therefore the actual horsepower required in forward flight will be somewhat higher due to the effects of compressibility and blade stall. [Ref. 3]

5. PROGRAMS & SUBROUTINES USED

"CHECKS"

6. PROGRAM LISTINGS

```
PROGRAM
01♦LBL "CHECKS"
02 FIX 4
03 RCL 19
04 "SOLID="
05 ARCL X
06 AVIEW
07 STOP
08 RCL 25
09 RCL 13
10 /
11 "U="
12 ARCL X
13 AVIEW
14 STOP
15 RCL 25
16 RCL 13
17 +
18 "T=?"
19 PROMPT
20 273.16
21 +
22 .5555
23 /
24 2400.824
25 *
26 SQRT
27 /
28 "M<TIP>="
29 ARCL X
30 AVIEW
31 STOP
32 RCL 10
33 RCL 12
34 /
35 "D.L.="
36 ARCL X
37 AVIEW
38 END
```

LIST OF REFERENCES

1. Layton, Donald M., Aircraft Performance, Matrix Publishers, Inc., 1982.
2. NACA Report 1235, Standard Atmosphere - Tables and Data For Altitudes To 65,800 feet, 1955.
3. McCormick, Barnes W. Jr., Aerodynamics of V/STOL Flight, Academic Press Inc., 1967.
4. The HP-41C/41CV Alphanumeric Full Performance Programmable Calculator Owner's Handbook and Programming Guide, Hewlett-Packard Company, 1982.
5. User's Library Catalog of Contributed Programs for the HP-41, HP-67, and HP-97, p. 4-46, Hewlett-Packard Company, 1982.
6. Saunders, George H., Dynamics of Helicopter Flight, John Wiley & Sons, Inc., 1975.
7. Prouty, R.W., Practical Helicopter Aerodynamics, PJS Publications, Inc., 1982.

INITIAL DISTRIBUTION LIST

	<u>No. Copies</u>
1. Defense Technical Information Center Cameron Station Alexandria, Virginia 22314	2
2. Library, Code 0142 Naval Postgraduate School Monterey, California 93940	2
3. Department Chairman, Code 67 Department of Aeronautics Naval Postgraduate School Monterey, California 93940	1
4. Professor Donald M. Layton, Code 67Ln Department of Aeronautics Naval Postgraduate School Monterey, California 93940	10
5. Major Paul J. Fardink R.D.2 Farlink Road, Box 636 Ashville, New York 14710	2
6. U.S. Army Aviation Engineering Flight Activity ATTN: Major Loren L. Todd, Mail Stop 217 Edwards Air Force Base, California 93523	1
7. Commander U.S. Army Applied Technology Laboratory Fort Eustis, Virginia 23604	5
8. Dr. Robert B. Clapper 5 Hunter Meadow Ballston Lake, New York 12019	1
9. U.S. Army Structures Laboratory/NASA Langley ATTN: CPT Robert Cramer, U.S.A. Langley Air Force Base, Virginia 23665	1
10. Aviation Safety Programs ATTN: Code 0342g Naval Postgraduate School Monterey, California 93940	1

END

DATE
FILMED

3-83

DTIC